

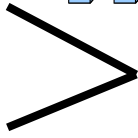
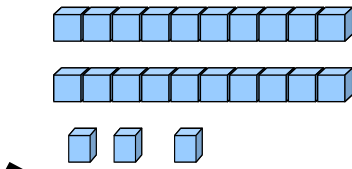
Les nombres dizaines et unités comparer

1) Compare les nombres suivants.

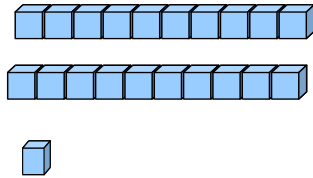
plus grand



plus petit



.....



.....

.....

.....

.....

.....

.....

.....

.....

.....

.....

.....

.....

.....

.....

.....

.....

.....

.....

.....