

Trouve le résultat de chaque bulle.

$5+5$

$5+9$

$5+3$

$5+4$

$5+7$




$5+1$

$5+8$

$5+2$

$5+6$

6
7
8
9
10
11
12
13
14



Compétence : table d'addition 5

Trouve le résultat de chaque bulle.

$6+1$

$6+9$

$6+3$

$6+2$

$6+6$





$6+5$

$6+8$

$6+4$

$6+7$

7
8
9
10
11
12
13
14
15



Compétence : table d'addition 6

Trouve le résultat de chaque bulle.

$7+8$

$7+6$

$7+3$

$7+4$

$7+1$




$7+7$

$7+5$

$7+2$

$7+9$

8
9
10
11
12
13
14
15
16



Compétence : table d'addition 7

Trouve le résultat de chaque bulle.

8+2

8+4

8+7

8+5

8+9


8+3

8+1

8+8

8+6

9
10
11
12
13
14
15
16
17



Compétence : table d'addition 8

Trouve le résultat de chaque bulle.

$9+9$

$9+7$

$9+5$

$9+3$

$9+8$






$9+6$

$9+1$

$9+2$

$9+4$

10
11
12
13
14
15
16
17
18



Compétence : table d'addition 9