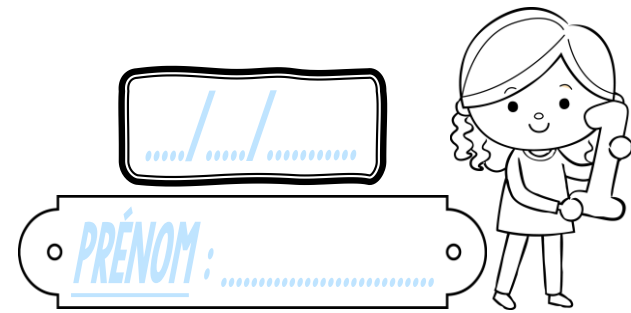
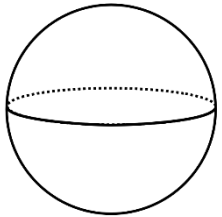


Géométrie

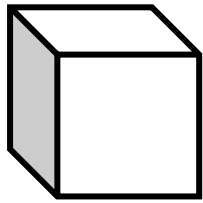
CM2



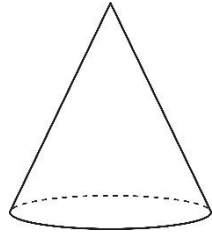
① Ces figures sont-elles des polyèdres ?



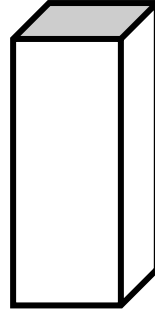
Oui Non



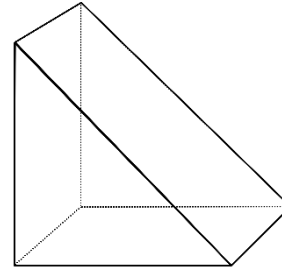
Oui Non



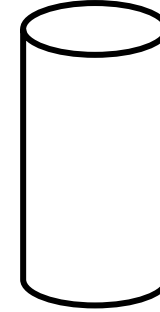
Oui Non



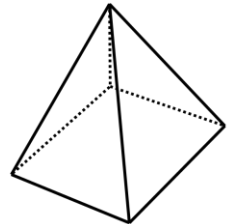
Oui Non



Oui Non

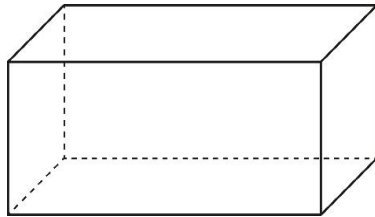
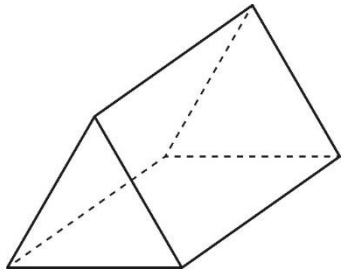


Oui Non



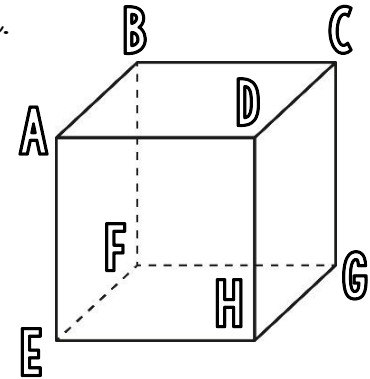

Oui Non

② Observe ces solides, puis réponds aux questions.



- Marque leurs sommets en vert.
- Repasse leurs arêtes en bleu.
- Colorie deux faces opposées en jaune.

③ a) Découpe cette figure.



- Quel est le nom de ce solide ?
- Quelle est la forme de ses faces ?
- Nomme les faces, les arêtes et les sommets de ce solide.