


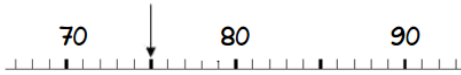
Quel nombre ?

1 ▾

58

75

57



$$10+10+10+10+10 + 1+1+1+1+1+1+1$$



$$10+10+10+10+10 + 1+1+1+1+1+1+1$$



$$10+10+10+10+10+10+10 + 1+1+1+1+1$$

Quel nombre ?

2 ▾

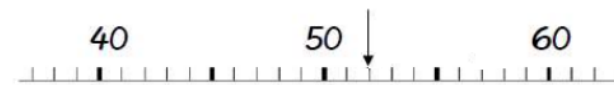
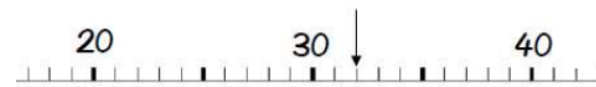
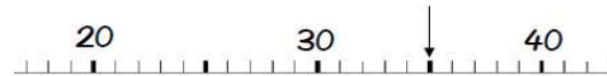
32

35

52



$$10+10+10+10+10 + 1+1$$



$$10+10+10 + 1+1$$



$$10+10+10 + 1+1+1+1+1$$

Quel nombre ?

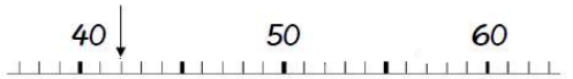
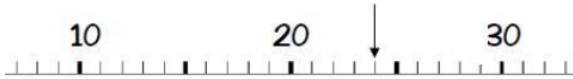
3



42

34

24



$$10+10+10 + 1+1+1+1$$

$$10+10 + 1+1+1+1$$



$$10+10+10+10 + 1+1$$

Quel nombre ?

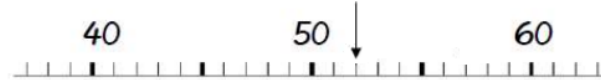
4



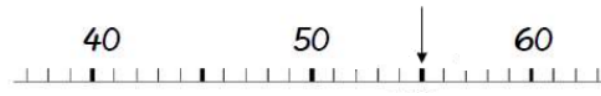
52

55

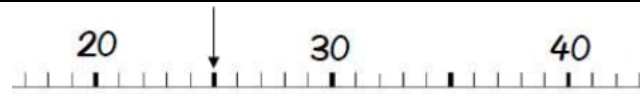
25



$$10+10 + 1+1+1+1$$



$$10+10+10+10+10 + 1+1$$



$$10+10+10+10+10 + 1+1+1+1$$

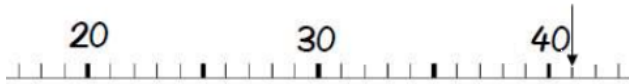
Quel nombre ?

5 ▾

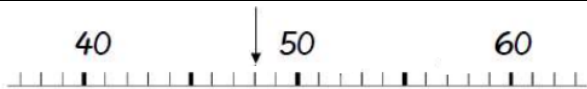
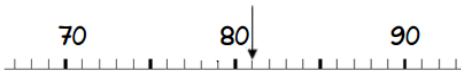
48 41 81



$$10+10+10+10+10+10+10+10 + 1$$



$$10+10+10+10 + 1$$

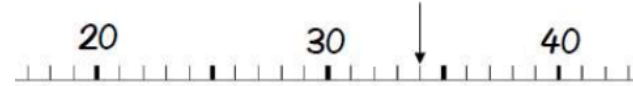


$$10+10+10+10 + 1+1+1+1+1+1+1$$

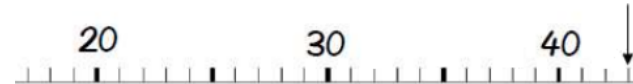
Quel nombre ?

6 ▾

34 44 43



$$10+10+10+10 + 1+1+1+1$$



$$10+10+10 + 1+1+1+1$$



$$10+10+10+10 + 1+1+1$$

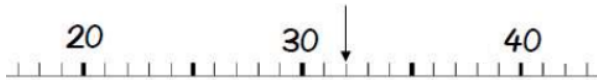


Quel nombre ? 7 ▾

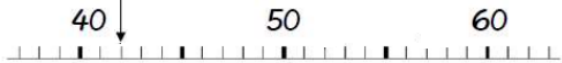
42 32 52



$$10+10+10+10 + 1+1$$



$$10+10+10 + 1+1$$



$$10+10+10+10+10 + 1+1$$

Quel nombre ? 8 ▾

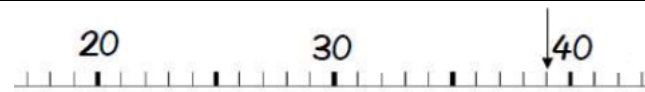
39 25 53



$$10+10 + 1+1+1+1+1$$



$$10+10+10+10 + 1+1+1$$



$$10+10+10 + 1+1+1+1+1+1+1+1$$

