



Prénom: _____




Les nombres de 0 à 10: exercices + et -


Consigne :  calcule



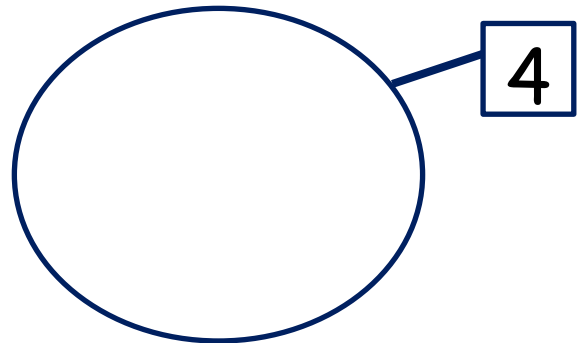
$$3 + \dots = 6$$




$$2 + \dots = 8$$



$$3 + \dots = 9$$



$$0 + \dots = 4$$


Consigne :  calcule

$$3 + 2 = \dots$$


$$2 + 5 = \dots$$

$$4 + 3 = \dots$$

$$0 + 3 = \dots$$



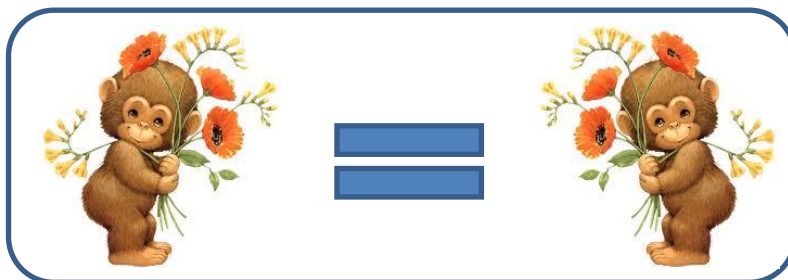

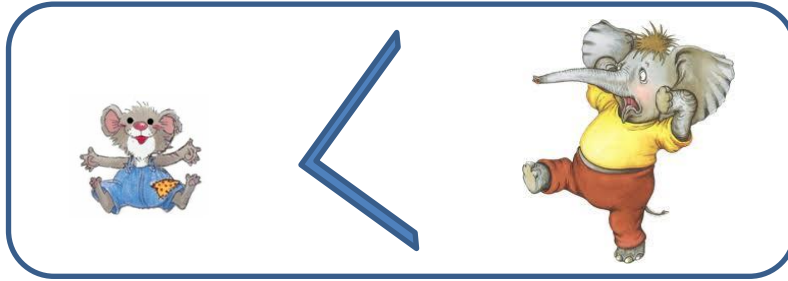
Prénom: _____




Mathématique:
Grandeurs et
mesures

Utiliser correctement les signes $>$, $<$ ou $=$

Rappel



Prénom: _____



Mathématique:
Grandeurs et
mesures

Utiliser correctement les signes $>$, $<$ ou $=$



Écris les signes



.....



.....



.....



.....



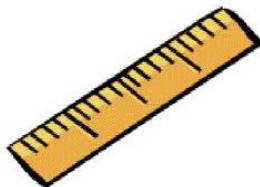
Dessine



$<$



$L =$



$>$




Invente

..... $<$

..... $>$

Prénom: _____

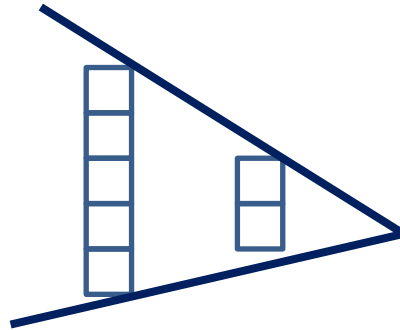
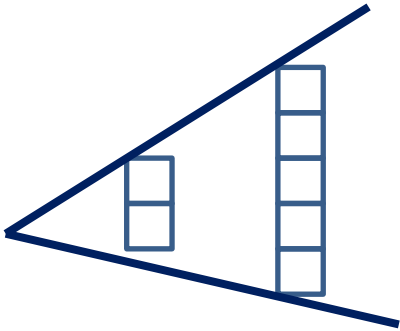


Mathématique:
Grandeurs et
mesures

Utiliser correctement les signes $>$, $<$ ou $=$

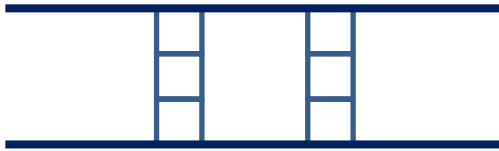


Écris les nombres



..... $<$

..... $>$



..... $=$



Écris les signes



.....




.....



.....



Prénom: _____

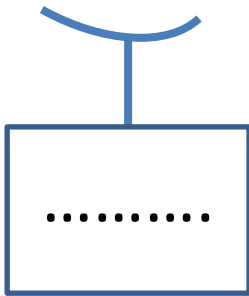


Mathématique:
Grandeurs et
mesures

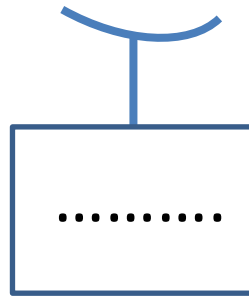
Utiliser correctement les signes $>$, $<$ ou $=$



Dessine les ensembles. Écris les nombres et les signes



.....



Écris les nombres suivants du plus petit au plus grand: **3 - 9 - 4 - 6 - 0**


..... $<$ $<$ $<$ $<$



Écris les nombres suivants du plus grand au plus petit: **2 - 8 - 5 - 7 - 1**

..... $>$ $>$ $>$ $>$

Prénom: _____

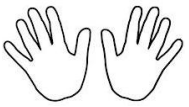


Mathématique:
Grandeurs et
mesures



Utiliser correctement les signes $>$, $<$ ou $=$



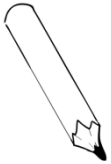
Colorie en vert le dessin le plus grand. Écris les signes



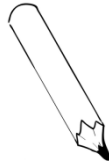
.....



.....




.....



.....



Dessine



$>$



$<$



$=$



Écris les nombres suivants du plus petit au plus grand:

2 - 8 - 0 - 5 - 4

..... $<$ $<$ $<$ $<$