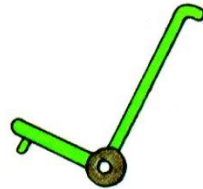


Mathématiques

Dessine les jetons dans la boîte le chariot et complète l'égalité.

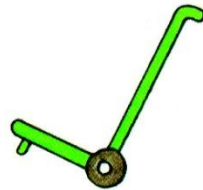
$1 + 2 = \dots\dots\dots$

--	--	--	--	--	--	--



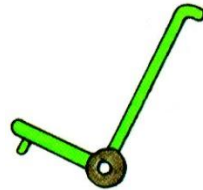
$2 + 2 = \dots\dots\dots$

--	--	--	--	--	--	--



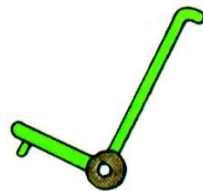
$3 + 1 = \dots\dots\dots$

--	--	--	--	--	--	--



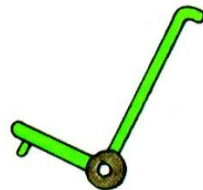
$1 + 4 = \dots\dots\dots$

--	--	--	--	--	--	--



$3 + 2 = \dots\dots\dots$

--	--	--	--	--	--	--

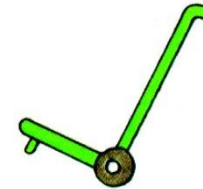


Mathématiques

Dessine les jetons dans la boîte le chariot et complète l'égalité.

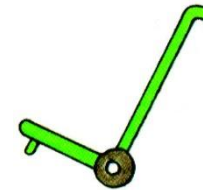
$1 + 2 = \dots\dots\dots$

--	--	--	--	--	--	--



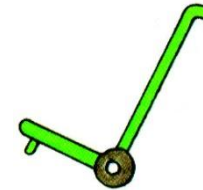
$2 + 2 = \dots\dots\dots$

--	--	--	--	--	--	--



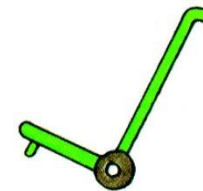
$3 + 1 = \dots\dots\dots$

--	--	--	--	--	--	--



$1 + 4 = \dots\dots\dots$

--	--	--	--	--	--	--



$3 + 2 = \dots\dots\dots$

--	--	--	--	--	--	--

