

Prénom : _____


Fiche de révision du CP

Téléchargé gratuitement sur <https://viedemaitresse.fr>



Mathématiques

1. Ecris les nombres dans les bulles.



2. Ecris les chiffres en lettres.

27 : _____

92 : _____

60 : _____

31 : _____

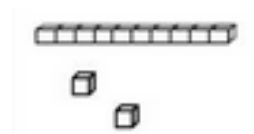

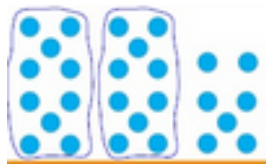
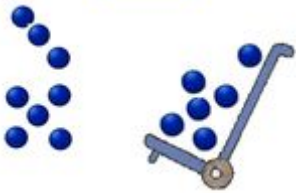
3. Associe chaque nombre à sa représentation.

27

14

12

34



4. Calcule en ligne.

$8 + 2 = \underline{\quad}$

$3 + 4 = \underline{\quad}$

$2 + 9 = \underline{\quad}$

$7 + 5 = \underline{\quad}$

$8 + 9 = \underline{\quad}$

$3 + 6 = \underline{\quad}$

$12 + 7 = \underline{\quad}$

$24 + 6 = \underline{\quad}$

$53 + 7 = \underline{\quad}$

$27 - 4 = \underline{\quad}$

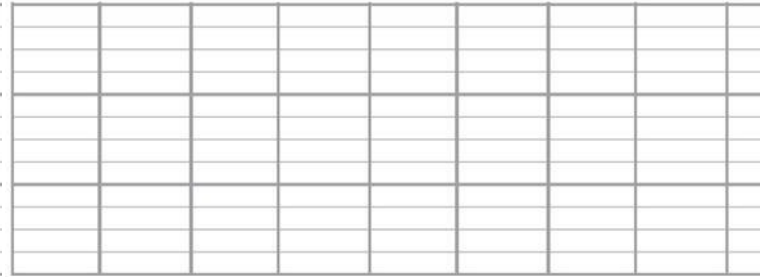
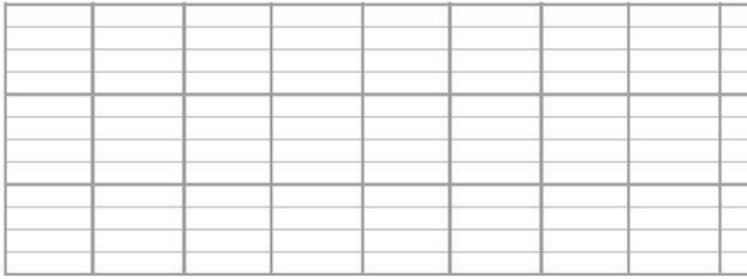
$18 - 3 = \underline{\quad}$

$54 - 2 = \underline{\quad}$

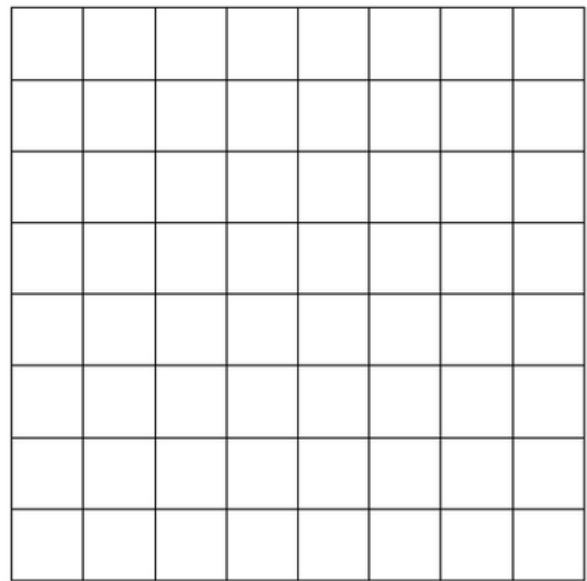
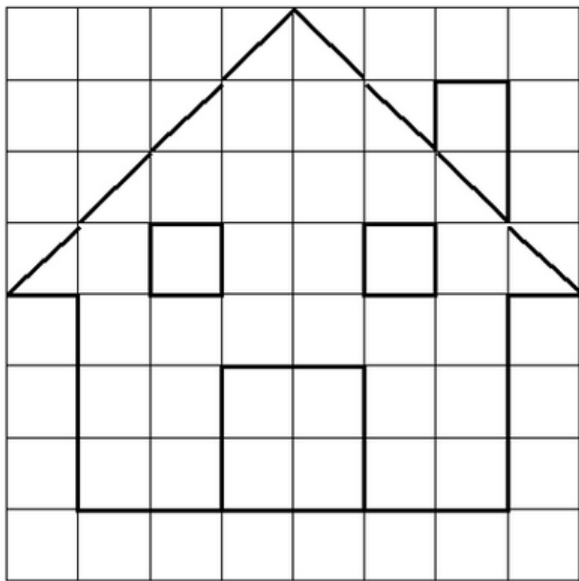
5. Pose et calcule en colonne.

$35 + 52 =$


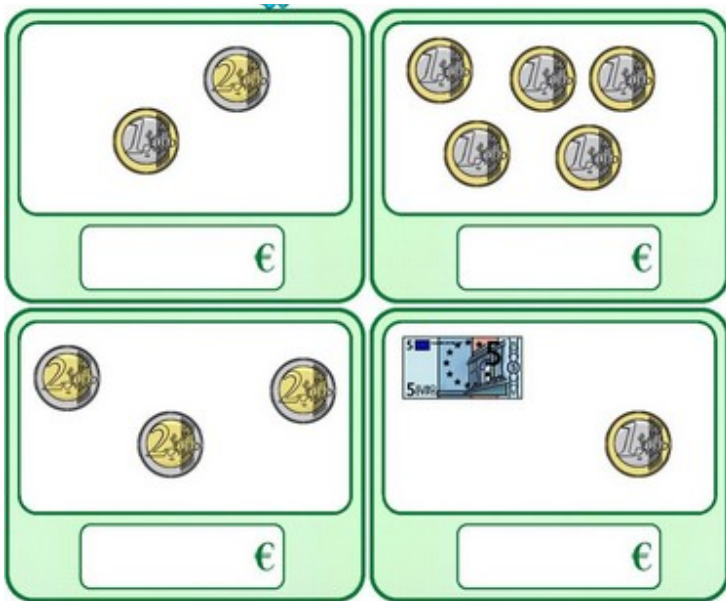
$61 + 29 =$



6. Reproduis la figure au crayon à papier, avec ta règle.



7. Ecris la somme d'argent que contient chaque porte-monnaie.



_____ €



_____ €

Prénom : _____

Fiche de révision du CP

Correction

Mathématiques

1. Ecris les nombres dans les bulles.



2. Ecris les chiffres en lettres.

27 : vingt-sept

92 : quatre-vingt-douze


60 : soixante

31 : trente-et-un

3. Associe chaque nombre à sa représentation.

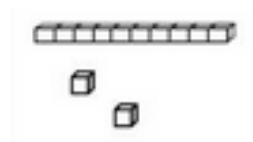


27

14



12

34



4. Calcule en ligne.

$8 + 2 = \underline{10}$

$3 + 4 = \underline{7}$

$2 + 9 = \underline{11}$

$7 + 5 = \underline{12}$

$8 + 9 = \underline{17}$

$3 + 6 = \underline{9}$

$12 + 7 = \underline{19}$

$24 + 6 = \underline{30}$

$53 + 7 = \underline{60}$

$27 - 4 = \underline{23}$

$18 - 3 = \underline{15}$

$54 - 2 = \underline{52}$

5. Pose et calcule en colonne.

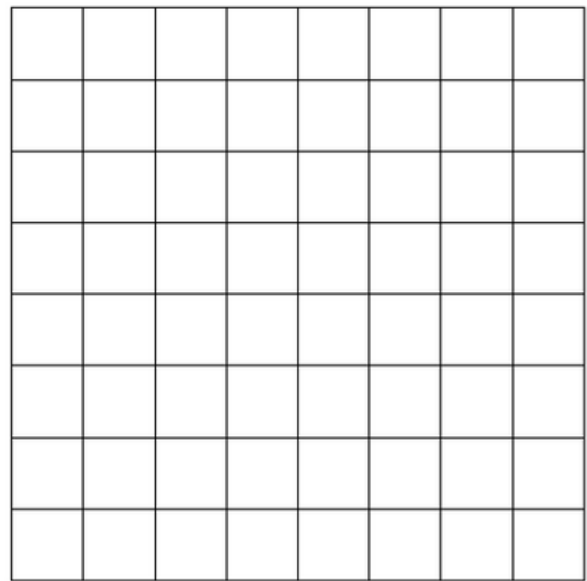
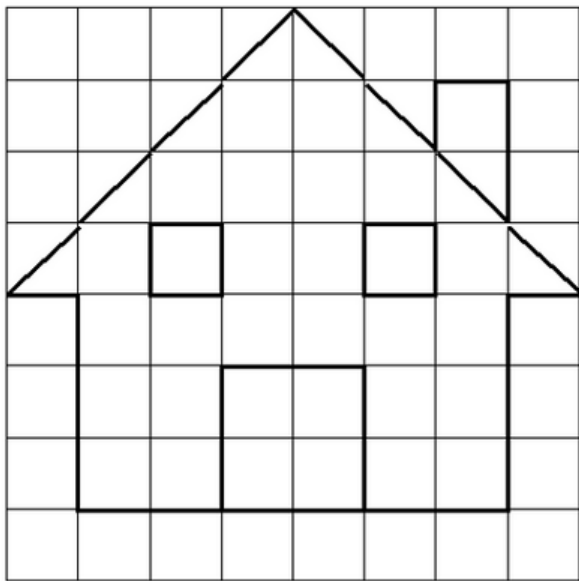
$35 + 52 =$

		3	5							
		+	5	2						
		<hr/>								
			8	7						


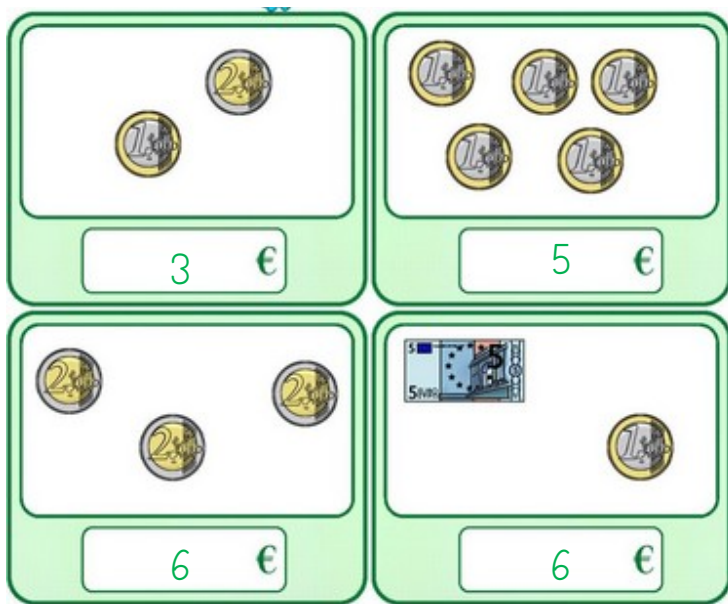
$61 + 29 =$

		1								
		6	1							
		+	2	9						
		<hr/>								
			9	0						

6. Reproduis la figure au crayon à papier, avec ta règle.



7. Ecris la somme d'argent que contient chaque porte-monnaie.



8 €



13 €