



Les nombres de 0 à 40



1 Complète les tableaux



23	→	20 + 3
18	→	-----
30	→	-----
26	→	-----
13	→	-----

25	←	20 + 5
-----	←	20 + 7
-----	←	10 + 7
-----	←	20 + 2
-----	←	10 + 6

2 Relie chaque ballon à son piquet:



3 Complète:

Nombre avant

Nombre

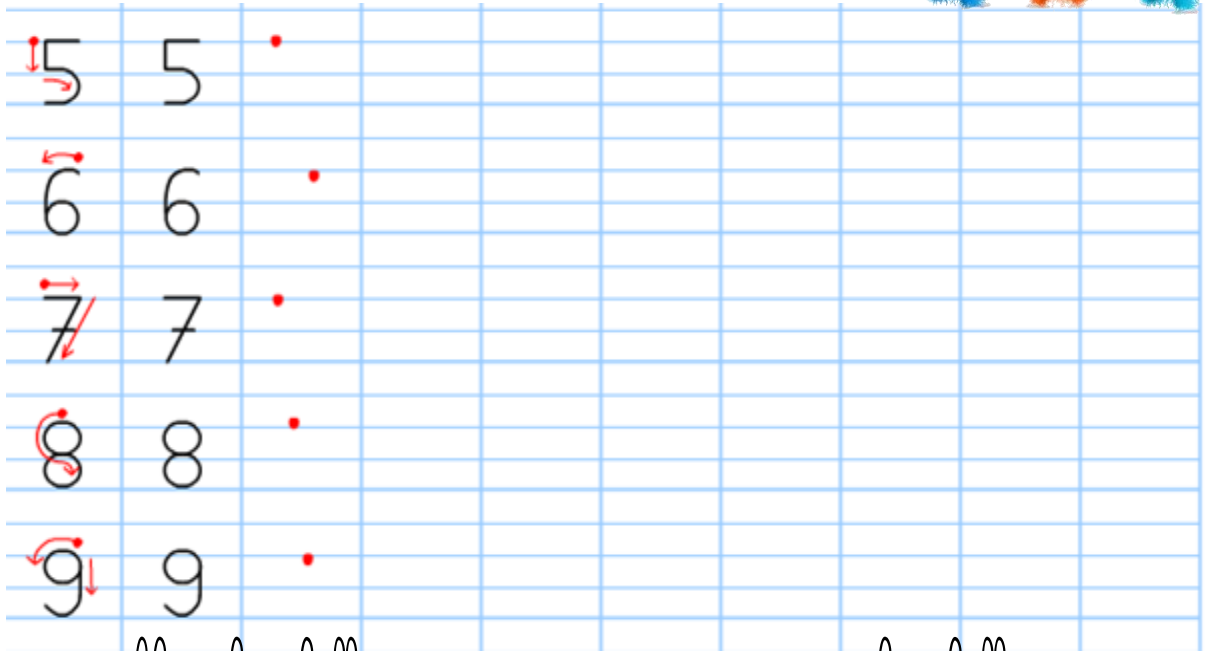
Nombre après

		20		
		22		
		30		
		16		


4 Complète:



Écriture de nombres



1 Colorie en bleu le chiffre des unités et en jaune le chiffre des dizaines



2 Complète le tableau:

25	→	2d + 5u
37	→	___d + ___u
12	→	___d + ___u
22	→	___d + ___u

36	←	3d + 6u
.....	←	2d + 6u
.....	←	1d + 6u
.....	←	8u + 2d

3 Range les nombres dans l'ordre croissant

31 - 4 - 23 - 30 - 19 - 27

Lecture de tableau

Semaine 3 Sept2016

1 Réponds aux questions posées:



A B C D E F



1						
2						
3						
4						

a. Dans quelle case se trouve :

- le clown ?
- l'escargot ?
- la fleur ?

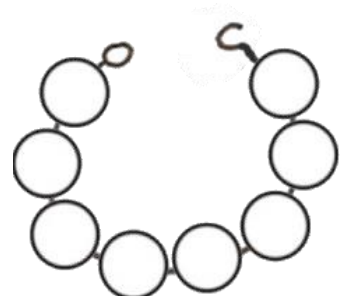
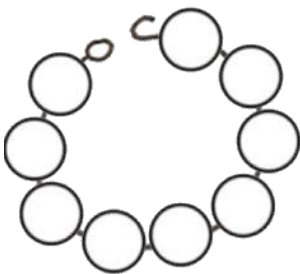
b. Qui se trouve dans la case :

- (B, 1) ?
- (E, 2) ?
- (F, 4) ?


Résolution de problèmes

2 Colorie et réponds à la question:

Annie a 8 perles. 5 perles sont rouges, les autres sont bleues.
Combien Carole a-t-elle de perles bleues ?



Elle a _____ perles bleues



Calculs simples

1 Complète et calcule:



$2+4= \underline{\quad}$



$4+4= \underline{\quad}$



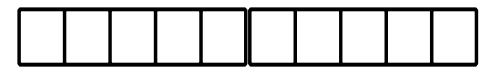
$1+6= \underline{\quad}$



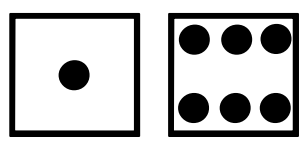
$3+5= \underline{\quad}$



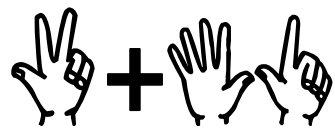
$1+5= \underline{\quad}$



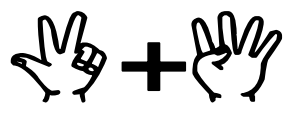
$2+7= \underline{\quad}$



$1+ \underline{\quad} = \underline{\quad}$



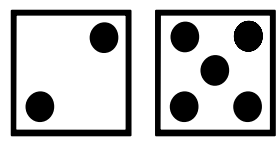
$\underline{\quad} + 7 = \underline{\quad}$



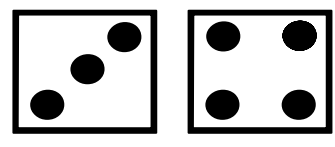
$3+ \underline{\quad} = \underline{\quad}$



$2+ \underline{\quad} = \underline{\quad}$



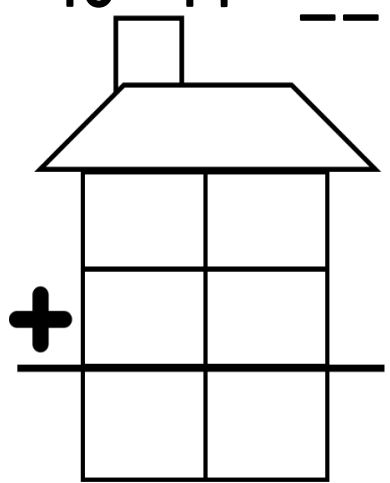
$2+ \underline{\quad} = \underline{\quad}$



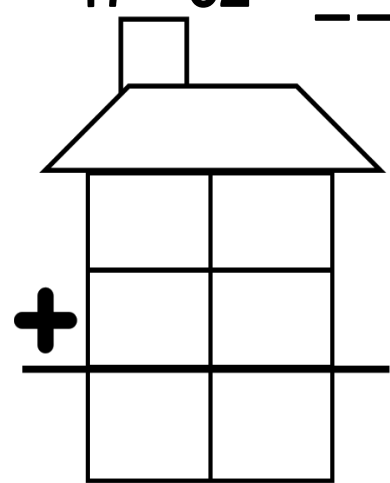
$\underline{\quad} + 4 = \underline{\quad}$

2 Pose et calcule

$15+14= \underline{\quad}$



$47+32= \underline{\quad}$



$62+15= \underline{\quad}$

