

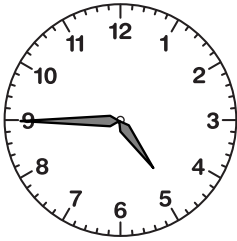
Reading the Time

Name: _____ Date: _____



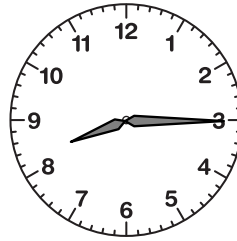
Write the time that each clock is showing.

(1)




The time is _____.

(2)



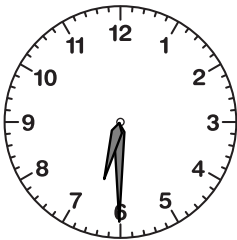
The time is _____.

(3)




The time is _____.

(4)




The time is _____.

(5)




The time is _____.

(6)




The time is _____.

(7)




The time is _____.

(8)




The time is _____.

(9)




The time is _____.

(10)




The time is _____.

(11)



The time is _____.

(12)



The time is _____.

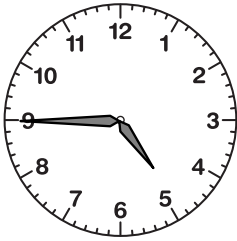
Reading the Time

ANSWER KEY



Write the time that each clock is showing.

(1)



The time is 4:45.

(2)



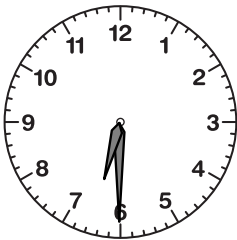
The time is 8:15.

(3)




The time is 11:00.

(4)




The time is 6:30.

(5)




The time is 11:45.

(6)




The time is 5:00.

(7)




The time is 1:30.

(8)




The time is 8:00.

(9)




The time is 1:15.

(10)




The time is 3:45.

(11)



The time is 1:45.

(12)



The time is 9:00.