




**Complète :**




Il est .....




Il est .....




Il est .....




Il est .....




Il est .....



Il est .....




Il est .....




Il est .....


**Dessine la petite aiguille et la grande aiguille :**




Il est cinq heures.




Il est dix-huit heures.




Il est trois heures et quart.




Il est huit heures et demie.




Il est 22 h 30.



Il est sept heures moins le quart.



Il est onze heures et quart.



Il est 11 h 25.