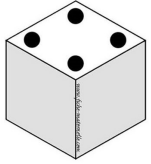
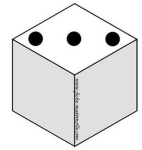


Colorie la case d'arrivée et écris le calcul.



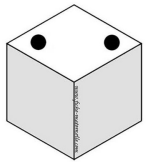
1	2	3	4	5	6	
---	----------	---	---	---	---	--

... + ... = ...



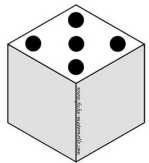
1	2	3	4	5	6	
---	---	----------	---	---	---	--

... + ... = ...



4	5	6	7	8	9	
---	----------	---	---	---	---	--

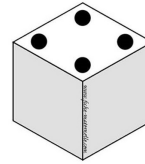
... + ... = ...



3	4	5	6	7	8	
----------	---	---	---	---	---	--

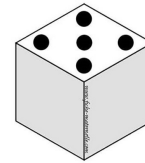
... + ... = ...

Colorie la case d'arrivée et écris le calcul.



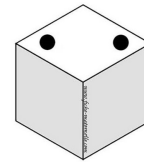
4	5	6	7	8	9	
---	----------	---	---	---	---	--

... + ... = ...



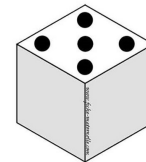
3	4	5	6	7	8	
----------	---	---	---	---	---	--

... + ... = ...



3	4	5	6	7	8	
----------	---	---	---	---	---	--

... + ... = ...



4	5	6	7	8	9	
----------	---	---	---	---	---	--

... + ... = ...