



CARTABLE
FANTASTIQUE

CYCLE 2 - LES NOMBRES

Compter de 60 à 99

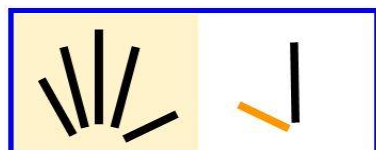
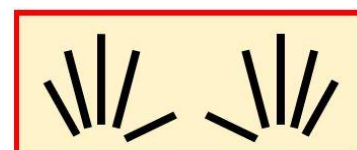
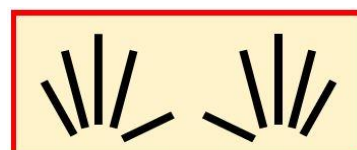
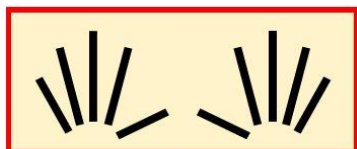
Le cahier d'exercices pour la classe



De 60 à 69



Je montre

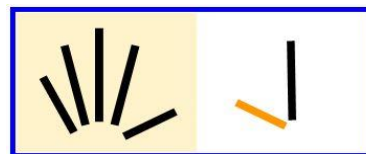
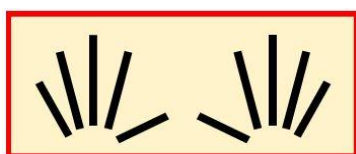
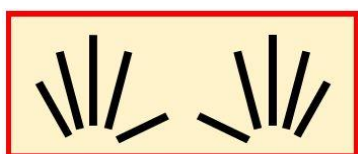
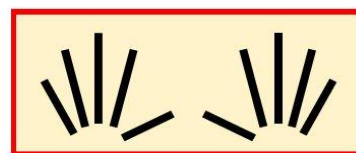
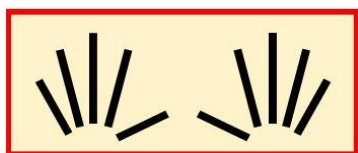
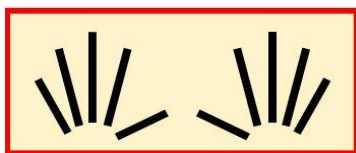
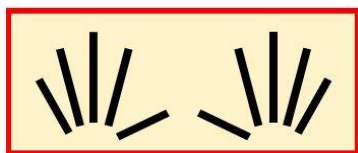


Je lis

67 → soixante-sept



Je montre



Je lis

67 → soixante-sept



1 Place les cartons sur ton bureau pour faire :

62 - 65 - 60

2 Complète la file numérique :

60		62			65	66			59
----	--	----	--	--	----	----	--	--	----

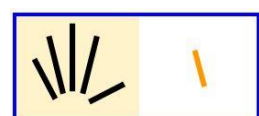
3 Est-ce que ça fait ... :

64 ?



Oui Non















67 ?



Oui Non



4 Combien ça fait ? Entoure le bon nombre.



60 64 67

61 65 68

5 Complète les files numériques de 2 en 2 :

	61		63	
--	----	--	----	--

	62		66	
--	----	--	----	--

6 Place les cartons sur ton bureau pour faire :

60 - 64 - 69



7 Colorie les paquets de 10 en rouge et les unités en bleu.

66

10 10 10 10 10 10 10 10 10 10.

1 1 1 1 1 1 1 1 1 1

63

10 10 10 10 10 10 10 10 10 10.

1 1 1 1 1 1 1 1 1 1

65

10 10 10 10 10 10 10 10 10 10.

1 1 1 1 1 1 1 1 1 1

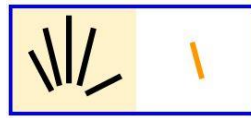
68

10 10 10 10 10 10 10 10 10 10.

1 1 1 1 1 1 1 1 1 1



8 Combien ça fait ? Entoure le bon nombre.



61

66

69



64

65

66







9 Complète les files numériques de 3 en 3 :





60		66	
----	--	----	--






57		63		69
----	--	----	--	----

59			68
----	--	--	----

10 Combien ça fait ? Écris le bon nombre :



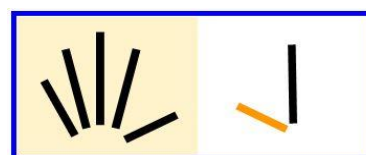
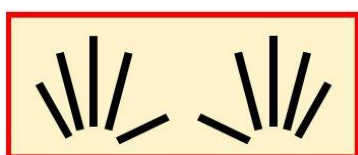
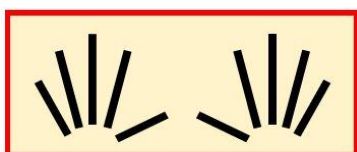
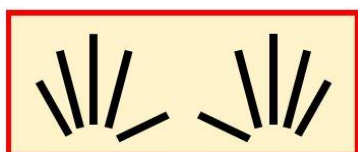
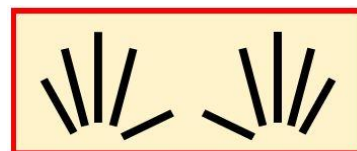
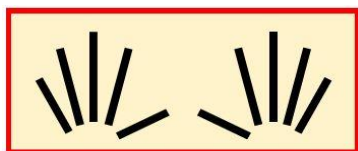
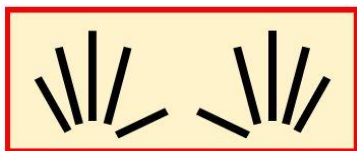
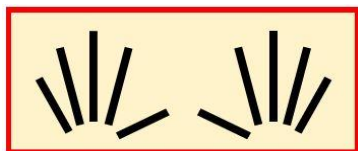




De 70 à 79



Je montre




Je lis

77 → soixante-dix-sept


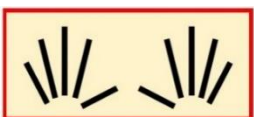
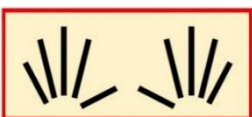
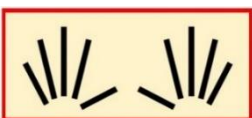


1 Est-ce que ça fait ... :

75 ? oui non



77 ? oui non





2 Place les cartons sur ton bureau pour faire :

72

75

78

71

74

76

3 Complète les files numériques :

De 1 en 1 :

	71	73				76		78	79
--	----	----	--	--	--	----	--	----	----

De 2 en 2 :

70		74		78
----	--	----	--	----

71		45		49
----	--	----	--	----









De 3 en 3 :

70		76	
----	--	----	--

71			80
----	--	--	----











4 Combien ça fait ? Entoure le bon nombre.



71

76

78



70

75


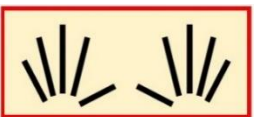
79



5 Combien ça fait ? Entoure le bon nombre.



74 75 76



77 78 79



6 Colorie les paquets de 10 en rouge et les unités en bleu.

75

10 10 10 10 10 10 10 10 10 10.

1 1 1 1 1 1 1 1 1 1

72

10 10 10 10 10 10 10 10 10 10.

1 1 1 1 1 1 1 1 1 1

76

10 10 10 10 10 10 10 10 10 10.

1 1 1 1 1 1 1 1 1 1

73


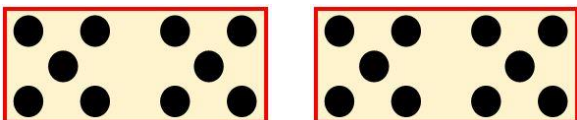
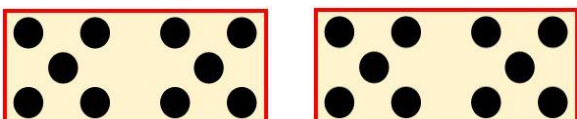
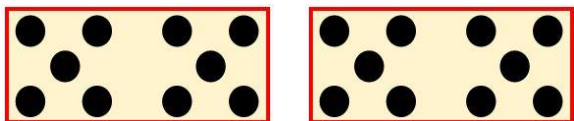
10 10 10 10 10 10 10 10 10 10.

1 1 1 1 1 1 1 1 1 1



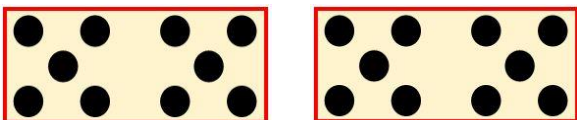
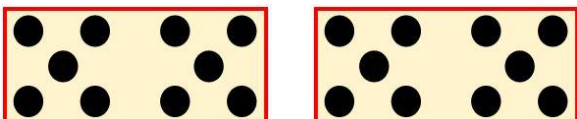
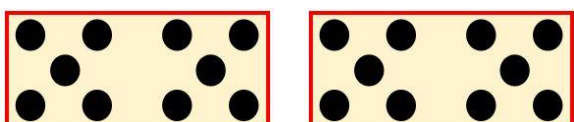


7 Est-ce que ça fait :

75 ? oui non

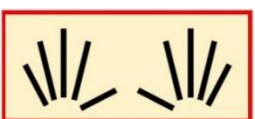
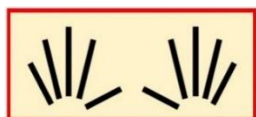



77 ? oui non.





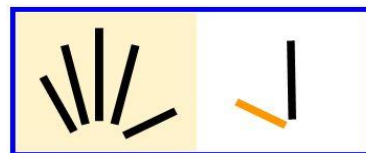
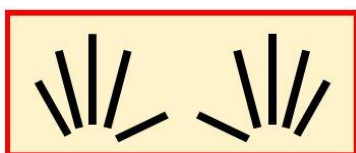
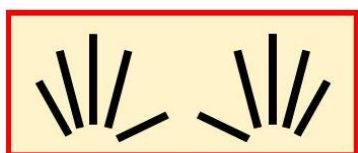
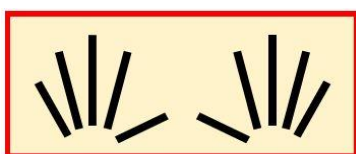
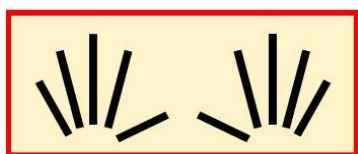
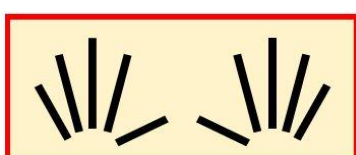
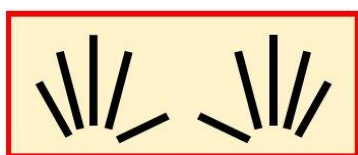
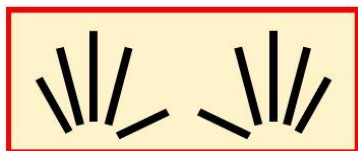
8 Combien ça fait ? Écris le bon nombre :



De 80 à 89



Je montre



Je lis

87 → quatre-vingt-sept

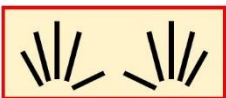


1 Est-ce que ça fait ... :

83 ? oui non



80 ? oui non





2 Place les cartons sur ton bureau pour faire :

82

87

89

83

85

81

3 Complète les files numériques :

De 1 en 1 :

80			83		85			88	
----	--	--	----	--	----	--	--	----	--

De 2 en 2 :

80			86	
----	--	--	----	--

79		83			89
----	--	----	--	--	----










De 3 en 3 :

80	83		
----	----	--	--

	84		90
--	----	--	----












4 Combien ça fait ? Entoure le bon nombre.



81

82

83



85

86

87



5 Combien ça fait ? Entoure le bon nombre.



81

89

84



88

86

83



6 Colorie les paquets de 10 en rouge et les unités en bleu.

88

10 10 10 10 10 10 10 10 10 10.

1 1 1 1 1 1 1 1 1 1

83

10 10 10 10 10 10 10 10 10 10.

1 1 1 1 1 1 1 1 1 1

86

10 10 10 10 10 10 10 10 10 10.

1 1 1 1 1 1 1 1 1 1

81










10 10 10 10 10 10 10 10 10 10.

1 1 1 1 1 1 1 1 1 1












7 Est-ce que ça fait :

89 ? oui non



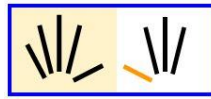
87 ? oui non





8 Combien ça fait ? Écris le bon nombre :



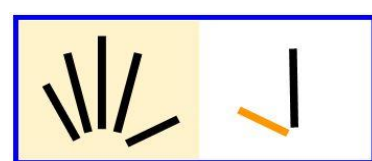
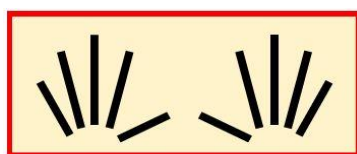
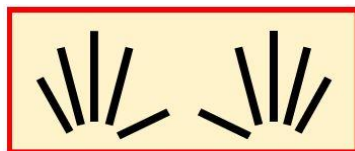
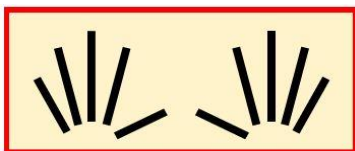
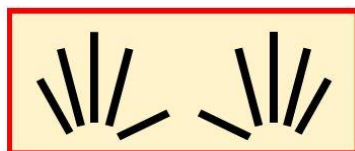
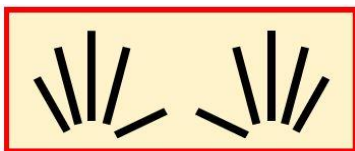
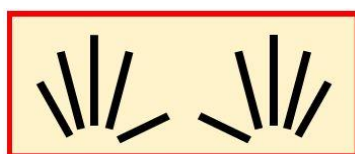
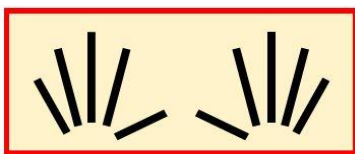
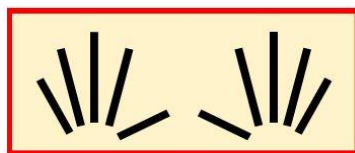
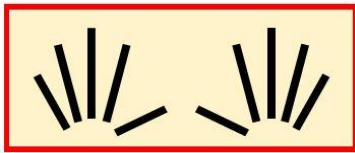




De 90 à 99



Je montre



Je lis

97 → quatre-vingt-dix-sept



1 Est-ce que ça fait ... :

92 ?

oui

non



96 ?

oui

non





2 Place les cartons sur ton bureau pour faire :

90

94

95

97

96

99

3 Complète les files numériques :

De 1 en 1 :

	91	92			95	96			99
--	----	----	--	--	----	----	--	--	----

De 2 en 2 :

90		94		
----	--	----	--	--

89			95	97	
----	--	--	----	----	--


De 3 en 3 :

	93	96	
--	----	----	--

91			99
----	--	--	----













4 Combien ça fait ? Entoure le bon nombre.



93

95

97



98

94

92



5 Combien ça fait ? Entoure le bon nombre.



90

91

92



93

94

95



6 Colorie les paquets de 10 en rouge et les unités en bleu.

92

10 10 10 10 10 10 10 10 10 10.

1 1 1 1 1 1 1 1 1 1

96

10 10 10 10 10 10 10 10 10 10.

1 1 1 1 1 1 1 1 1 1

91

10 10 10 10 10 10 10 10 10 10.

1 1 1 1 1 1 1 1 1 1

97

10 10 10 10 10 10 10 10 10 10.

1 1 1 1 1 1 1 1 1 1



7 Combien ça fait ? Écris le bon nombre :

