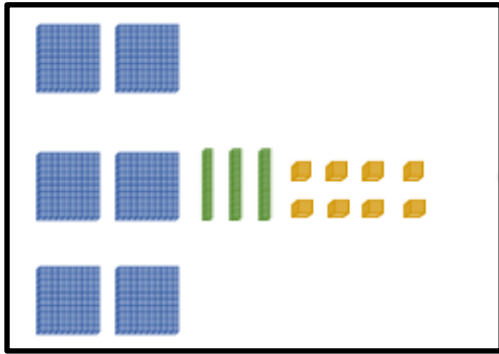


N2 Comment représenter les nombres

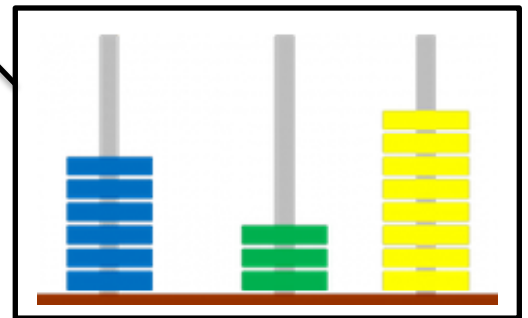


six-cent-trente-huit

c	d	u
6	3	8

$6c + 3d + 1u$

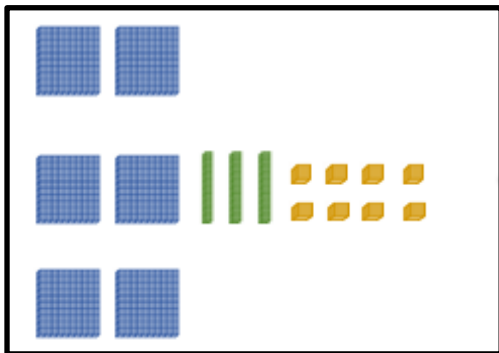
638



$$600 + 30 + 8$$

$$6 \times 100 + 3 \times 10 + 8 \times 1$$

N2 Comment représenter les nombres

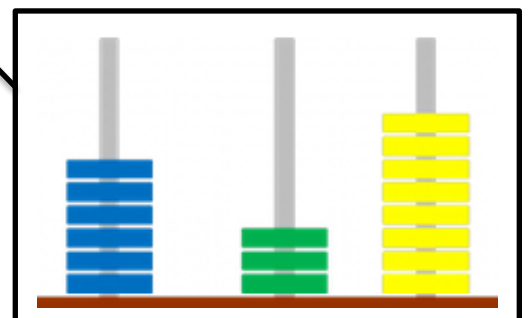


six-cent-trente-huit

c	d	u
6	3	8

$6c + 3d + 1u$

638



$$600 + 30 + 8$$

$$6 \times 100 + 3 \times 10 + 8 \times 1$$