



Egal, différent de




CP

Date :

Prénom :

Mathématiques

1 Écris le signe qui convient : = ou ≠.

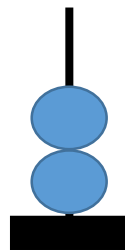
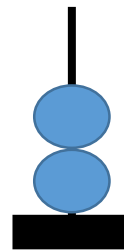
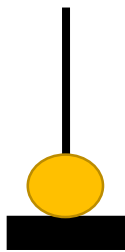

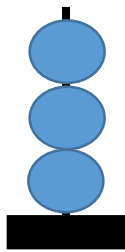
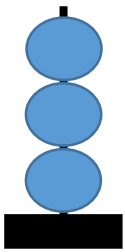


5 4

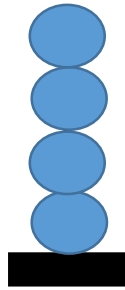
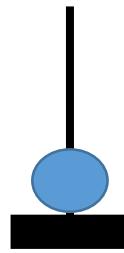
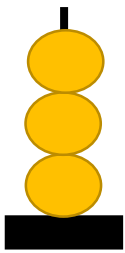

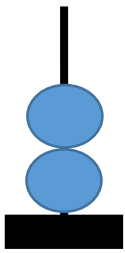
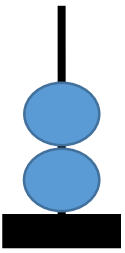
4 4

7 6

2 Écris les nombres et les signes qui conviennent.



3 Dessine les boules qui manquent pour qu'il y ait égalité et écris le nombre correspondant.



2 =

4 Complète.

5 =

7 ≠

10 =




Egal, différent de





CP

Date :

Prénom :

Mathématiques

1  Écris le signe qui convient : = ou ≠.

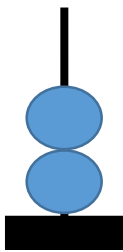
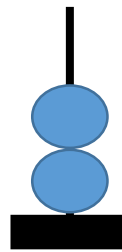


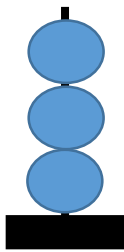
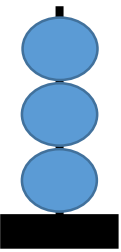



5 4

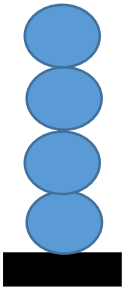
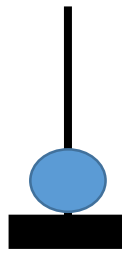
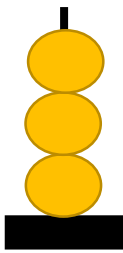

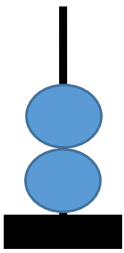
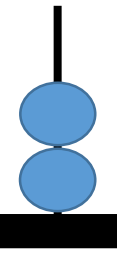
4 4

7 6

2  Écris les nombres et les signes qui conviennent.



3  Dessine les boules qui manquent pour qu'il y ait égalité et écris le nombre correspondant.



2 =

4  Complète.

5 =

7 ≠

10 =