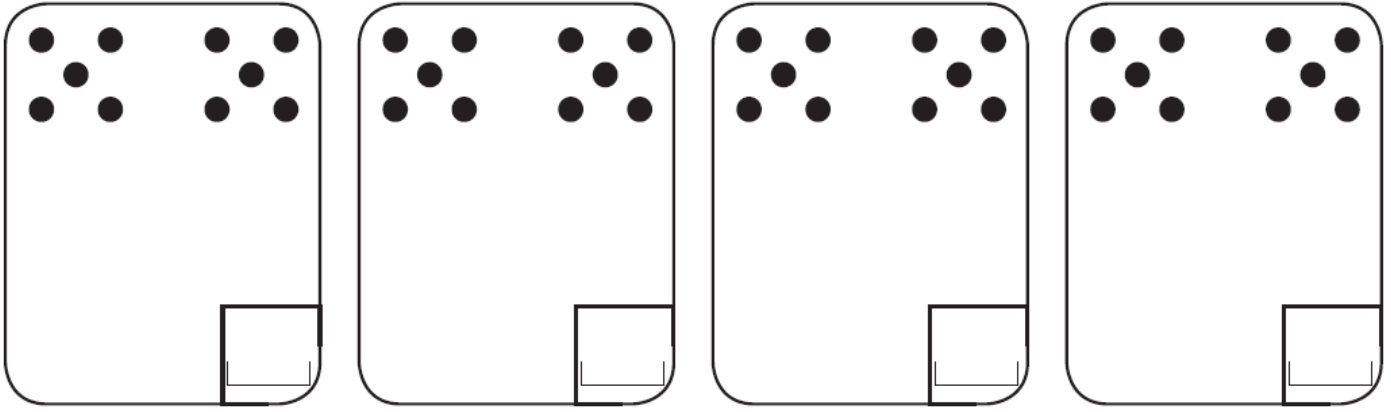
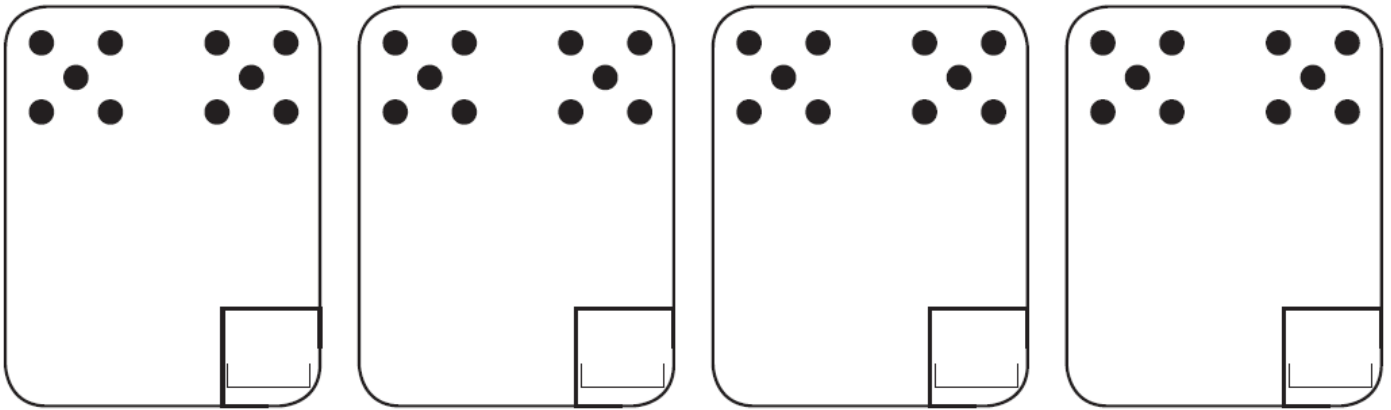


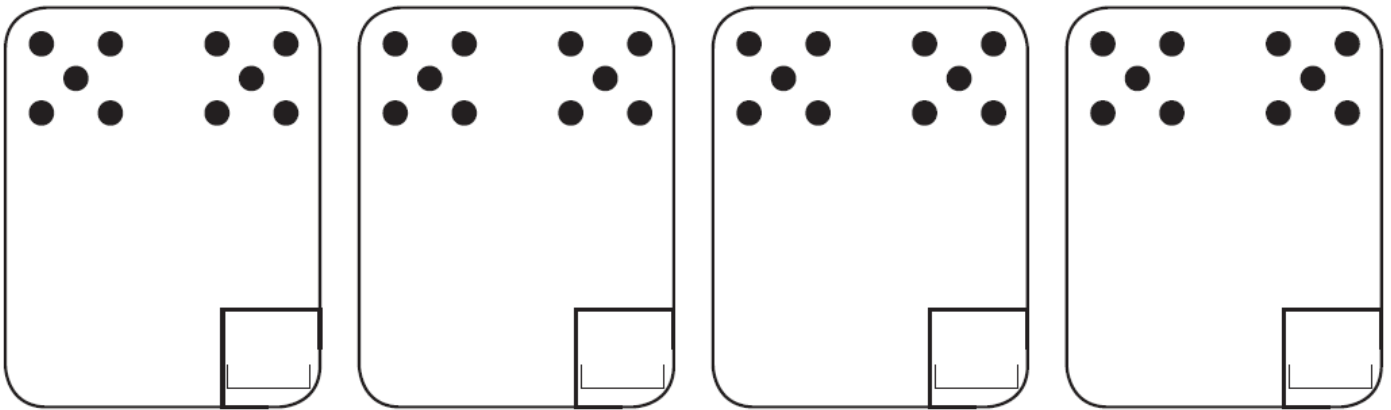
Dessine les points qui manquent.



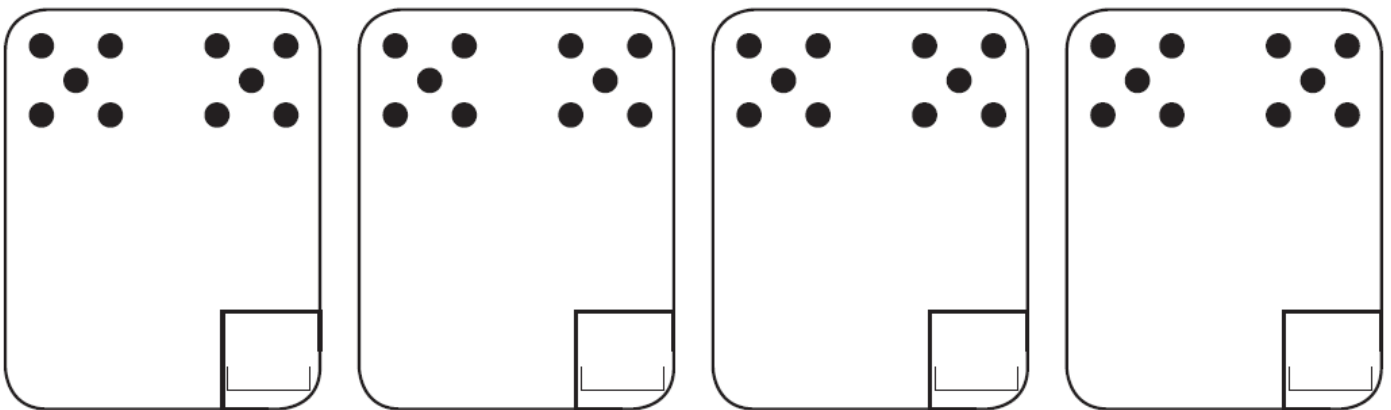
Dessine les points qui manquent.




Dessine les points qui manquent.




Dessine les points qui manquent.




Il faut 10 billes dans chaque sac.
Écris combien il en manque.



Il manque billes.




Il manque billes.




Il manque billes.


Il faut 10 billes dans chaque sac.
Écris combien il en manque.



Il manque billes.



Il manque billes.




Il manque billes.


Il faut 10 billes dans chaque sac.
Écris combien il en manque.



Il manque billes.



Il manque billes.



Il manque billes.

Complète.

$$\square + \dots = 10$$

$$\square + \dots = 10$$

$$\square + \dots = 10$$

$$\square + \dots = 10$$

$$\square + \square + \dots = 10$$

$$\square + \square + \dots = 10$$

Complète.

$$\square + \dots = 10$$

$$\square + \dots = 10$$

$$\square + \dots = 10$$

$$\square + \dots = 10$$

$$\square + \square + \dots = 10$$

$$\square + \square + \dots = 10$$

Complète.

$$\square + \dots = 10$$

$$\square + \dots = 10$$

$$\square + \dots = 10$$

$$\square + \dots = 10$$

$$\square + \square + \dots = 10$$

$$\square + \square + \dots = 10$$

Complète.

$$\square + \dots = 10$$

$$\square + \dots = 10$$

$$\square + \dots = 10$$

$$\square + \dots = 10$$

$$\square + \square + \dots = 10$$

$$\square + \square + \dots = 10$$

Complète.

$$\square + \dots = 10$$

$$\square + \dots = 10$$

$$\square + \dots = 10$$

$$\square + \dots = 10$$

$$\square + \square + \dots = 10$$

$$\square + \square + \dots = 10$$

Complète.

$$\square + \dots = 10$$

$$\square + \dots = 10$$

$$\square + \dots = 10$$

$$\square + \dots = 10$$

$$\square + \square + \dots = 10$$

$$\square + \square + \dots = 10$$

Complète.

$$\square + \dots = 10$$

$$\square + \dots = 10$$

$$\square + \dots = 10$$

$$\square + \dots = 10$$

$$\square + \square + \dots = 10$$

$$\square + \square + \dots = 10$$