

Prénom :

Date :

NUMERATION CYCLE 3

Les fractions

1) Ecris en lettres les fractions suivantes.

1 :

1 :

2

3

3 :

1 :


4

10

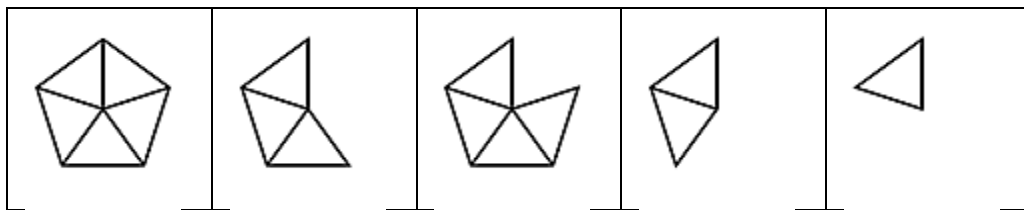
3 :

100

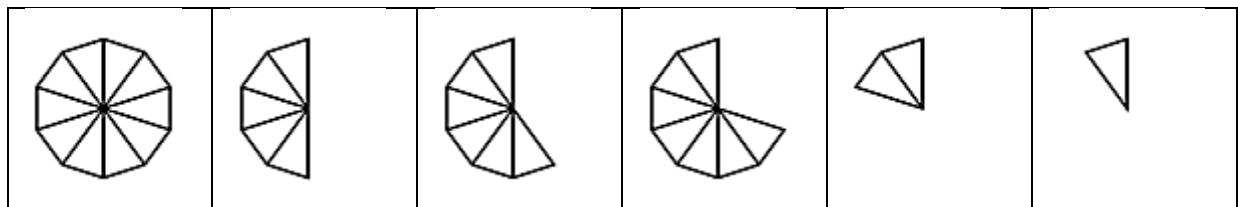
2) Ecris les fractions sur la droite : 2/10, 6/10, 8/10, 11/10, 14/10.



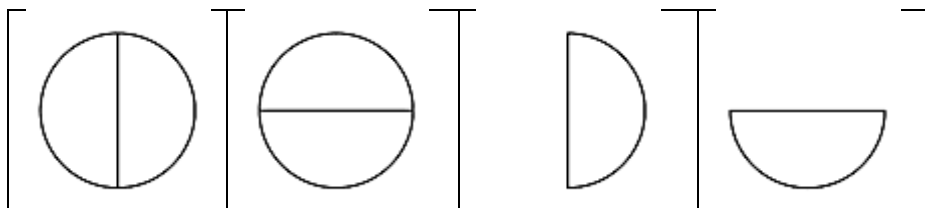
3) Ecris les fractions correspondantes.



— — — — —



— — — — —



— — — — —