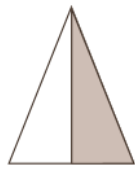
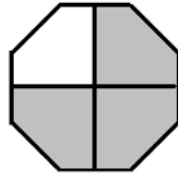



1) Écris en bleu la fraction représentant la partie colorée de chaque figure et en rouge la partie blanche. Réponds dans les petits carrés.



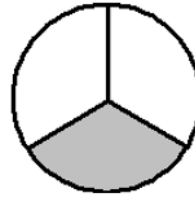
--	--



--	--



--	--



--	--

2) Représente les fractions suivantes en coloriant chaque figure.




$$\frac{1}{4}$$



$$\frac{1}{2}$$



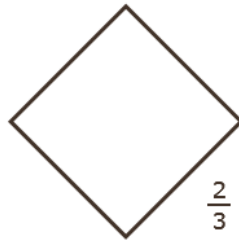
$$\frac{1}{3}$$



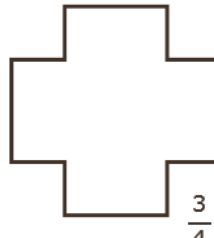
$$\frac{2}{4}$$



$$\frac{1}{2}$$

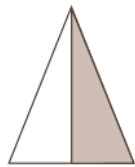


$$\frac{2}{3}$$

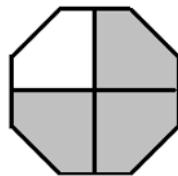


$$\frac{3}{4}$$


1) Écris en bleu la fraction représentant la partie colorée de chaque figure et en rouge la partie blanche. Réponds dans les petits carrés.



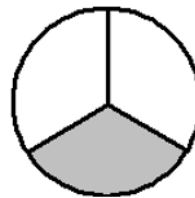
--	--



--	--



--	--



--	--

2) Représente les fractions suivantes en coloriant chaque figure.



$$\frac{1}{4}$$



$$\frac{1}{2}$$



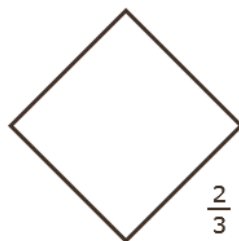
$$\frac{1}{3}$$



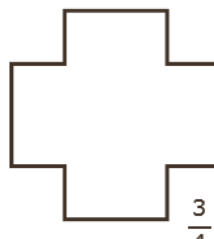
$$\frac{2}{4}$$



$$\frac{1}{2}$$



$$\frac{2}{3}$$



$$\frac{3}{4}$$