

1. Calcul mental :  **Déplacement sur la file numérique.**



__	__	__	__	__
----	----	----	----	----

2. Connaître des répertoires additifs



Relie chaque étiquette au calcul qui lui correspond.

6

7

8

3+3

2+5

4+2

7+1

4+3


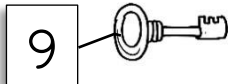


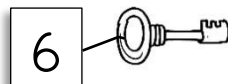
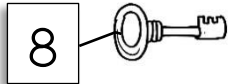


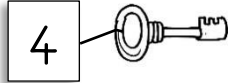
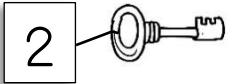
3+5

6+2

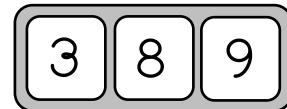
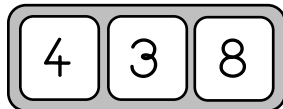
3. Trouver les paires qui font 9 :



Colorie de la même couleur les paires qui font 9.



4. Comparer trois nombres :  **Colorie** le plus grand des 3 nombres.



5. Problème



Pipo et Lila se partagent 8 images.
Ils en veulent autant chacun.

Combien d'images pour Pipo ? Combien d'images pour Lila ?

→ Pipo a __ images. Lila a __ images.

