

CALCULS LACUNAIRES

$$45 + \dots = 75$$

$$80 - \dots = 60$$

$$\dots + 45 = 75$$

$$\dots - 20 = 60$$



CALCULS LACUNAIRES

$$45 + \dots = 75$$

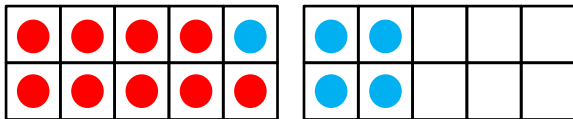
$$80 - \dots = 60$$

$$\dots + 45 = 75$$

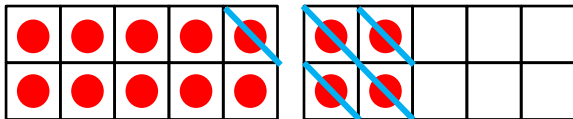
$$\dots - 20 = 60$$



LE PASSAGE A LA DIZAINE

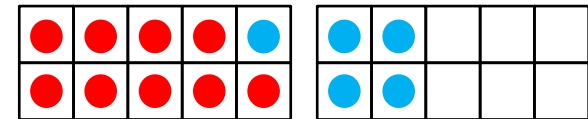


$$9 + 5 = (9 + 1) + 4 = 14$$

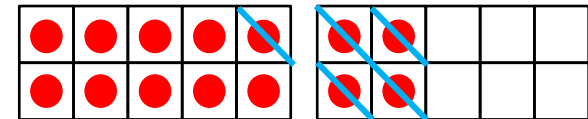


$$14 - 5 = (14 - 4) - 1 = 9$$

LE PASSAGE A LA DIZAINE



$$9 + 5 = (9 + 1) + 4 = 14$$



$$14 - 5 = (14 - 4) - 1 = 9$$