




## Réponds



Il y a  marguerites.

il y a  tulipes

il y a  roses

En tout il y a  f.....

Écris une égalité : \_\_\_\_\_



## Calcule

$2 + 1 + 0 =$

$3 + 2 + 1 =$

$1 + 0 + 3 + 2 =$

$2 + 2 + 2 =$

$3 + 3 + 1 =$

$2 + 2 + 3 + 1 =$

$0 + 3 + 2 + 1 =$

$0 + 1 + 2 =$

$3 + 2 + 2 + 0 =$

$2 + 1 + 0 + 2 =$

$2 + 1 + 1 + 1 =$

$3 + 3 + 0 + 2 =$



## Écris

7

8


 Dessine comme Patti.

6 doigts

9 doigts

10 doigts

 compte Calcule.



$$6 - 3 =$$




$$4 - 1 =$$




$$6 - 2 =$$


 compte Calcule.



$$5 - 3 =$$



$$4 - 2 =$$

 Dessine, barre et calcule.

$$6 - 1 =$$

$$5 - 2 =$$