

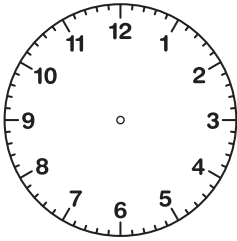
Drawing the Time

Name: _____ Date: _____



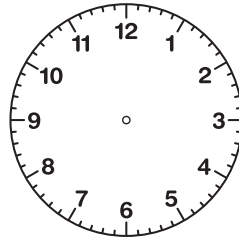
Draw the hands of each clock to show the correct time.

(1)



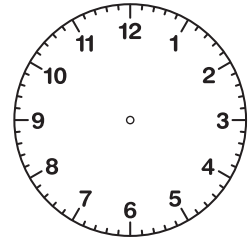
The time is 2:30.

(2)



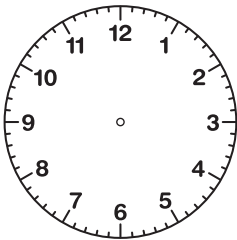
The time is 12:00.

(3)



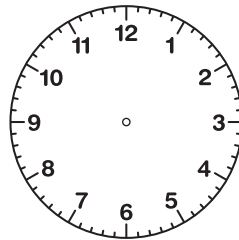
The time is 3:00.

(4)



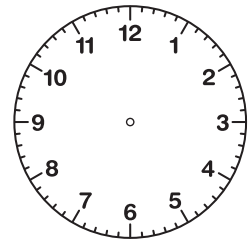
The time is 2:00.

(5)



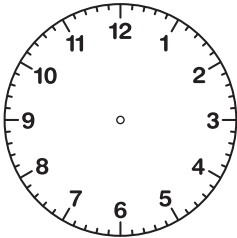
The time is 7:00.

(6)



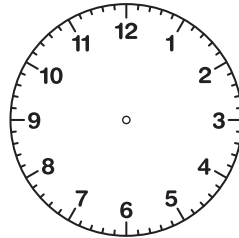
The time is 8:30.

(7)



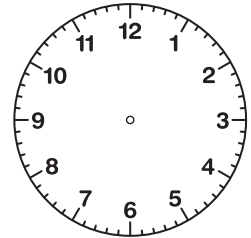
The time is 1:00.

(8)



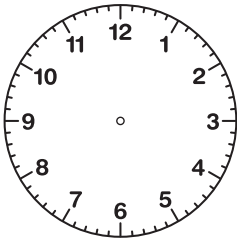
The time is 11:30.

(9)



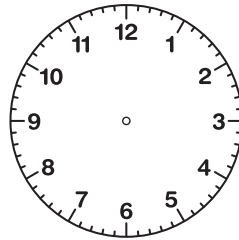
The time is 7:30.

(10)



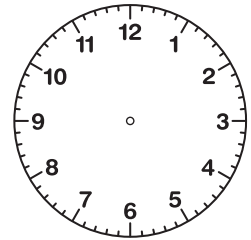
The time is 8:00.

(11)



The time is 4:00.

(12)



The time is 1:30.

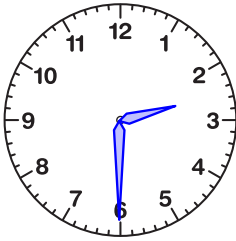
Drawing the Time

ANSWER KEY



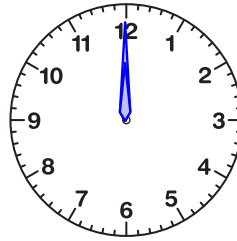
Draw the hands of each clock to show the correct time.

(1)



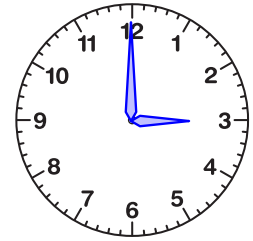
The time is 2:30.

(2)



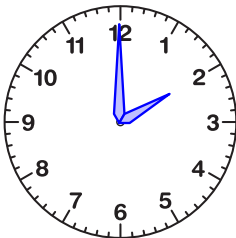
The time is 12:00.

(3)



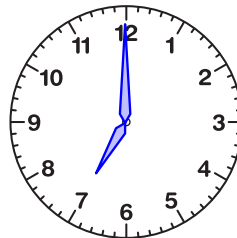
The time is 3:00.

(4)



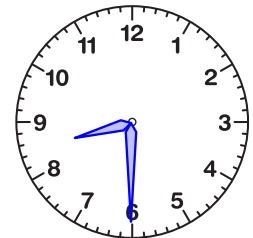
The time is 2:00.

(5)



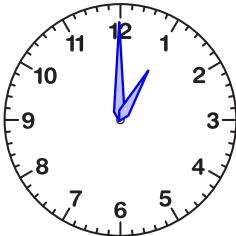
The time is 7:00.

(6)



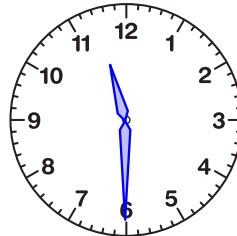
The time is 8:30.

(7)



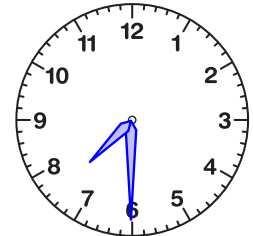
The time is 1:00.

(8)



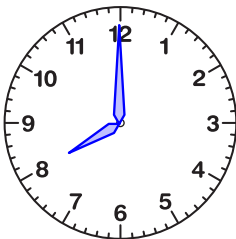
The time is 11:30.

(9)



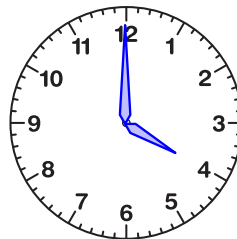
The time is 7:30.

(10)



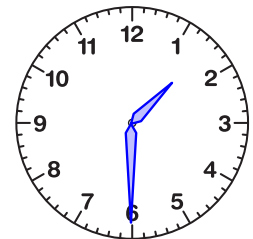
The time is 8:00.

(11)



The time is 4:00.

(12)



The time is 1:30.