



Prénom _____

Date : _____



GS

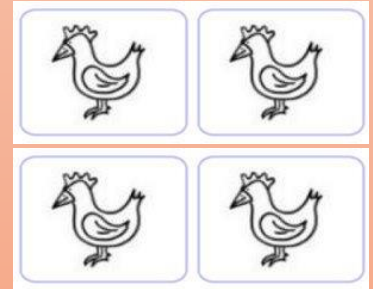
Nombres et quantités: Retrouver les décompositions des nombres inférieurs à 10.

Complète chaque carte pour retrouver le bon nombre d'animaux de l'histoire.

Les 4 poules tachetées




..... + =



..... + =




..... + =




..... + =

..... + =


Les 5 oies blanches




$$\dots + \dots = \dots$$



$$\dots + \dots = \dots$$




$$\dots + \dots = \dots$$



$$\dots + \dots = \dots$$



$$\dots + \dots = \dots$$



$$\dots + \dots = \dots$$

