

Quel nombre est représenté ?


1

3 dizaines
et 4 unités

2




3



4

$10 + 10 +$
 $1 + 1 + 1 + 1$

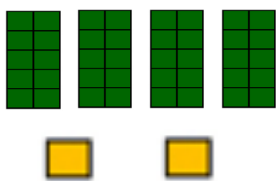
5



6

quarante-
deux

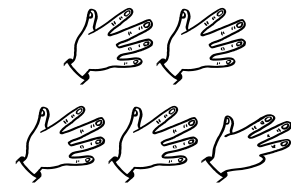
7




8

1 dizaine
et 3 unités

9



10



11

$40 + 2$

12

4 dizaines
et 2 unités

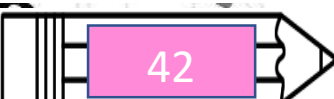



13

quarante-
trois

14

$10 + 10 + 10$
 $+ 1$

15



Fiche NO b

Prénom :.....

1	2	3
4	5	6
7	8	9
10	11	12
13	14	15

Fiche NO b

Prénom :.....

1	2	3
4	5	6
7	8	9
10	11	12
13	14	15

Fiche NO b

Prénom :.....

1	2	3
4	5	6
7	8	9
10	11	12
13	14	15

Fiche NO b

Prénom :.....

1	2	3
4	5	6
7	8	9
10	11	12
13	14	15

Fiche NO b

Prénom :.....

1	2	3
4	5	6
7	8	9
10	11	12
13	14	15

Fiche NO b

Prénom :.....

1	2	3
4	5	6
7	8	9
10	11	12
13	14	15

Fiche NO b

Prénom :.....

1	2	3
4	5	6
7	8	9
10	11	12
13	14	15

Fiche NO b

Prénom :.....

1	2	3
4	5	6
7	8	9
10	11	12
13	14	15

Fiche NO b

Prénom :.....

1	2	3
4	5	6
7	8	9
10	11	12
13	14	15