

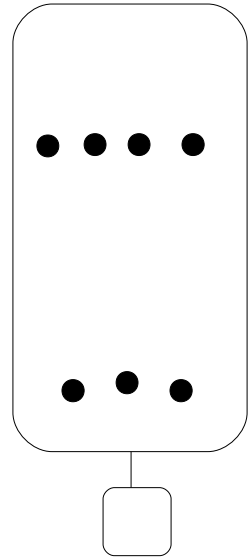

Maths

L'addition posée sans retenue (1)

CP



1 Complète et calcule.

	d	u
+		
<hr/>		



2 Dessine les ronds puis calcule.

	d	u
	1	2
+	2	6
<hr/>		



3 Pose les additions en colonne. Calcule.

$21 + 14 = \square$

$17 + 32 = \square$

$22 + 26 = \square$

	d	u
+		
<hr/>		

	d	u
+		
<hr/>		

	d	u
+		
<hr/>		