


Reading the Time

Name: _____ Date: _____



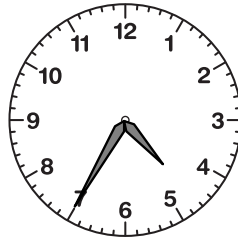
Write the time that each clock is showing.

(1)




The time is _____.

(2)




The time is _____.

(3)




The time is _____.

(4)




The time is _____.

(5)




The time is _____.

(6)




The time is _____.

(7)



The time is _____.

(8)




The time is _____.

(9)



The time is _____.

(10)




The time is _____.

(11)



The time is _____.

(12)



The time is _____.


Reading the Time

ANSWER KEY



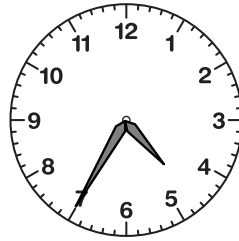
Write the time that each clock is showing.

(1)




The time is 1:20.

(2)




The time is 4:35.

(3)



The time is 7:45.

(4)




The time is 9:05.

(5)




The time is 7:10.

(6)




The time is 7:35.

(7)




The time is 1:30.

(8)



The time is 3:20.

(9)



The time is 4:55.

(10)




The time is 6:10.

(11)



The time is 10:20.

(12)



The time is 2:30.