

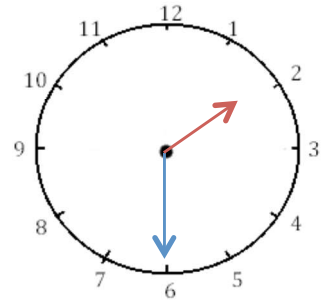
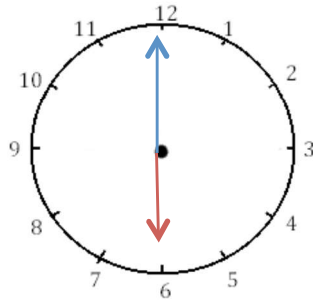
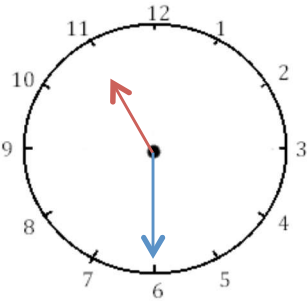


Mesures

Fiche 5

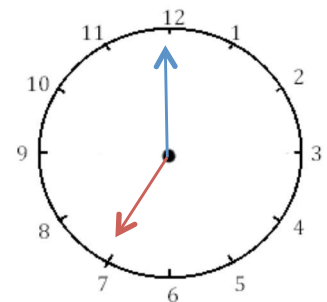
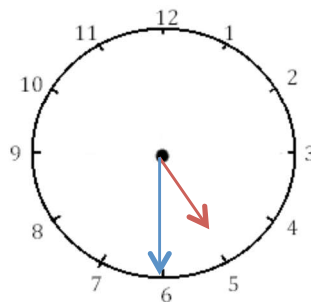
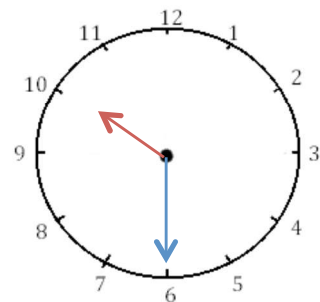
Les heures

1 J'écris les heures indiquées sur ces horloges. Nous sommes l'après-midi.



Il est ___ h et ___ min. Il est ___ h et ___ min. Il est ___ h et ___ min.

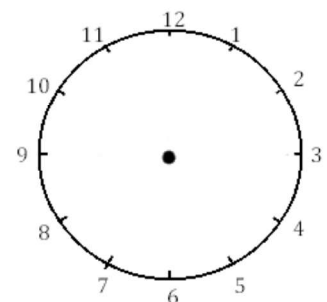
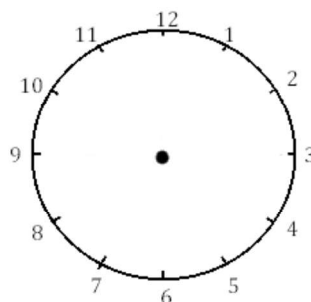
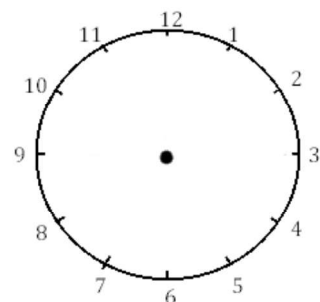
2 J'écris les heures indiquées sur ces horloges. Nous sommes le matin.



Il est ___ h et ___ min. Il est ___ h et ___ min. Il est ___ h et ___ min.



3 Je place les aiguilles selon les heures indiquées. (heures en rouge, minutes en bleu)



Il est 21 h 30 min.

Il est 13 h 00 min.

Il est 18 h 30 min.

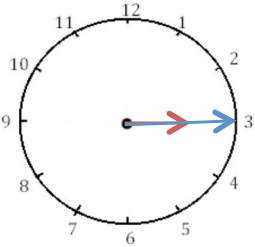




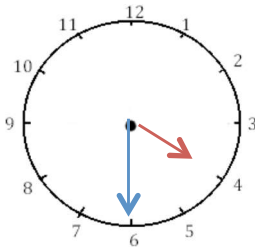
Mesures

Les heures

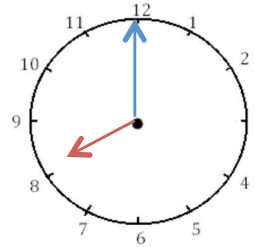
1 J'écris les heures indiquées sur ces horloges. Nous sommes le matin.



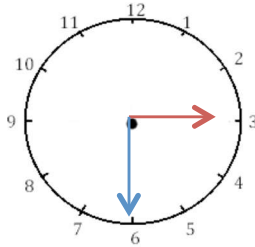
Il est _____.



Il est _____.

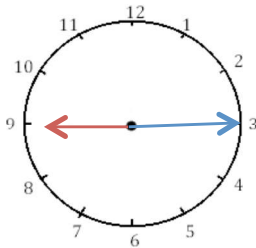


Il est _____.

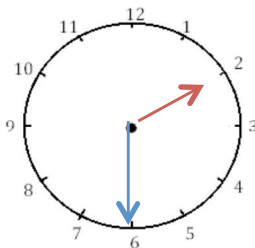


Il est _____.

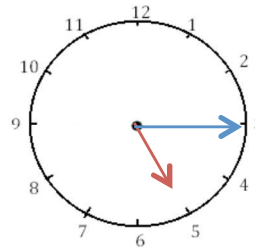
2 J'écris les heures indiquées sur ces horloges. Nous sommes l'après-midi.



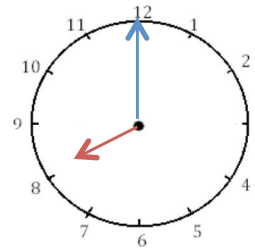
Il est _____.



Il est _____.



Il est _____.

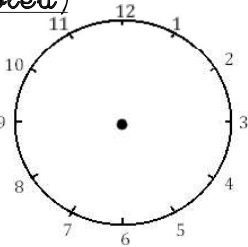


Il est _____.

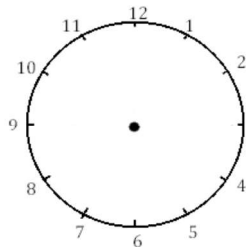


3 Je place les aiguilles selon les heures indiquées. (heures en rouge, minutes en

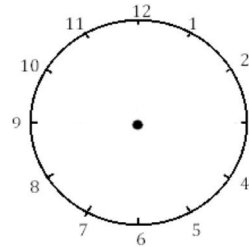
bleu)



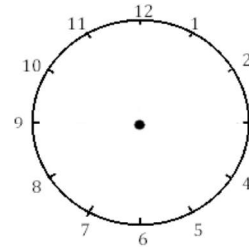
Il est 2 h 00 min.



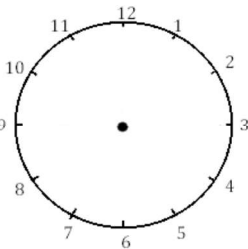
Il est 12 h 30 min.



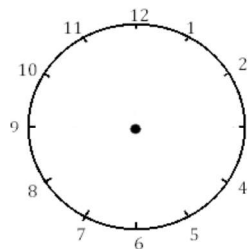
Il est 5 h 15 min.



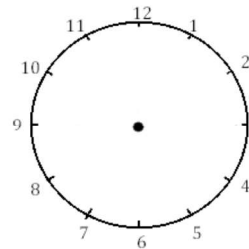
Il est 6 h et demie.



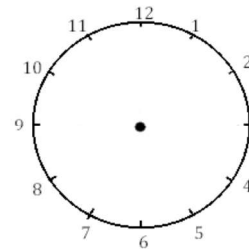
Il est 3 h et quart.



Il est 11 h 00 min.



Il est 1 h 30 min.



Il est 21 h 15 min.

