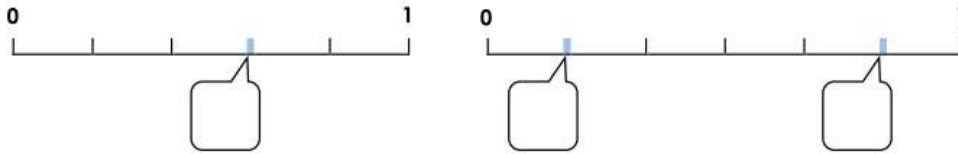



1 Ecris la fraction qui correspond aux points sur la droite.



2 Ecris la fraction qui correspond à la partie coloriée.

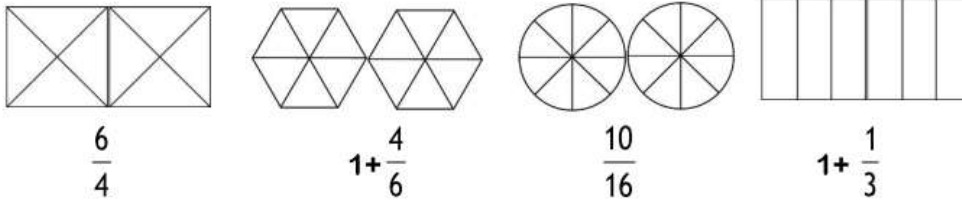


$$\frac{5}{4}$$

.....

.....

3 Colorie la partie qui correspond à la fraction.




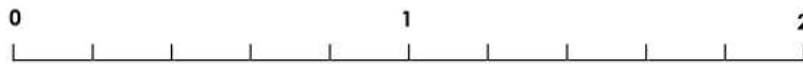
$$\frac{6}{4}$$

$$1 + \frac{4}{6}$$

$$\frac{10}{16}$$

$$1 + \frac{1}{3}$$

4 Relie chaque fraction à la graduation correspondante.



5 Ecris la fraction qui correspond aux points sur la droite selon l'exemple.

