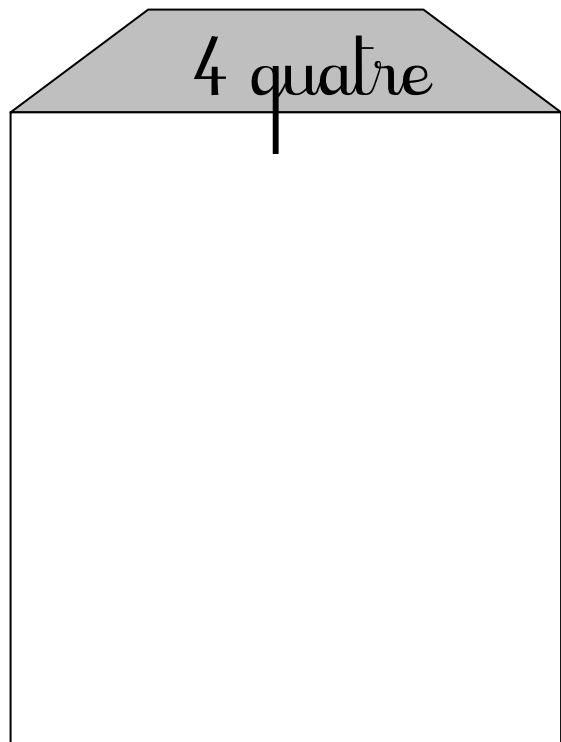





Prénom: _____

Calcul

Date: _____

Complète les maisons.

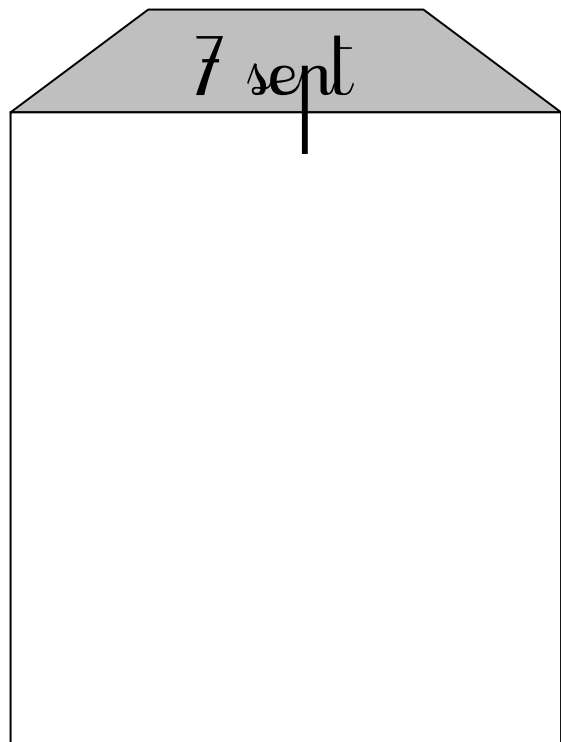

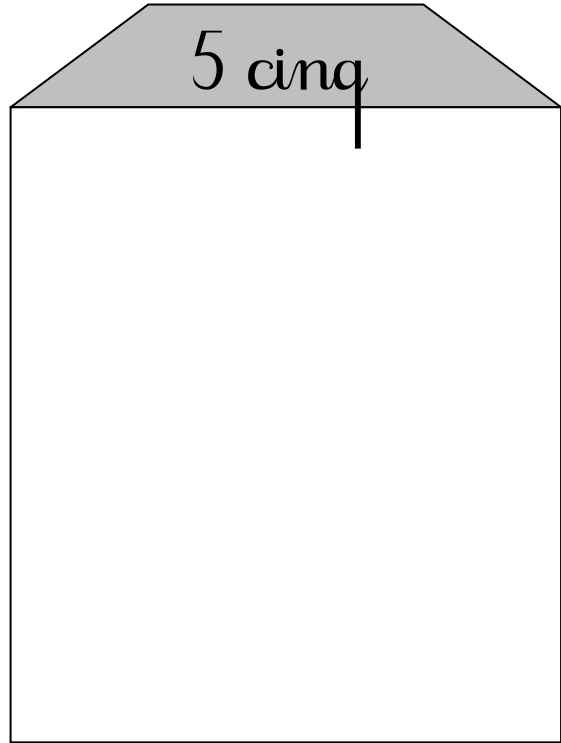
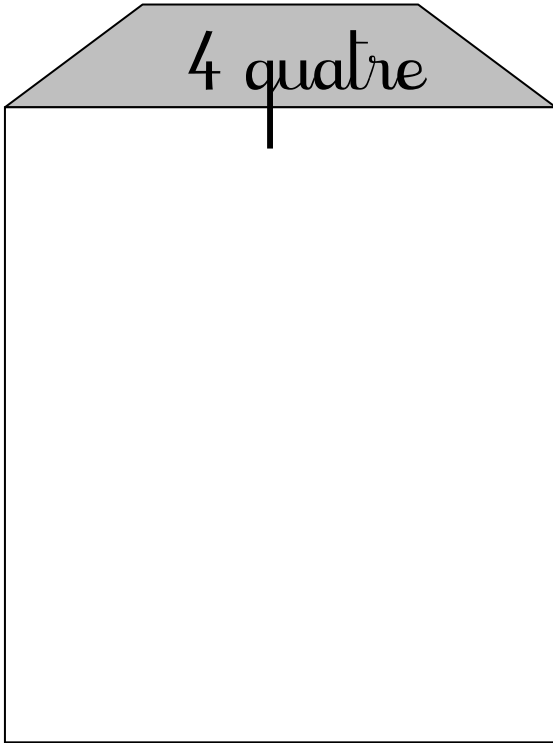


Prénom: _____

Calcul

Date: _____

Complète les maisons.

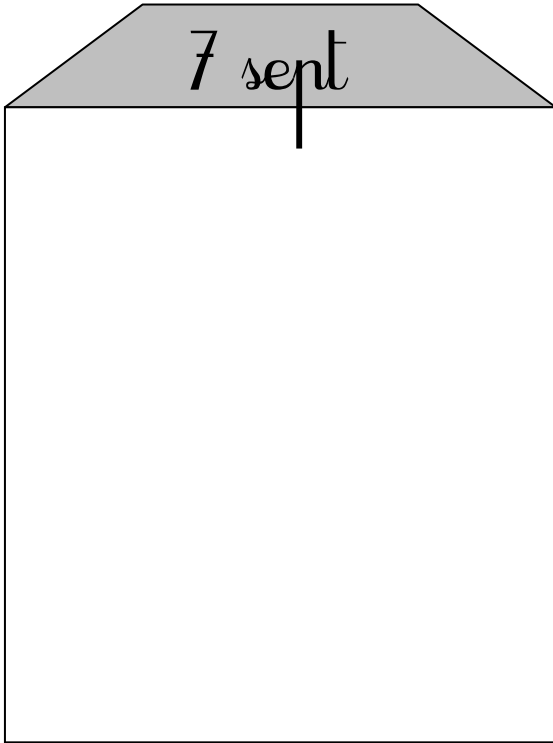


Prénom: _____

Calcul


Date: _____

Complète les maisons.




7 sept

A house-shaped box with a grey trapezoidal roof and a white rectangular body. The number '7' and the word 'sept' are written in a cursive font on the roof. A vertical line extends from the bottom of the '7' down to the top edge of the white body.




8 huit

A house-shaped box with a grey trapezoidal roof and a white rectangular body. The number '8' and the word 'huit' are written in a cursive font on the roof.



9 neuf

A house-shaped box with a grey trapezoidal roof and a white rectangular body. The number '9' and the word 'neuf' are written in a cursive font on the roof.



10 dix

A house-shaped box with a grey trapezoidal roof and a white rectangular body. The number '10' and the word 'dix' are written in a cursive font on the roof.

Prénom: _____

Date: _____

Ecris les différentes additions pour faire 1.

● _____ ● _____

Ecris les différentes additions pour faire 2.

● _____ ● _____ ● _____

Ecris les différentes additions pour faire 3.

● _____ ● _____ ● _____
● _____

Ecris les différentes additions pour faire 4.

● _____ ● _____ ● _____
● _____ ● _____

Ecris les différentes additions pour faire 5.

● _____ ● _____ ● _____
● _____ ● _____ ● _____

Ecris les différentes additions pour faire 6.

● _____ ● _____ ● _____
● _____ ● _____ ● _____
● _____

Ecris les différentes additions pour faire 7.

● _____ ● _____ ● _____
● _____ ● _____ ● _____
● _____ ● _____

Prénom: _____

Calcul

Date: _____

Ecris les différentes additions pour faire 8.

● _____	● _____	● _____
● _____	● _____	● _____
● _____	● _____	● _____

Ecris les différentes additions pour faire 9.

● _____	● _____	● _____
● _____	● _____	● _____
● _____	● _____	● _____
● _____		

Ecris les différentes additions pour faire 10.

● _____	● _____	● _____
● _____	● _____	● _____
● _____	● _____	● _____
● _____	● _____	