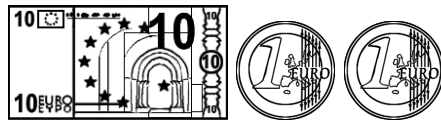


J'ai 2 poissons rouges et
3 poissons noirs.
Combien ai-je de
poissons ?

Devine la suite :
10, 20, 30, 40,

Quel est le nombre
avant 40 ?



Jai


Quel est le double de
8 ?

Devine la suite :
1, 3, 5, 7,

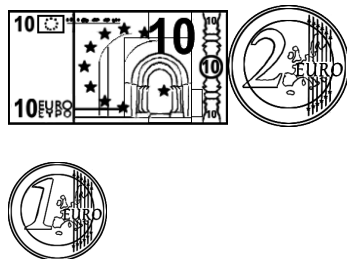
Quel est le nombre
après 59 ?



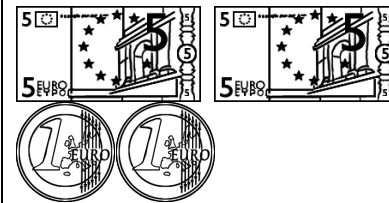
Jai




Jai



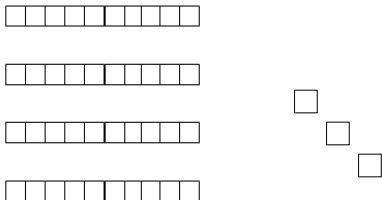
Jai

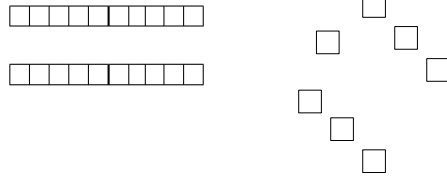


Jai


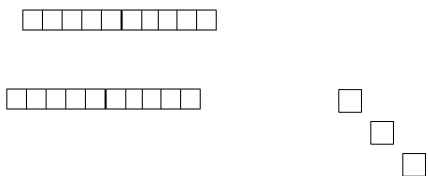


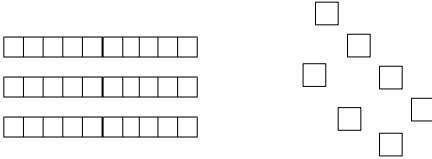
Jai

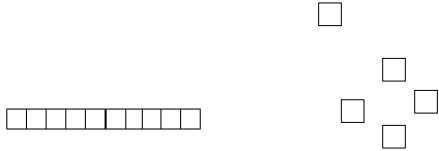
 <input data-bbox="403 375 555 526" type="text"/>	<p>Devine la suite :</p> <p>25, 20, 15, 10,</p> <input data-bbox="896 375 1048 526" type="text"/>
---------------------------------------------------------------------------------------------------------------------------------------	------------------------------------------------------------------------------------------------------------

 <input data-bbox="1467 375 1619 526" type="text"/>	<p>Devine la suite :</p> <p>25, 20, 15, 10,</p> <input data-bbox="1966 375 2119 526" type="text"/>
-------------------------------------------------------------------------------------------------------------------------------------------	-------------------------------------------------------------------------------------------------------------


<p>Range du plus petit au plus grand :</p> <p>38 – 45 – 17 – 54 – 20</p> <p>.....</p>	<p>Range du plus petit au plus grand :</p> <p>19 – 31 – 28 – 24 – 13</p> <p>.....</p>
---------------------------------------------------------------------------------------	---------------------------------------------------------------------------------------

 <input data-bbox="1422 813 1574 965" type="text"/>	 <input data-bbox="1888 798 2040 949" type="text"/>
-------------------------------------------------------------------------------------------------------------------------------------------	-------------------------------------------------------------------------------------------------------------------------------------------

<p>Range du plus petit au plus grand :</p> <p>40 – 14 – 34 – 4 – 44</p> <p>.....</p>	 <input data-bbox="784 1284 936 1436" type="text"/>
--------------------------------------------------------------------------------------	--------------------------------------------------------------------------------------------------------------------------------------------

<p>Range du plus petit au plus grand :</p> <p>32 – 18 – 9 – 28</p> <p>.....</p>	 <input data-bbox="1854 1300 2007 1452" type="text"/>
---------------------------------------------------------------------------------	-----------------------------------------------------------------------------------------------------------------------------------------------

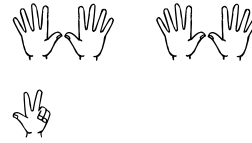
Compte.



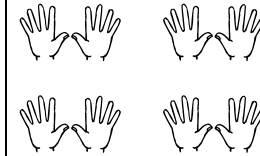
Devine la suite :

32, 34, 36, 38,

Compte les doigts levés.




Compte les doigts levés.



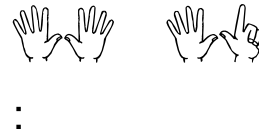
Compte.



Compte.

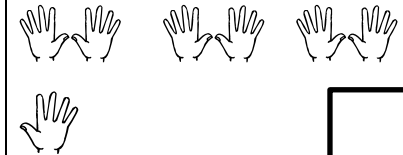


Compte les doigts levés.



:

Compte les doigts levés.



Ecris en chiffres :

trente-six

Ecris en chiffres :

dix-neuf


Dessine 11 tasses.

Dessine 16 arbres.

Compte.




Compte.



Compte.



Compte.



Ecris en lettres :

17

.....

Ecris en lettres :

5

.....

Complète.

.....	38
-------	----	-------

Complète.

.....	29
-------	----	-------

Complète.

.....	50
-------	----	-------

Complète.

.....	11
-------	----	-------

Ecris en lettres :

8

.....

Ecris en lettres :

11

.....


Je suis entre 21 et 23.

Je suis entre 39 et 41.


Je suis entre 54 et 56.

Je suis entre 13 et 15.

Compte.




Compte.




J'ai 3 paquets de 10 pailles et 6 pailles.
Combien ai-je de pailles ?

J'ai 9 pailles et 2 paquets de 10 pailles.
Combien ai-je de pailles ?


Compte.




Compte.



Compte.




Compte.



Compte.




Compte.



Compte.



Compte.



Compte.

$$10 + 10 + 10 + 10 + 2$$

Compte.

$$10 + 10 + 4 + 10$$

Compte.

$$10 + 10 + 1 + 1$$

Compte.

$$10 + 6$$

Compte.

$$10 + 10 + 7$$

Compte.

$$10 + 10 + 10 + 10 + 10$$





Compte.

$$10 + 10 + 10 + 1$$

Compte.

$$10 + 10 + 10 + 10 + 10 + 4$$

<p>Relie.</p> <p>1 ● ● trois</p> <p>2 ● ● cinq</p> <p>3 ● ● un</p> <p>4 ● ● quatre</p> <p>5 ● ● deux</p>	<p>Relie.</p> <p>6 ● ● neuf</p> <p>7 ● ● six</p> <p>8 ● ● dix</p> <p>9 ● ● sept</p> <p>10 ● ● huit</p>
<p>Complète.</p> <p>8 + = 10</p>	<p>Complète.</p> <p>3 + = 10</p>
<p>Complète.</p> <p>5 + = 10</p>	<p>Complète.</p> <p>6 + = 10</p>

<p>Relie.</p> <p>11 ● ● treize</p> <p>12 ● ● quinze</p> <p>13 ● ● onze</p> <p>14 ● ● douze</p> <p>15 ● ● quatorze</p>	<p>Relie.</p> <p>8 ● ● </p> <p>7 ● ● </p> <p>3 ● ● </p> <p>5 ● ● </p>
<p>Complète.</p> <p>2 + = 10</p>	<p>Complète.</p> <p>9 + = 10</p>
<p>Complète.</p> <p>7 + = 10</p>	<p>Complète.</p> <p>0 + = 10</p>

Dans le pré, il y a 5 vaches noires et 7 vaches blanches.


Combien y a-t-il de vaches ?

J'ai 3 paquets de 10 chocolats. Combien ai-je de chocolats ?

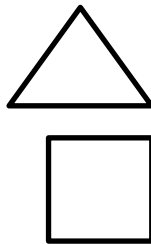

J'ai 10 images. J'en donne 3 à Lucas. Combien m'en reste-t-il ?

Devine la suite :
7, 17, 27, 37,

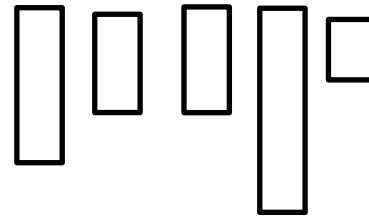
Dessine un couteau à gauche.



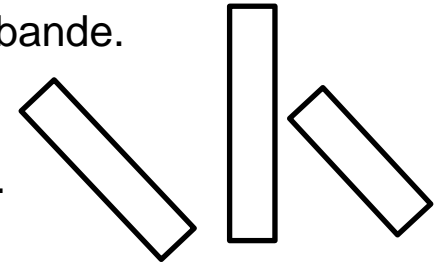
Colorie le triangle.



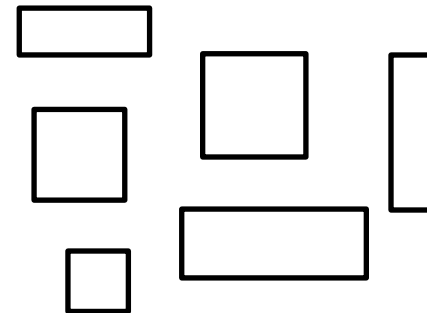
Colorie la plus grande bande.



Colorie la plus grande bande.

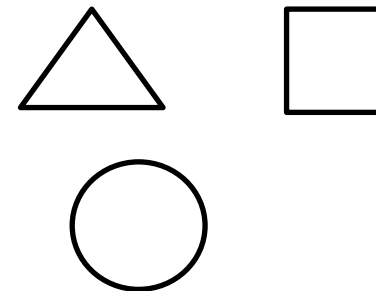


Colorie les carrés.

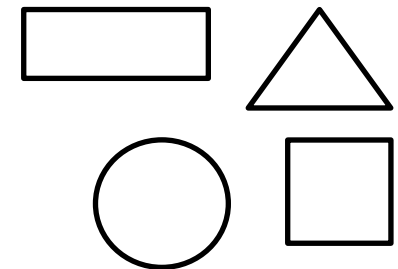


Devine la suite :
7, 17, 27, 37,

Colorie le carré.



Colorie le cercle.



J'ai 6 ans et mon grand frère a le double de mon âge. Quel est l'âge de mon grand frère ?

J'ai 3 billets de 5 euros dans ma tirelire.

Combien ai-je dans ma tirelire ?


Colorie la main droite et le pied gauche ?




Devine la suite :

12, 22, 32, 42,

Dessine un ballon à droite de la cage.



Dessine un ballon dans la cage.



NOS 100 DÉFIS

MATHÉMATIQUES

NOS 100 COUPS

DE COEUR

