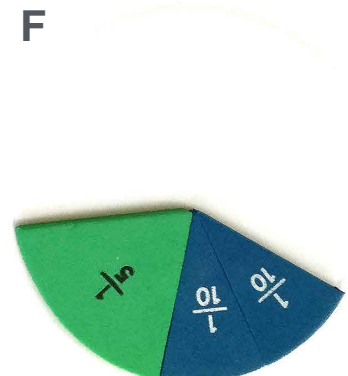
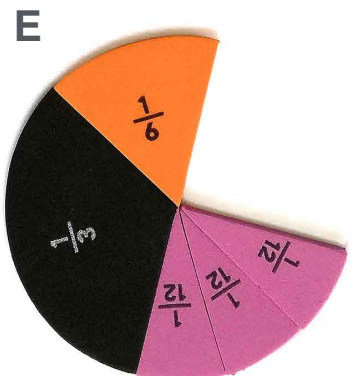
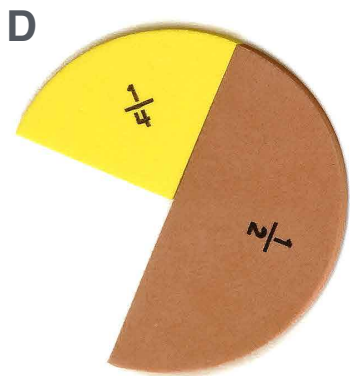
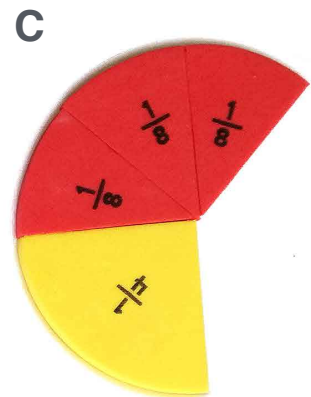
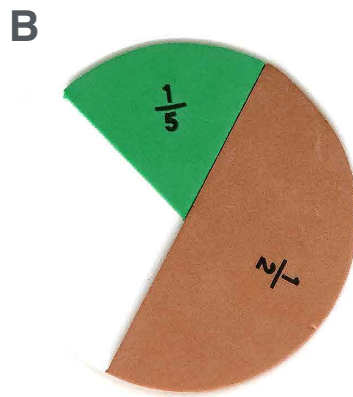
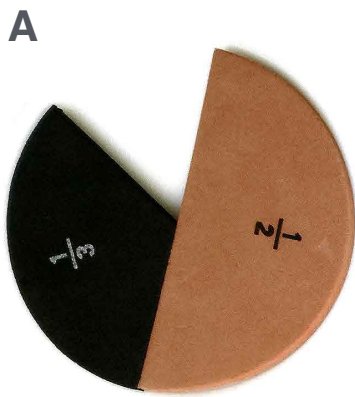


Fractions égales à 1

..... /

Exercice



Complète les égalités ci-dessous sachant que fraction vierge correspond à une portion .

A $1 = \frac{1}{2} + \frac{1}{3} + \text{---} = \text{-----}$

B $1 = \frac{1}{2} + \frac{1}{5} + \text{---} + \text{---} = \text{-----}$

C $1 = \frac{1}{4} + \frac{3}{8} + \text{---} + \text{---} = \text{-----}$

D $1 = \frac{1}{2} + \frac{1}{4} + \text{---} + \text{---} = \text{-----}$

E $1 = \frac{1}{3} + \frac{1}{6} + \frac{3}{12} + \text{---} + \text{---} = \text{-----}$

F $1 = \frac{1}{5} + \frac{2}{10} + \text{---} + \text{---} + \text{---} = \text{-----}$