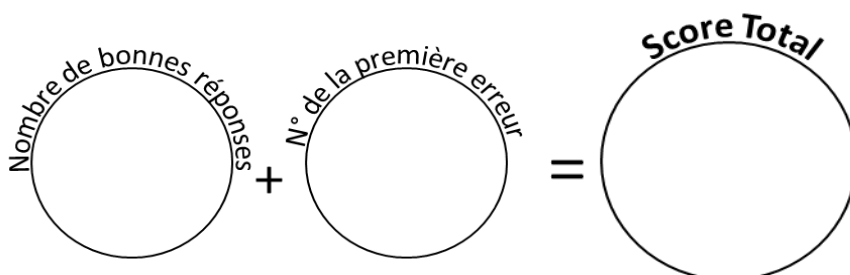


49 calculs en 5 minutes
(série 428)
Ceinture orange

Réponses
Ceinture orange
série 428

1	$366 \times 10 =$ _____	26	$199 - 10 =$ _____	3660	189
2	$120 + 10 =$ _____	27	$115 + 100 =$ _____	130	215
3	$170 - 90 =$ _____	28	$936 - 100 =$ _____	80	836
4	$193 + 10 =$ _____	29	$59 \times 100 =$ _____	203	5900
5	$198 - 10 =$ _____	30	$140 + 100 =$ _____	188	240
6	$154 + 100 =$ _____	31	$130 - 120 =$ _____	254	10
7	$955 - 100 =$ _____	32	$226 + 10 =$ _____	855	236
8	$367 \times 100 =$ _____	33	$137 - 10 =$ _____	36700	127
9	$40 + 80 =$ _____	34	$891 + 100 =$ _____	120	991
10	$150 - 50 =$ _____	35	$923 - 100 =$ _____	100	823
11	$215 + 10 =$ _____	36	$610 \times 100 =$ _____	225	61000
12	$209 - 10 =$ _____	37	$160 + 50 =$ _____	199	210
13	$96 + 100 =$ _____	38	$190 - 10 =$ _____	196	180
14	$571 - 100 =$ _____	39	$165 + 10 =$ _____	471	175
15	$453 \times 1000 =$ _____	40	$129 - 10 =$ _____	453000	119
16	$90 + 60 =$ _____	41	$877 + 100 =$ _____	150	977
17	$140 - 100 =$ _____	42	$981 - 100 =$ _____	40	881
18	$70 + 10 =$ _____	43	$540 \times 100 =$ _____	80	54000
19	$170 - 10 =$ _____	44	$160 + 30 =$ _____	160	190
20	$401 + 100 =$ _____	45	$140 - 100 =$ _____	501	40
21	$831 - 100 =$ _____	46	$36 + 10 =$ _____	731	46
22	$744 \times 10 =$ _____	47	$218 - 10 =$ _____	7440	208
23	$170 + 40 =$ _____	48	$300 + 100 =$ _____	210	400
24	$130 - 120 =$ _____	49	$178 - 100 =$ _____	10	78
25	$153 + 10 =$ _____			163	

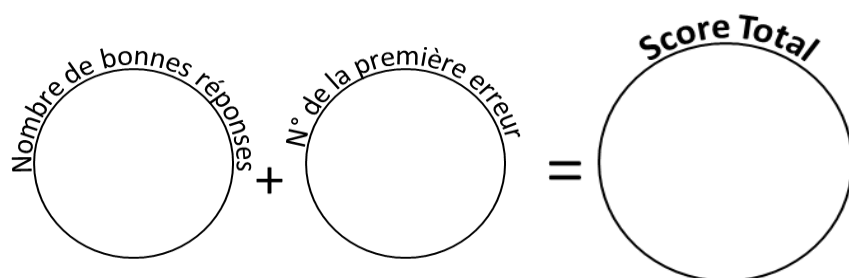


Reporte ton score sur ton graphique !

49 calculs en 5 minutes
(série 68)
Ceinture orange

Réponses
Ceinture orange
série 68

1	$412 \times 10 =$ _____	26	$183 - 10 =$ _____	4120	173
2	$130 + 120 =$ _____	27	$246 + 100 =$ _____	250	346
3	$140 - 100 =$ _____	28	$304 - 100 =$ _____	40	204
4	$155 + 10 =$ _____	29	$120 \times 100 =$ _____	165	12000
5	$188 - 10 =$ _____	30	$180 + 20 =$ _____	178	200
6	$948 + 100 =$ _____	31	$180 - 40 =$ _____	1048	140
7	$993 - 100 =$ _____	32	$74 + 10 =$ _____	893	84
8	$345 \times 100 =$ _____	33	$205 - 10 =$ _____	34500	195
9	$190 + 80 =$ _____	34	$471 + 100 =$ _____	270	571
10	$160 - 10 =$ _____	35	$794 - 100 =$ _____	150	694
11	$104 + 10 =$ _____	36	$24 \times 100 =$ _____	114	2400
12	$217 - 10 =$ _____	37	$170 + 30 =$ _____	207	200
13	$817 + 100 =$ _____	38	$160 - 120 =$ _____	917	40
14	$196 - 100 =$ _____	39	$113 + 10 =$ _____	96	123
15	$680 \times 1000 =$ _____	40	$203 - 10 =$ _____	680000	193
16	$40 + 110 =$ _____	41	$170 + 100 =$ _____	150	270
17	$180 - 50 =$ _____	42	$95 - 100 =$ _____	130	-5
18	$55 + 10 =$ _____	43	$430 \times 100 =$ _____	65	43000
19	$229 - 10 =$ _____	44	$140 + 10 =$ _____	219	150
20	$105 + 100 =$ _____	45	$170 - 100 =$ _____	205	70
21	$327 - 100 =$ _____	46	$142 + 10 =$ _____	227	152
22	$955 \times 10 =$ _____	47	$158 - 10 =$ _____	9550	148
23	$80 + 90 =$ _____	48	$762 + 100 =$ _____	170	862
24	$180 - 110 =$ _____	49	$74 - 100 =$ _____	70	-26
25	$55 + 10 =$ _____			65	

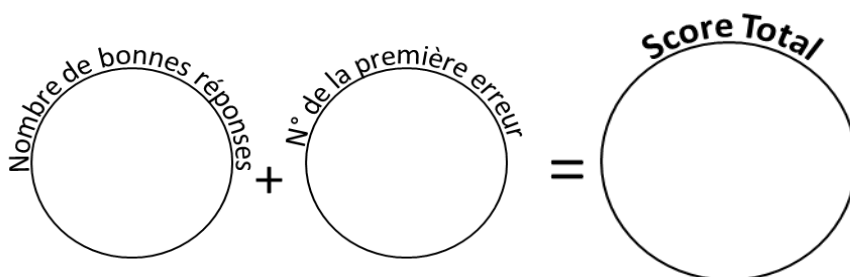


Reporte ton score sur ton graphique !

49 calculs en 5 minutes
(série 877)
Ceinture orange

Réponses
Ceinture orange
série 877

1	$120 \times 10 =$ _____	26	$153 - 10 =$ _____	1200	143
2	$190 + 90 =$ _____	27	$232 + 100 =$ _____	280	332
3	$130 - 80 =$ _____	28	$361 - 100 =$ _____	50	261
4	$104 + 10 =$ _____	29	$698 \times 100 =$ _____	114	69800
5	$77 - 10 =$ _____	30	$120 + 120 =$ _____	67	240
6	$779 + 100 =$ _____	31	$190 - 110 =$ _____	879	80
7	$498 - 100 =$ _____	32	$124 + 10 =$ _____	398	134
8	$900 \times 100 =$ _____	33	$36 - 10 =$ _____	90000	26
9	$20 + 70 =$ _____	34	$828 + 100 =$ _____	90	928
10	$140 - 20 =$ _____	35	$487 - 100 =$ _____	120	387
11	$69 + 10 =$ _____	36	$425 \times 100 =$ _____	79	42500
12	$126 - 10 =$ _____	37	$130 + 90 =$ _____	116	220
13	$273 + 100 =$ _____	38	$170 - 80 =$ _____	373	90
14	$708 - 100 =$ _____	39	$86 + 10 =$ _____	608	96
15	$864 \times 1000 =$ _____	40	$169 - 10 =$ _____	864000	159
16	$110 + 10 =$ _____	41	$164 + 100 =$ _____	120	264
17	$150 - 10 =$ _____	42	$583 - 100 =$ _____	140	483
18	$204 + 10 =$ _____	43	$199 \times 100 =$ _____	214	19900
19	$68 - 10 =$ _____	44	$100 + 100 =$ _____	58	200
20	$948 + 100 =$ _____	45	$130 - 90 =$ _____	1048	40
21	$510 - 100 =$ _____	46	$89 + 10 =$ _____	410	99
22	$813 \times 10 =$ _____	47	$53 - 10 =$ _____	8130	43
23	$140 + 120 =$ _____	48	$393 + 100 =$ _____	260	493
24	$130 - 90 =$ _____	49	$368 - 100 =$ _____	40	268
25	$65 + 10 =$ _____			75	



Reporte ton score sur ton graphique !