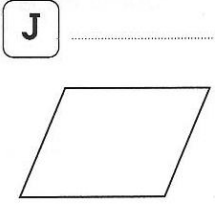
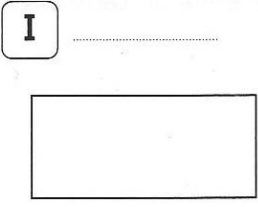
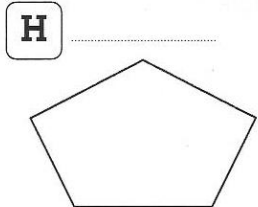
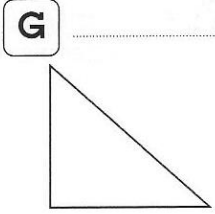
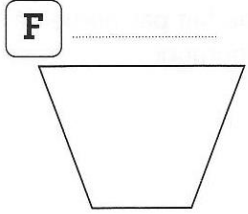
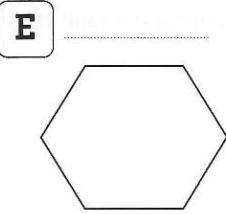
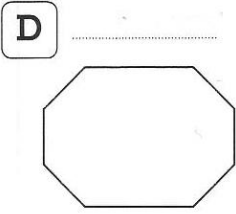
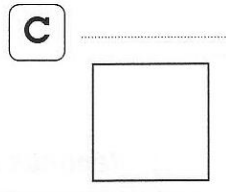
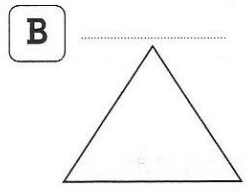
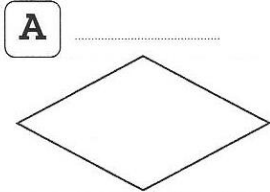




- 1 Pour chaque polygone, écris le nombre de côtés.
- 2 Colorie d'une même couleur les polygones qui appartiennent à la même famille (pense au nombre de côtés).



Avec une équerre, cherche les angles droits de chaque polygone.
Note chaque angle droit avec le signe \square .

