





CALCULS D'AIRES★

1


Classe les surfaces de la plus petite aire (3) à la plus grande aire (1)



...



...




...



CALCULS D'AIRES★

2

Classe les surfaces de la plus petite aire (3) à la plus grande aire (1)



...



...




...



CALCULS D'AIRES★

3

Calcule l'aire de la figure :



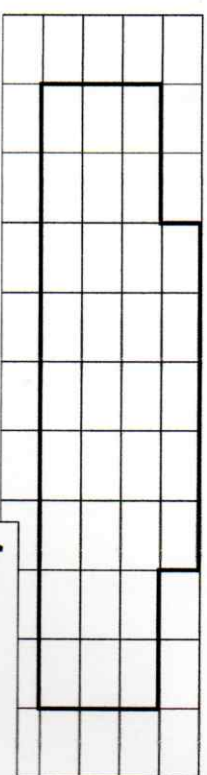
A = ... carreaux



CALCULS D'AIRES★

4

Calcule l'aire de la figure :




A = ... carreaux



CALCULS D'AIRES★

5

Calcule l'aire de la figure :



A = ... carreaux