

Prénom : _____

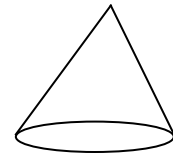


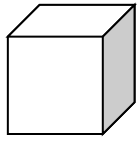
Date : _____


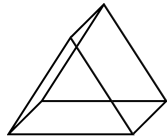
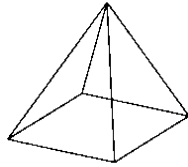
Les solides, évaluation

→Caractériser, nommer les solides.

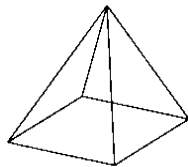
→Construire le patron d'un cube.

1. Nomme les solides suivants :

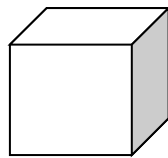





2. Complète :



A



B



C

| Figure | Nombre de faces | Nombre d'arêtes | Nombre de sommets |
|--------|-----------------|-----------------|-------------------|
| A | | | |
| B | | | |
| C | | | |

3. Trace 2 patrons différents d'un cube à partir de la feuille quadrillée (un cube a 6 faces...)

