


68 Connaître les doubles jusqu'à 10 + 10

CALCUL MENTAL
Énoncer des additions simples
(18 + 2, 24 + 6, etc.)



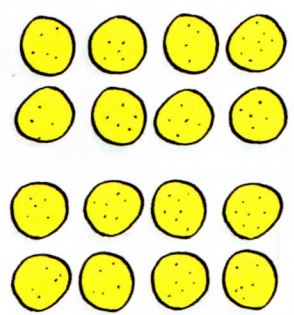
➔ Manipulation
Guide p. 134

1 Indique le nombre de tapis : complète les calculs.



$7 + \dots = \dots$



$8 + \dots = \dots$



$9 + \dots = \dots$

2 Colorie la case qui représente :



le double de 8 abeilles



le double de 10 coccinelles



le double de 6 libellules



3 Complète les calculs.

$8 + 8 = \dots$ $5 + 5 = \dots$ $10 + 10 = \dots$ $3 + 3 = \dots$
 $7 + 7 = \dots$ $6 + 6 = \dots$ $4 + 4 = \dots$ $9 + 9 = \dots$

4 Complète les calculs.

$14 + 5 = \square$ $27 - 4 = \square$ $33 + 3 = \square$ $37 - 1 = \square$