

Nombres : Les fractions (1)

Lire les fractions simples

❶ Ecris les fractions dictées en chiffres.

.....

❷ Ecris ces fractions en lettres.

$\frac{1}{4} =$ $\frac{3}{3} =$ $\frac{2}{10} =$

$\frac{1}{5} =$ $\frac{4}{6} =$ $\frac{7}{20} =$


$\frac{3}{2} =$ $\frac{5}{6} =$ $\frac{9}{12} =$

Ecrire les fractions simples

❸ A quelles fractions correspondent les parties grisées ?



—



—



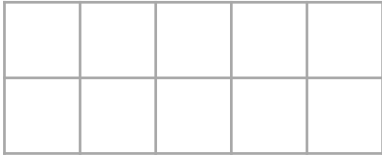
—



—



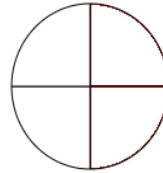
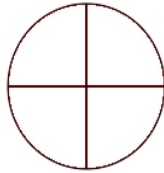
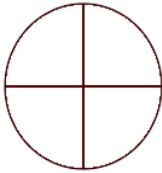
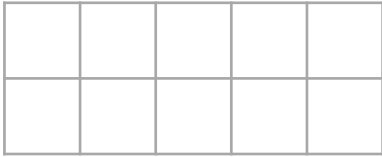
④ Représente ces fractions.



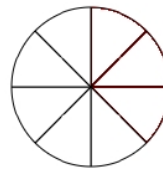
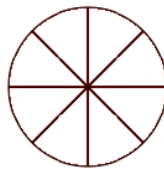
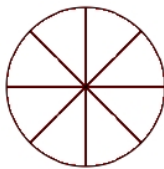
$$\frac{13}{10}$$



$$\frac{9}{6}$$



$$\frac{10}{4}$$



$$\frac{19}{8}$$