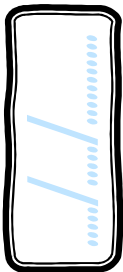
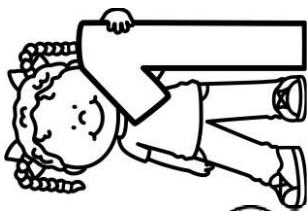


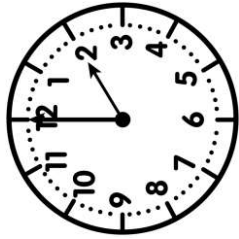
Meures

CE2

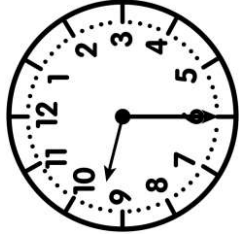


PRÉNOT :

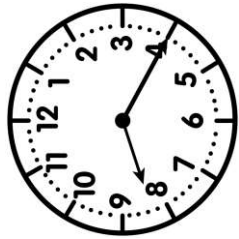
① Ecris l'heure sous chaque horloge.



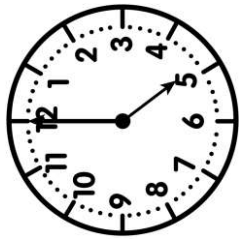
h _ h _



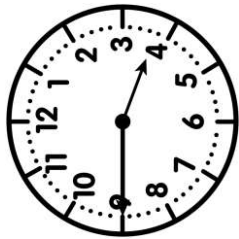
h _ h _



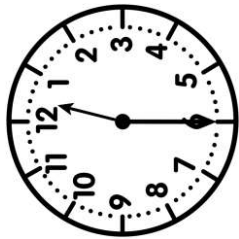
h _ h _



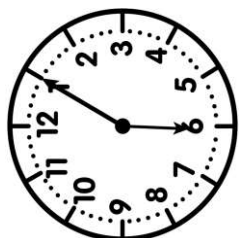
h _ h _



h _ h _

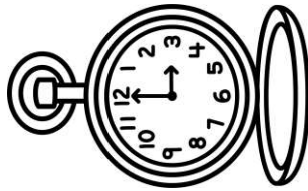


h _ h _

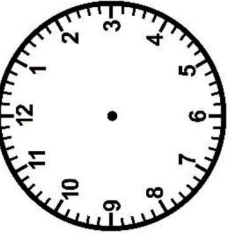


h _ h _

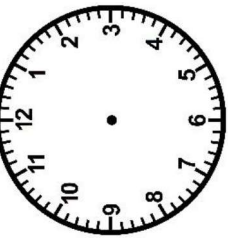
② Trace les aiguilles (rouge pour les heures, bleue pour les minutes).



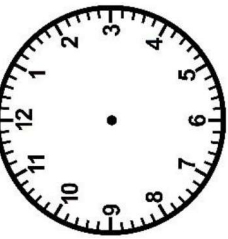
7 h 00



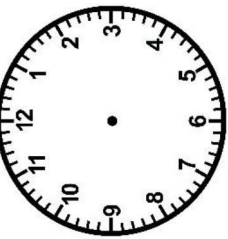
3 h 30



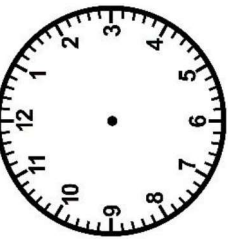
11 h 00



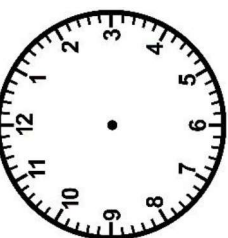
5 h 45



10 h 20



6 h 30

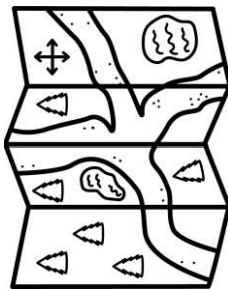


8 h 15

<https://laclassebleue.fr/>

③ Résous ce problème.

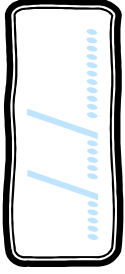

Le matin, Jonas est parti en randonnée avec ses parents à 14h20. Ils sont rentrés chez eux à 17h40. Combien de temps leur randonnée a-t-elle duré ?



Meures / l'heure

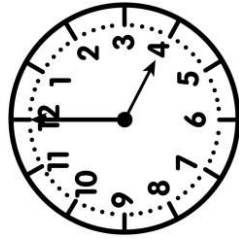
l'heure

CE2




PRÉNOT :

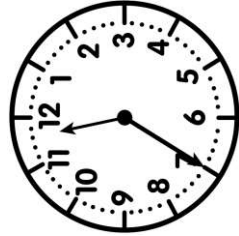
① Ecris l'heure sous chaque horloge.



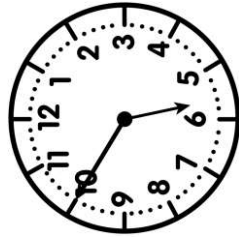
h _ h _



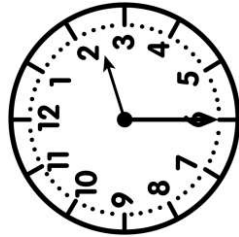
h _ h _



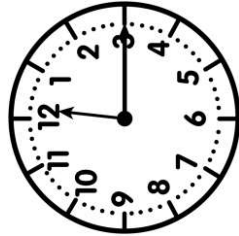
h _ h _



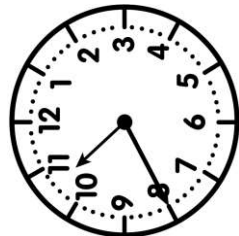
h _ h _



h _ h _




h _ h _

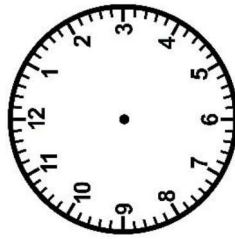


h _ h _

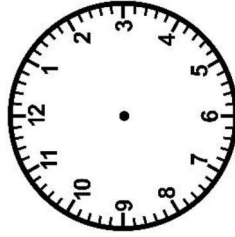
② Trace les aiguilles (rouge pour les heures, bleue pour les minutes).



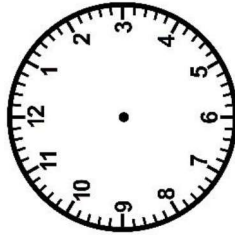
<https://laclassebleue.fr/>



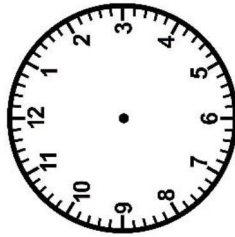
9 h 00



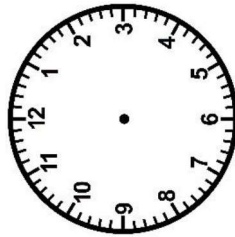
5 h 15



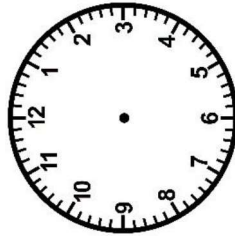
4 h 30



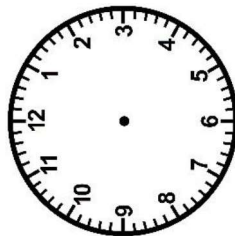
7 h 05



3 h 00




8 h 45



11 h 30

③ Résous ce problème.

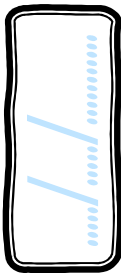

Le cours de voile de Lisa a commencé à 9h30. Il dure 45 minutes. À quelle heure le cours se terminera-t-il ?



l'heure / l'heure

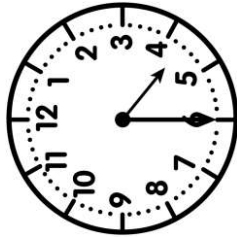
Meurea

CE2

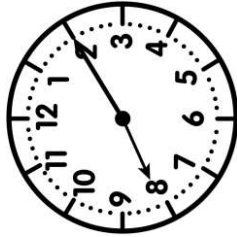


PRÉNOM:

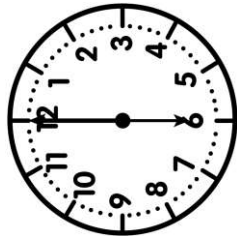
① Ecris l'heure sous chaque horloge.



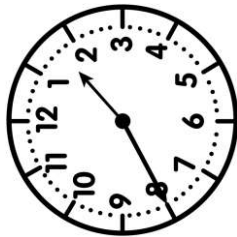
h _ h _



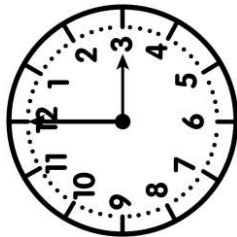
h _ h _



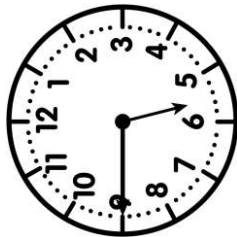
h _ h _



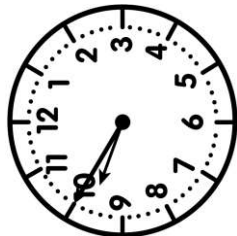
h _ h _



h _ h _



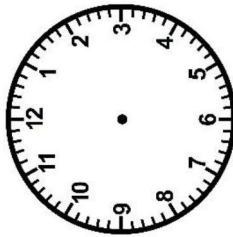
h _ h _



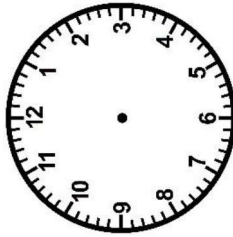
h _ h _

② Trace les aiguilles (rouge pour les heures, bleue pour les minutes).

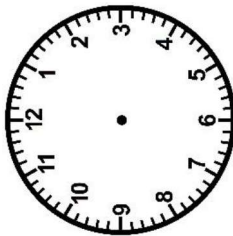
<https://laclassedebled.fr/>



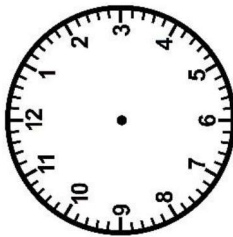
4 h 15



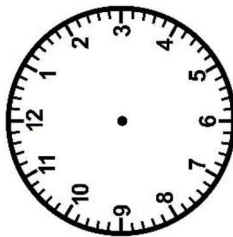
1 h 00



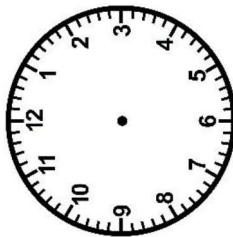
9 h 30



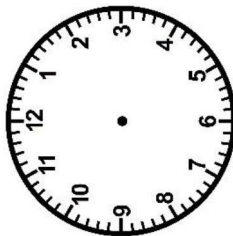
2 h 45




12 h 30



10 h 20




7 h 10



③ Résous ce problème.

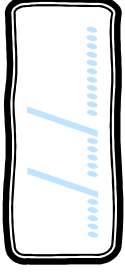

Le soir, Fabio et ses parents sont allés au cinéma. Le film a duré 1 h 35 et la séance s'est terminée à 22 h 45. À quelle heure la séance a-t-elle commencé ?



Meurea / lre / heure

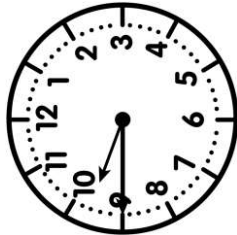
Meurea

CE2

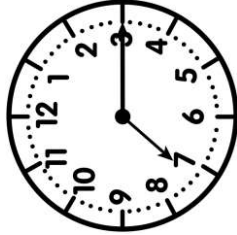


PRÉNOM :

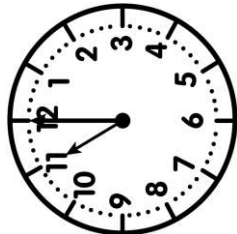
① Ecris l'heure sous chaque horloge.



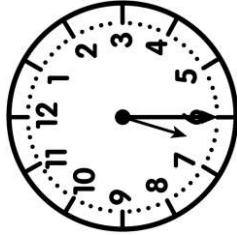
h _ h _



h _ h _




h _ h _



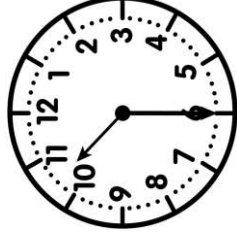
h _ h _



h _ h _

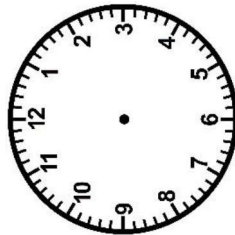
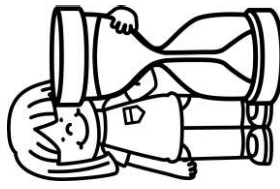


h _ h _

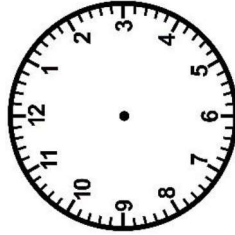


h _ h _

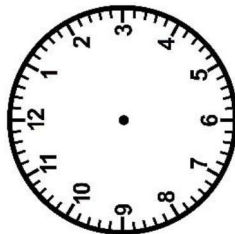
② Trace les aiguilles (rouge pour les heures, bleue pour les minutes).



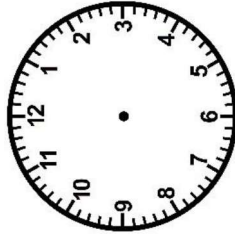
3 h 00




8 h 30




2 h 20



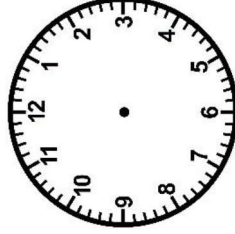
5 h 00



4 h 45



11 h 15

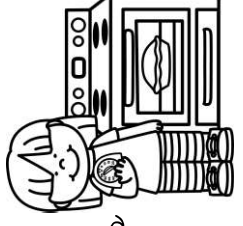


9 h 35

<https://laclassebleue.fr/>

③ Résous ce problème.

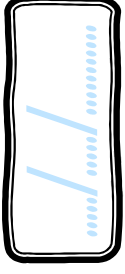

Marie a préparé une tarte avec pommes qu'elle a mise au four à 11h15. Le temps de cuisson est de 30 min. À quelle heure la tarte sera-t-elle cuite ?



Meurea / lre / heure

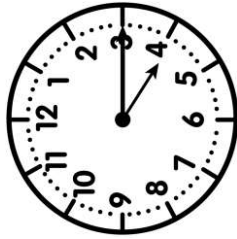
Meures

CE2

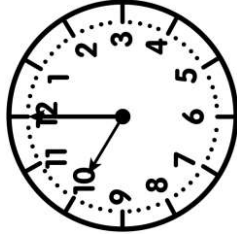


PRÉNOM:

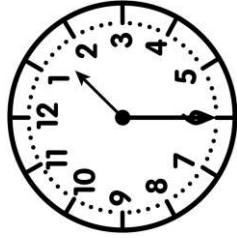
① Ecris l'heure sous chaque horloge.



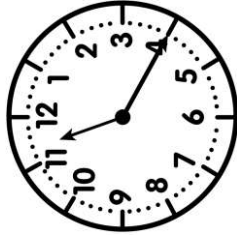
h _ h _



h _ h _



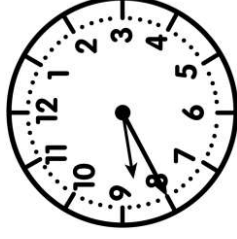
h _ h _



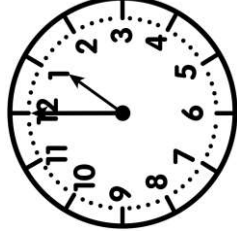
h _ h _



h _ h _




h _ h _




h _ h _




② Trace les aiguilles (rouge pour les heures, bleue pour les minutes).



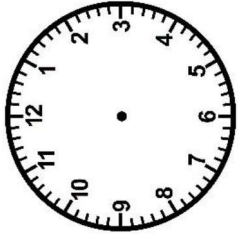
20 h 30



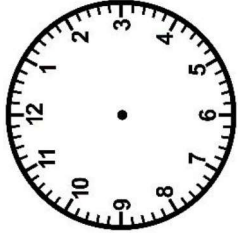
3 h 45




14 h 20




17 h 00



6 h 50



9 h 35

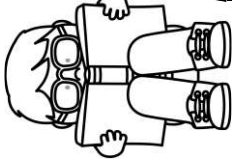


13 h 15

<https://laclassebleue.fr/>

③ Résous ce problème.

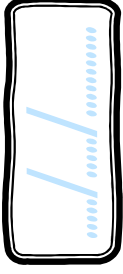

La médiathèque du village ouvre ses portes à 10h30 et ferme à 17h00. Combien de temps ouvre-t-elle dans la journée ?



Meures / l'heure

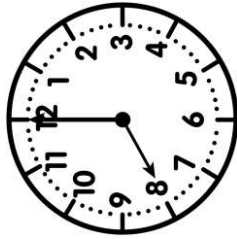
Meurea

CE2



PRÉNOM:

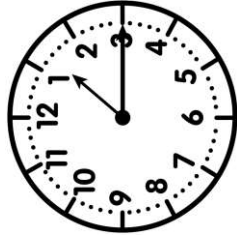
① Ecris l'heure sous chaque horloge.



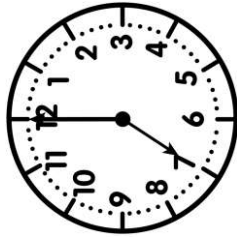
h _ h _



h _ h _



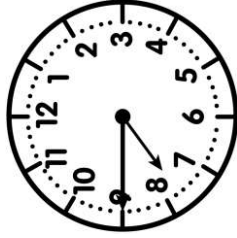
h _ h _



h _ h _



h _ h _










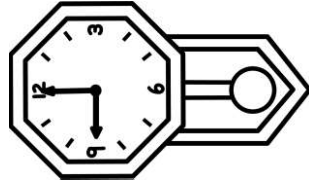
h _ h _



h _ h _

② Trace les aiguilles (rouge pour les heures, bleue pour les minutes).

<https://laclassebleue.fr/>



0 h 00

7 h 15

14 h 45

5 h 20

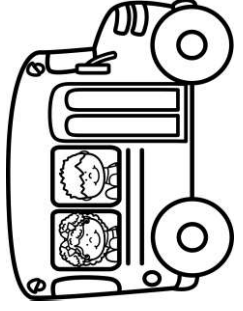
17 h 30

16 h 00

22 h 50

③ Résous ce problème.

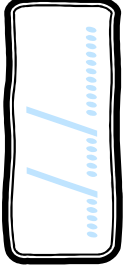

Thomas et sa sœur ont pris le bus pour aller à l'école. Le trajet a duré 25 min et ils sont arrivés à 8h 15. À quelle heure sont-ils partis de chez eux ?



Meurea / lre / heure

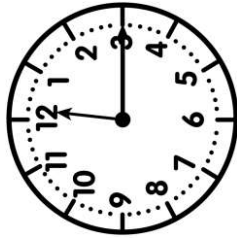
Meurea

CE2

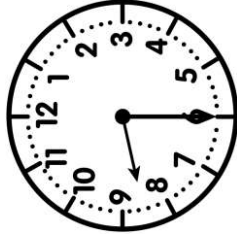


PRÉNOM:

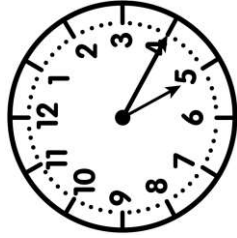
① Ecris l'heure sous chaque horloge.



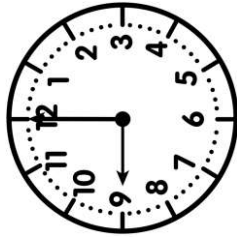
h h



h h



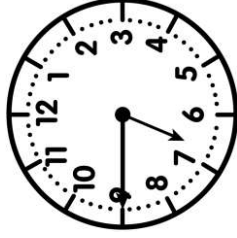
h h



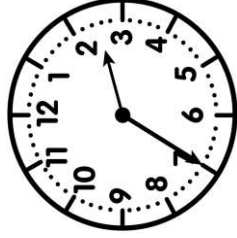
h h



h h




h h

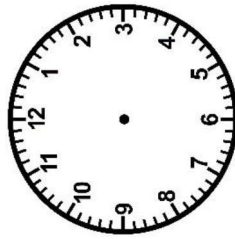


h h

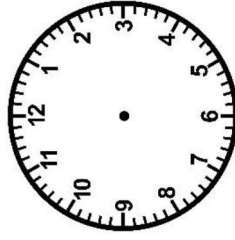
② Trace les aiguilles (rouge pour les heures, bleue pour les minutes).



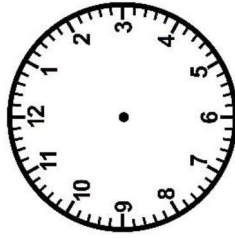
<https://laclassebleue.fr/>



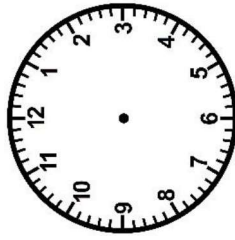
6 h 00



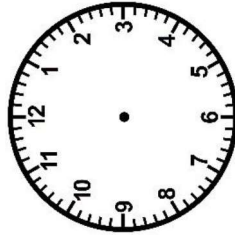
10 h 15



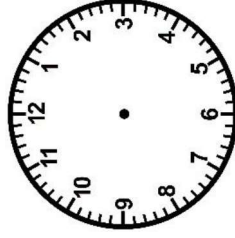
14 h 30



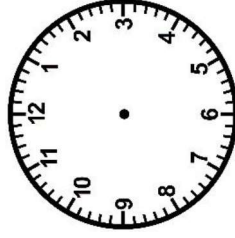
22 h 00



16 h 55



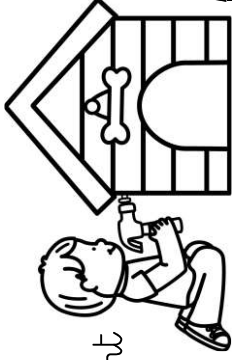
20 h 10



7 h 30

③ Résous ce problème.

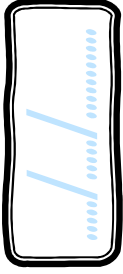

Le matin, Mhac et son père ont fabriqué une niche pour leur chien. Ils ont débuté à 9h30 et ont mis 3h30 pour la finir. À quelle heure ont-ils terminé ?



Meurea / re l'heure

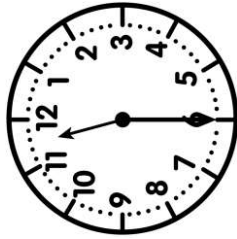
Meurea

CE2

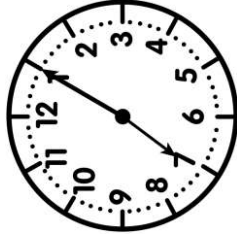


PRÉNOM:

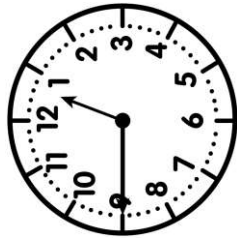
① Ecris l'heure sous chaque horloge.



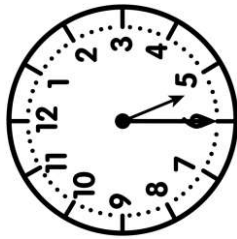
h h



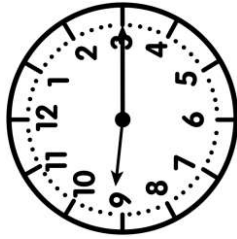
h h



h h



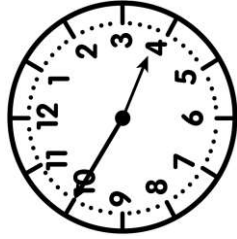
h h



h h



h h

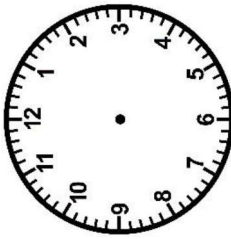
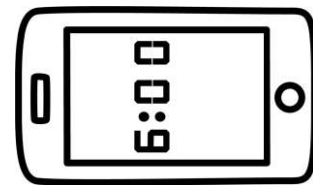


h h




② Trace les aiguilles (rouge pour les heures, bleue pour les minutes).

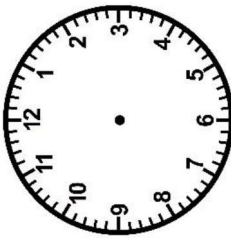
<https://laclassebleue.fr/>



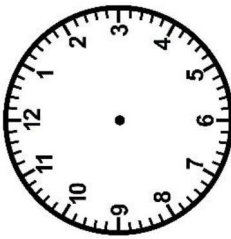
16 h 20



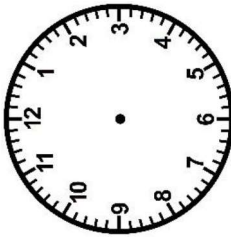
6 h 25




2 h 00




4 h 05



11 h 50



9 h 40




21 h 00

③ Résous ce problème.

Chaque samedi, la salle d'escalade ouvre de 10h à midi et de 13h30 à 17h00.

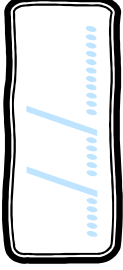

Combien de temps ouvre-t-elle dans la journée ?



Meurea lire l'heure

Maëra

CE2



PRÉNOM :

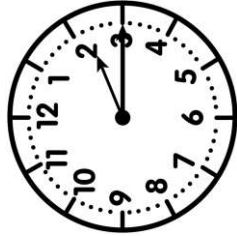
① Ecris l'heure sous chaque horloge.



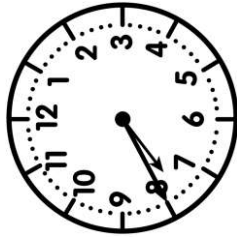
h _ h _



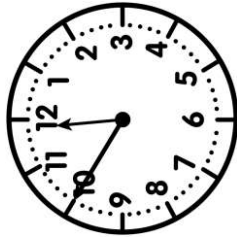
h _ h _



h _ h _



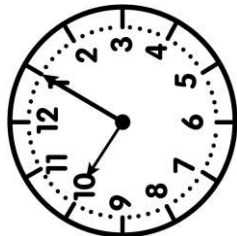
h _ h _



h _ h _

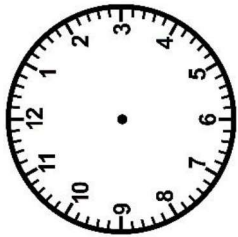



h _ h _

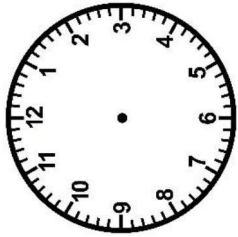


h _ h _

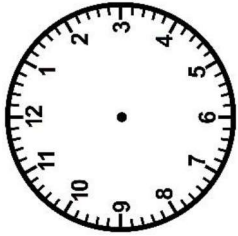
② Trace les aiguilles (rouge pour les heures, bleue pour les minutes).



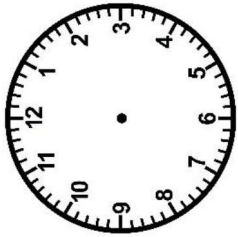
17 h 00



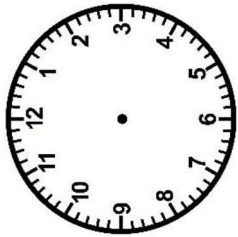
4 h 40



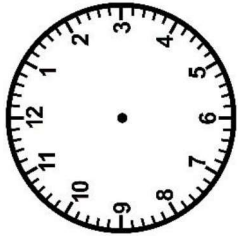
8 h 05



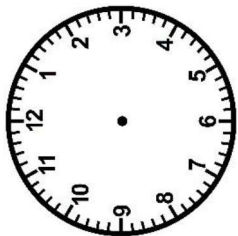
23 h 10



15 h 55



1 h 45




18 h 30

<https://laclassebleue.fr/>

③ Résous ce problème.

La mère de Maël a fait couler un bain. Il est resté dans son bain 45 min et est sorti de la salle de bains à 19h30. À quelle heure Maël est-il entré dans son bain ?



heures / re / heure