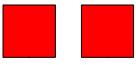



1 Complète ce qui manque:

Two rows of ten-frames. The first row shows a ten-frame with 2 red squares and 8 blue dots, with arrows pointing to the number 28. The second row shows a ten-frame with 3 red squares and 4 blue dots, with arrows pointing to the number 34.



2 Complète ce tableau:

25	 20  5	$25 = 20 + 5$
21	.....	$21 = \dots + \dots$
32	.....	$32 = \dots + \dots$
37	.....	$37 = \dots + \dots$
35	.....	$35 = \dots + \dots$

1 Complète ce qui manque:

Two rows of ten-frames. The first row shows a ten-frame with 2 red squares and 8 blue dots, with arrows pointing to the number 28. The second row shows a ten-frame with 3 red squares and 4 blue dots, with arrows pointing to the number 34.

2 Complète ce tableau:

25	 20  5	$25 = 20 + 5$
21	.....	$21 = \dots + \dots$
32	.....	$32 = \dots + \dots$
37	.....	$37 = \dots + \dots$
35	.....	$35 = \dots + \dots$