

Mémo 3

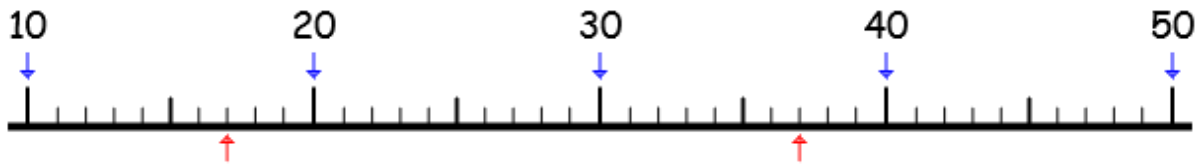
Exercice 1 : Range dans l'ordre croissant.

★ a) 14 - 29 - 95 - 31

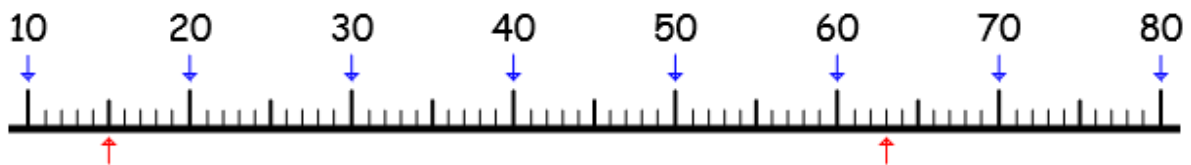
★★ b) 73 - 15 - 96 - 24 - 63 - 52

★★★ c) 57 - 76 - 45 - 89 - 34 - 64 - 12 - 48

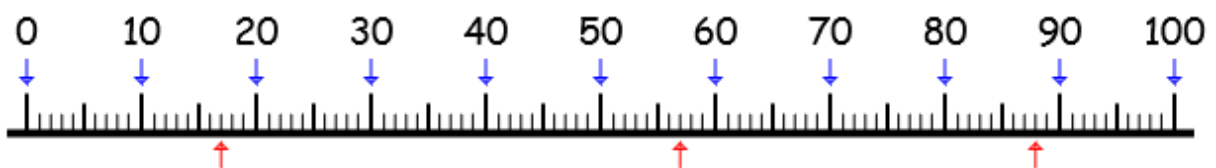
Exercice 2 : Indique à quels numéros correspondent les flèches du bas.



★ a)



★★ b)



★★★ c)

Mémo 3

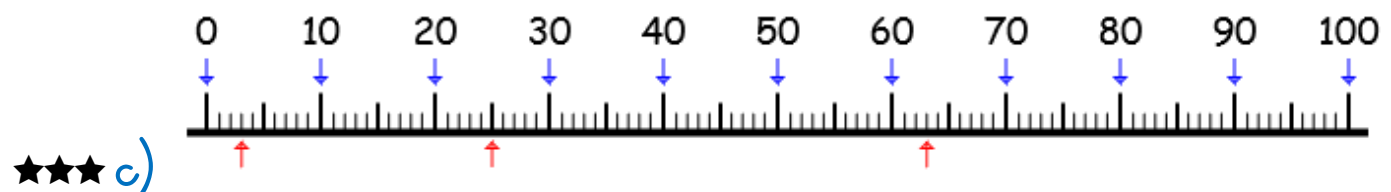
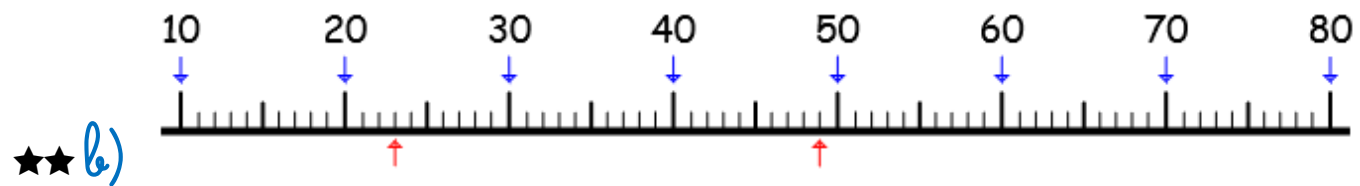
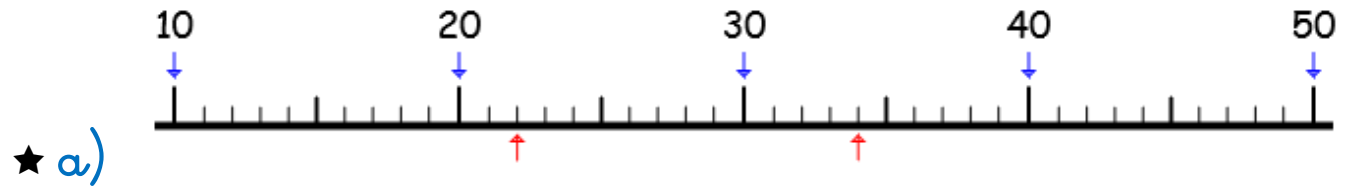
Exercice 1 : Range dans l'ordre décroissant.

★ a) 47 - 61 - 18 - 35

★★ b) 39 - 73 - 10 - 52 - 46 - 74

★★★ c) 65 - 69 - 40 - 7 - 29 - 46 - 91 - 31

Exercice 2 : Indique à quels numéros correspondent les flèches du bas.



Mémo 3

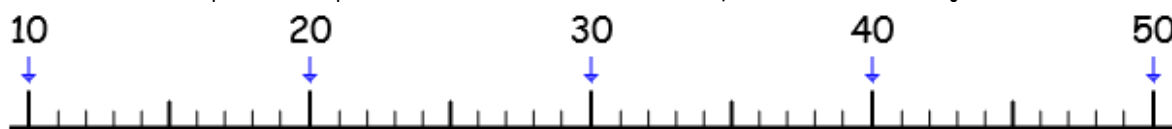
Exercice 1 : Range dans l'ordre croissant.

★ a) 59 - 13 - 27 - 87

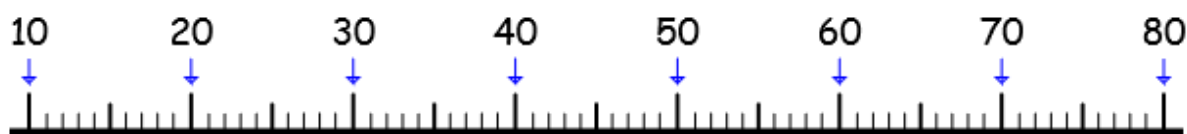
★★ b) 30 - 62 - 38 - 19 - 94 - 29

★★★ c) 27 - 35 - 49 - 5 - 29 - 51 - 16 - 53

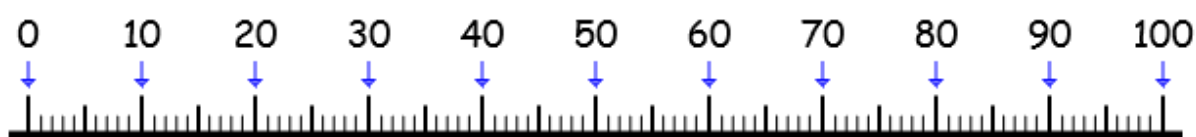
Exercice 2 : Indique à quels numéros correspondent les flèches du bas.



★ a)



★★ b)



★★★ c)

Mémo 3

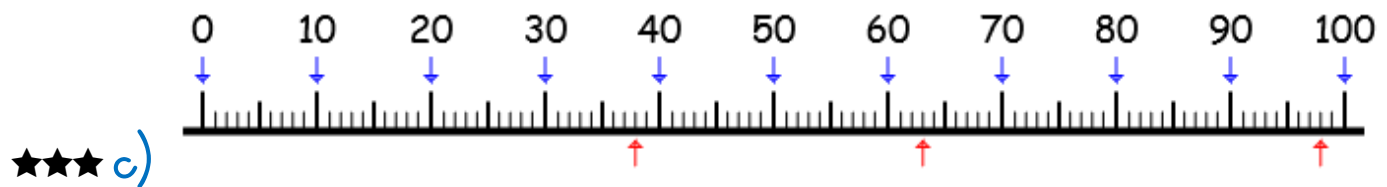
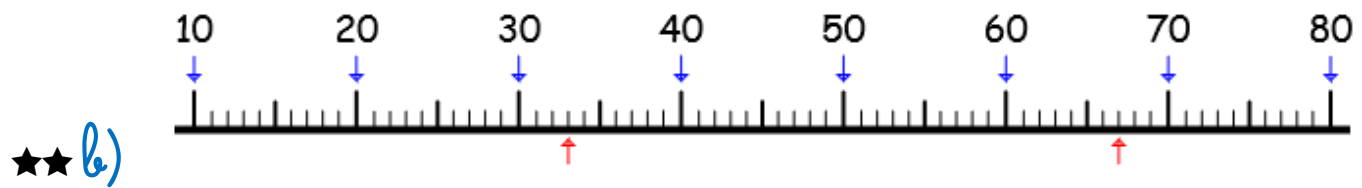
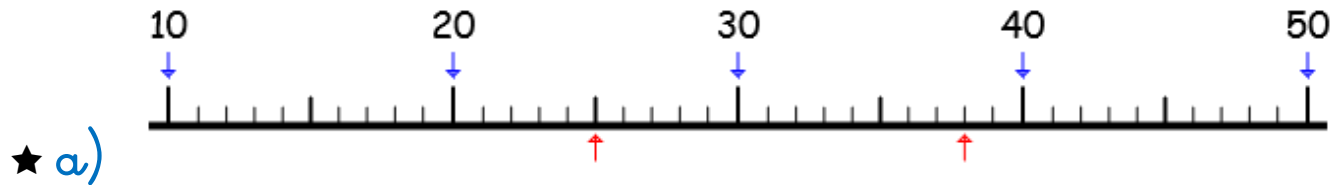
Exercice 1 : Range dans l'ordre décroissant.

★ a) 75 - 44 - 56 - 83

★★ b) 63 - 26 - 95 - 14 - 73 - 27

★★★ c) 57 - 62 - 45 - 51 - 43 - 35 - 34 - 44

Exercice 2 : Indique à quels numéros correspondent les flèches du bas.



Mémo 3

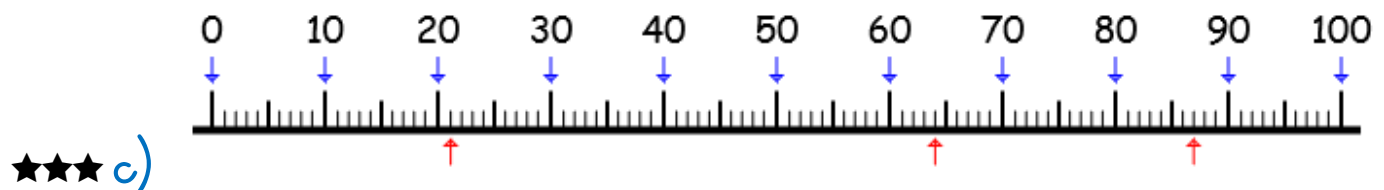
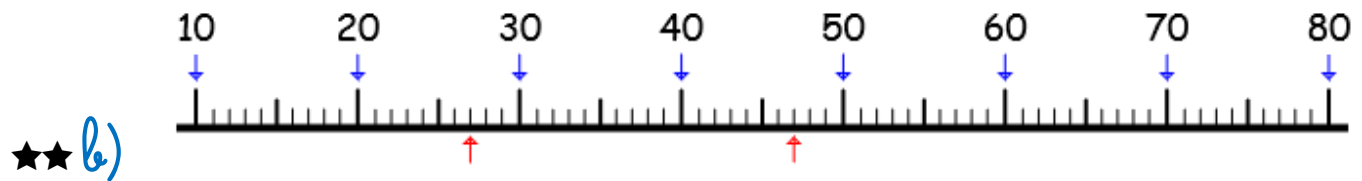
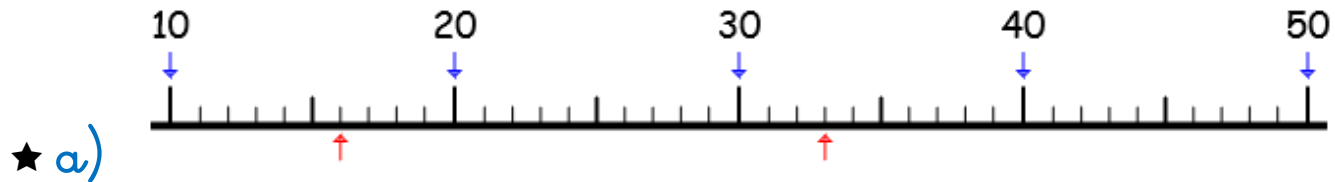
Exercice 1 : Range dans l'ordre croissant.

★ a) 57 - 76 - 45 - 89

★★ b) 16 - 62 - 48 - 84 - 37 - 68

★★★ c) 65 - 74 - 20 - 41 - 6 - 35 - 63 - 79

Exercice 2 : Indique à quels numéros correspondent les flèches du bas.



Mémo 3

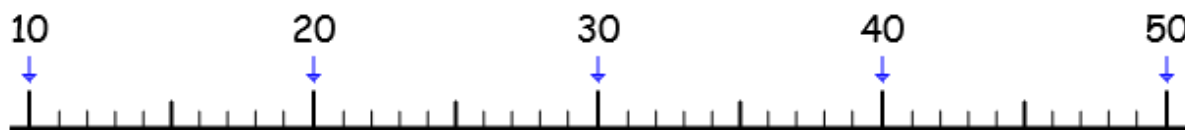
Exercice 1 : Range dans l'ordre décroissant.

★ a) 51 - 42 - 59 - 79

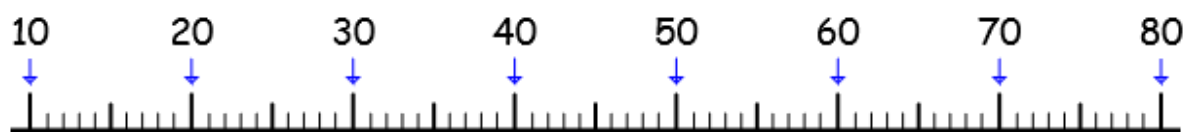
★★ b) 75 - 67 - 54 - 98 - 43 - 46

★★★ c) 29 - 25 - 43 - 11 - 9 - 90 - 93 - 28

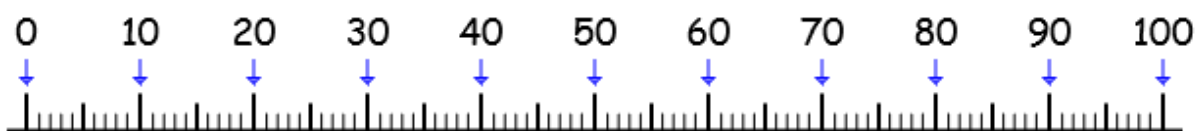
Exercice 2 : Indique à quels numéros correspondent les flèches du bas.



★ a)



★★ b)



★★★ c)

Mémo 3

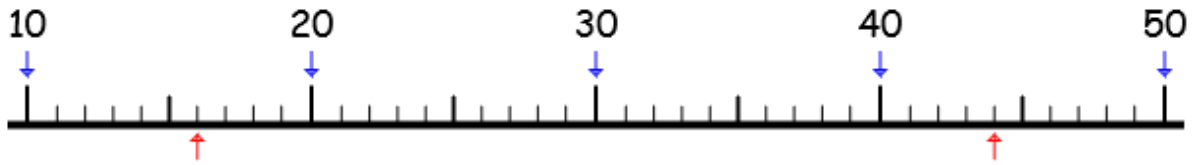
Exercice 1 : Range dans l'ordre croissant.

★ a) 48 - 53 - 17 - 72

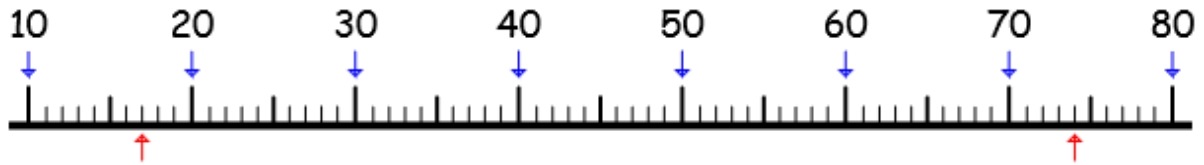
★★ b) 61 - 48 - 32 - 87 - 33 - 41

★★★ c) 5 - 14 - 41 - 11 - 4 - 40 - 43 - 89

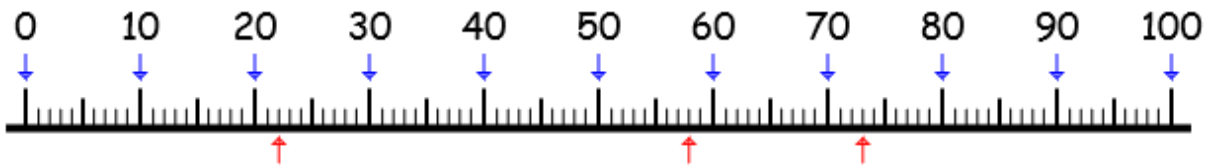
Exercice 2 : Indique à quels numéros correspondent les flèches du bas.



★ a)



★★ b)



★★★ c)

Mémo 3

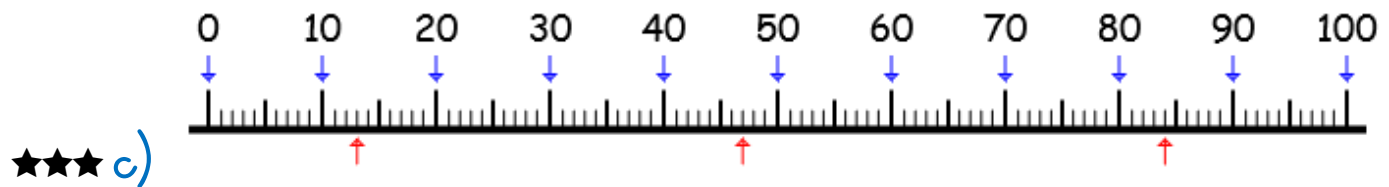
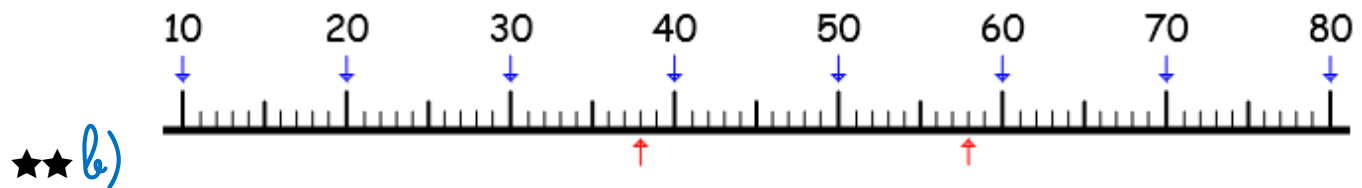
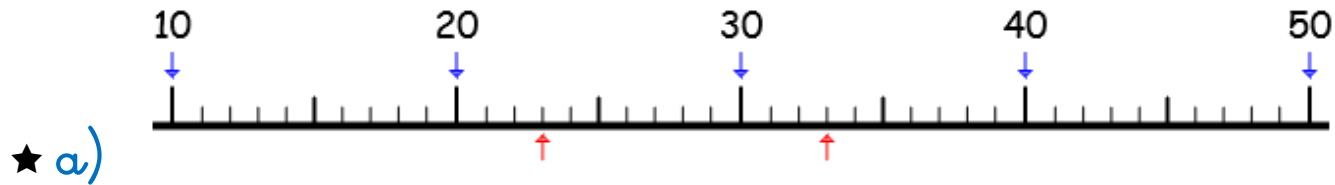
Exercice 1 : Range dans l'ordre décroissant.

★ a) 98 - 16 - 42 - 31

★★ b) 73 - 54 - 17 - 32 - 69 - 47

★★★ c) 29 - 24 - 20 - 21 - 2 - 30 - 23 - 39

Exercice 2 : Indique à quels numéros correspondent les flèches du bas.



EVALUATION

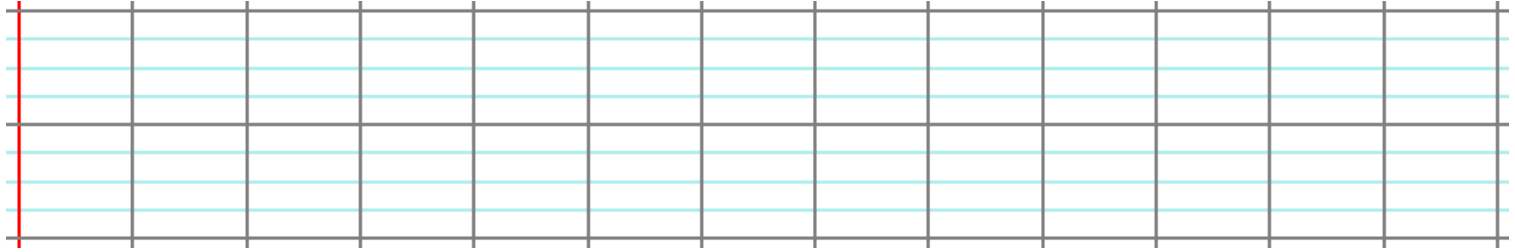
CE1

NUM7

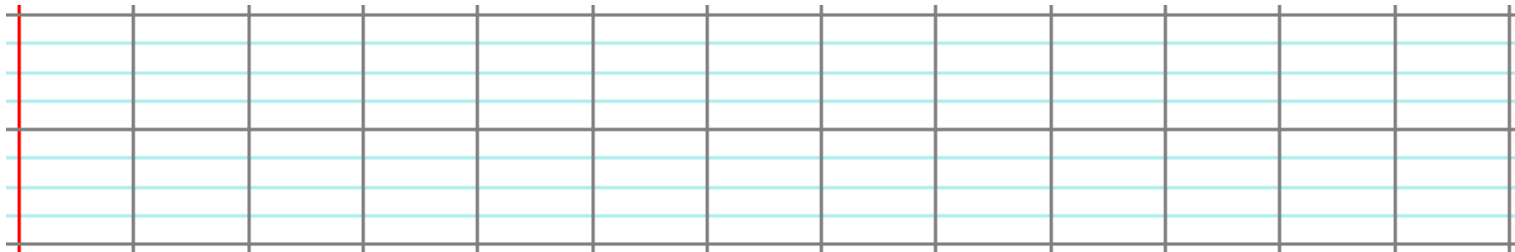
Compétence : Ranger les nombres par ordre croissant + Se repérer sur une frise numérique (jusqu'à 100)

Exercice 1 : Range dans l'ordre croissant.

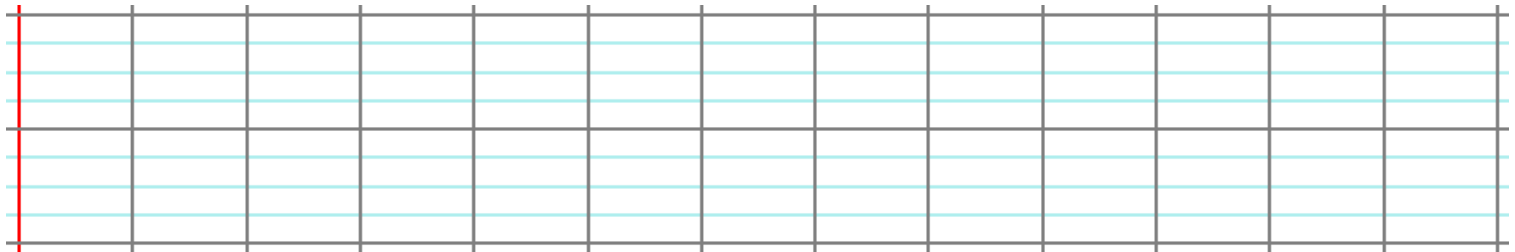
a) 34 - 97 - 52 - 41



b) 65 - 16 - 59 - 32 - 41 - 78



c) 75 - 67 - 54 - 98 - 43 - 46 - 21 - 84



Exercice 2 : Indique à quels numéros correspondent les flèches du bas.

