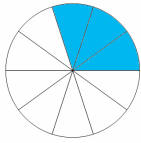
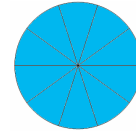
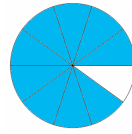
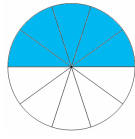


Mon nom : Des fractions plus petites que 1 ou égales à 1



$\frac{3}{10}$

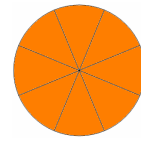
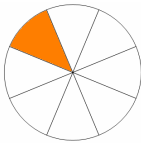
Trois dixièmes



.....

.....

.....

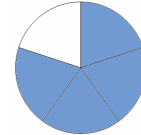
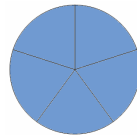
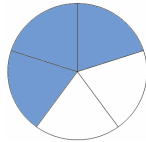
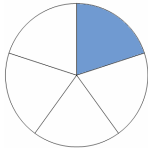


.....

.....

.....

.....


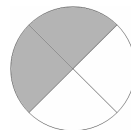




.....

.....

.....

.....

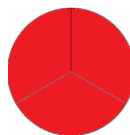


.....

.....

.....

.....



.....

.....

.....

Observe bien des fractions :

➤ Quelles sont les fractions égales à 1 ?

➤ Quelles sont les fractions égales à la moitié ?