


Activité
de découverte du sens
de la multiplication

□ + □ + □ + □ = □

4 groupes de □ = □

X



$$\square + \square + \square = \square$$

3 groupes de $\square = \square$

X



$$\square + \square + \square + \square = \square$$

4 groupes de $\square = \square$

X



$$\square + \square = \square$$

2 groupes de $\square = \square$




X



$$\square + \square + \square = \square$$

3 groupes de $\square = \square$


X



$$\square + \square + \square + \square = \square$$

4 groupes de $\square = \square$




X



$$\square + \square = \square$$

2 groupes de $\square = \square$

X



$$\square + \square + \square = \square$$

3 groupes de $\square = \square$

X



$$\square + \square + \square + \square = \square$$

4 groupes de $\square = \square$


X



$$\square + \square = \square$$

2 groupes de $\square = \square$





X



$$\square + \square + \square = \square$$

3 groupes de $\square = \square$

X



$$\square + \square + \square + \square = \square$$

4 groupes de $\square = \square$

X



$$\square + \square = \square$$

2 groupes de $\square = \square$

X