




✓ Je sais qu'une centaine, c'est dix dizaines. C'est aussi cent unités.



cent unités






dix dizaines



une centaine

Complète.

1



Il y a centaine, dizaines et unités.

Entoure 100 balles de tennis en un seul paquet.

2



Colorie les 5 nombres qui se suivent.

92

88

80

89

96

86

90

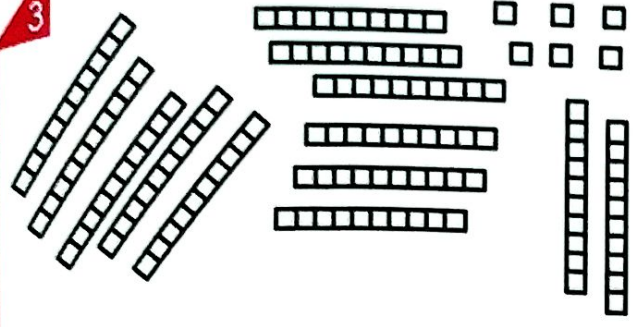
95

99

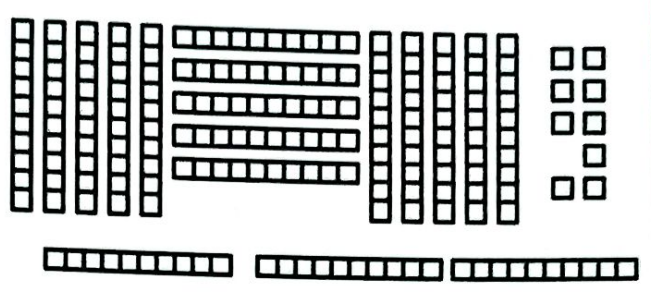
91

Fais des paquets de cent et des paquets de dix quand c'est nécessaire.


3




Il y a centaine, dizaines et unités.




Il y a centaine, dizaines et unités.



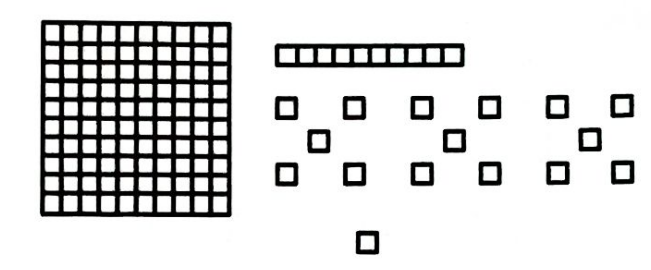
Il y a centaine, dizaine et unités.



Il y a centaine, dizaines et unité.



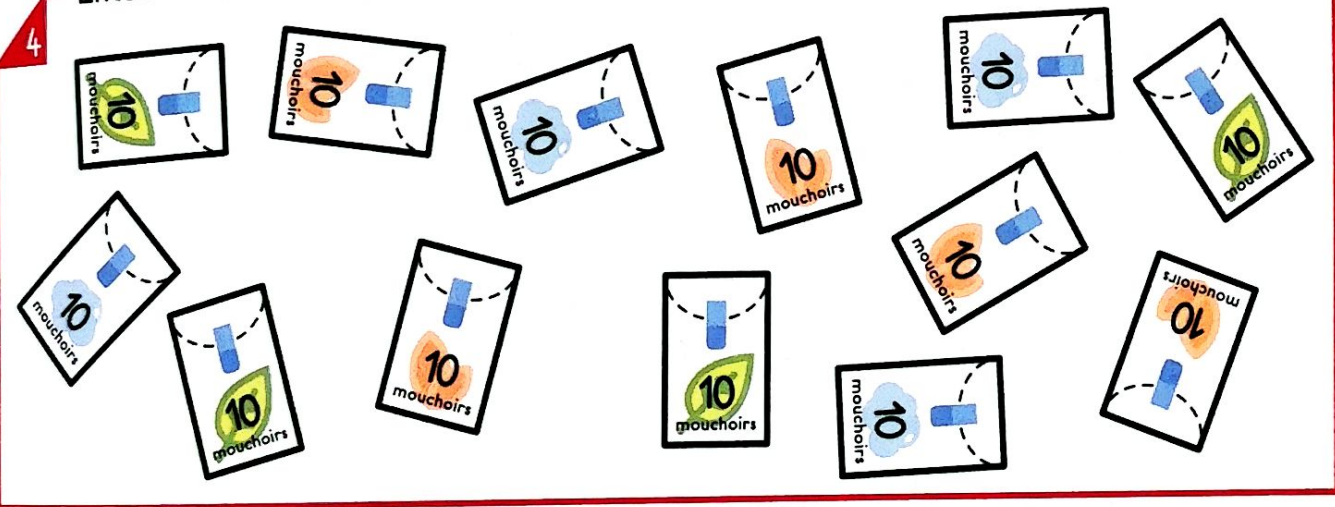
Il y a centaine, dizaines et unités.



Il y a centaine, dizaines et unités.

Entoure une centaine de mouchoirs et barre les paquets en trop.

4





Combien de pattes sont cachées?



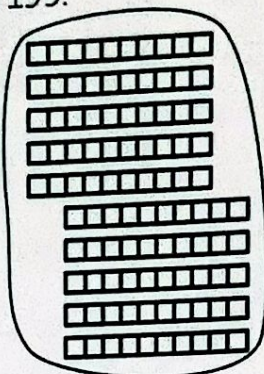

..... pattes sont cachées.

✓ Je sais écrire les nombres jusqu'à 199.




1 centaine 3 dizaines 7 unités

137



15 dizaines 4 unités
1 centaine 5 dizaines 4 unités

154





1 centaine
10 dizaines
100 unités

100


Complète.

1





Il y a centaine, dizaines et unités.

.....




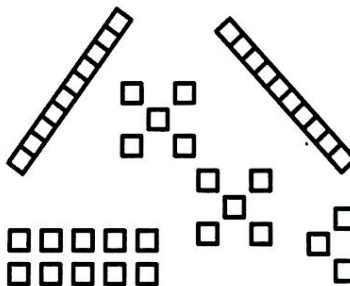
Il y a centaine, dizaines et unité.

.....



Il y a centaine, dizaine et unités.





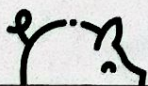
.....



Il y a centaine, dizaines et unités.

.....



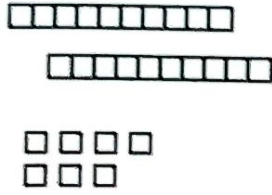

Combien de pattes sont cachées?



..... pattes sont cachées.




Barre les écritures qui ne correspondent pas au nombre de cubes.

2



~~217~~ 127 ~~17~~


108 183 180



153 431 351

314 107 170

Complète.



Il y a poissons.

4

Recopie dans ton cahier tout ce qui fait 172.



17 barres de dix et 2
 2 plaques de cent, 7 barres de dix et 1
 1 plaque de cent, 7 barres de dix et 2
 1 plaque de 100 et 72

172

5

Résous le problème dans ton cahier.



La directrice de l'école veut commander 190 mouchoirs.

Combien de paquets de 10 mouchoirs doit-elle acheter?



Mesure chaque segment et complète.

..... cm

..... cm

..... cm