

NUMERATION / CP

Les nombres jusqu'à 39

Colorie ce que tu entends et écris le nombre en chiffres :

10	20	30
----	----	----

1	2	3	4	5
6	7	8	9	

Arrows point from the 30 box of the first table to the top-left corner of the second table, and from the 7 box of the second table to the top-right corner of the third table.

10	20	30
----	----	----

1	2	3	4	5
6	7	8	9	

Arrows point from the 30 box of the first table to the top-left corner of the second table, and from the 7 box of the second table to the top-right corner of the third table.

10	20	30
----	----	----

1	2	3	4	5
6	7	8	9	

Arrows point from the 30 box of the first table to the top-left corner of the second table, and from the 7 box of the second table to the top-right corner of the third table.

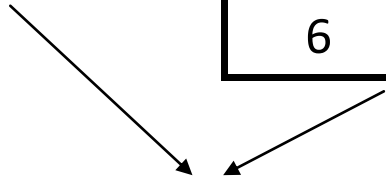
10	20	30
----	----	----

1	2	3	4	5
6	7	8	9	

Arrows point from the 30 box of the first table to the top-left corner of the second table, and from the 7 box of the second table to the top-right corner of the third table.

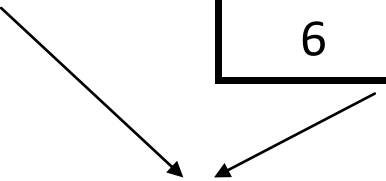
10	20	30
----	----	----

1	2	3	4	5
6	7	8	9	



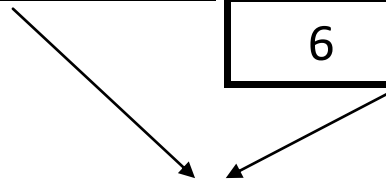
10	20	30
----	----	----

1	2	3	4	5
6	7	8	9	



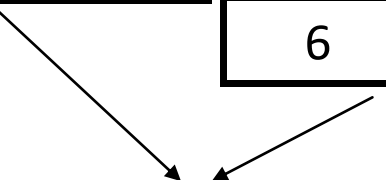
10	20	30
----	----	----

1	2	3	4	5
6	7	8	9	



10	20	30
----	----	----

1	2	3	4	5
6	7	8	9	



10	20	30
----	----	----

1	2	3	4	5
6	7	8	9	

