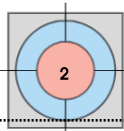


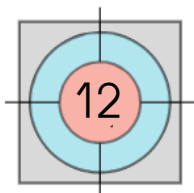
Prénom:

date

La Punta



Écris deux additions égales à 12

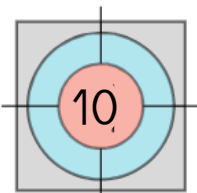


_____ = 12

_____ = 12

2 5 4 3 3 5

Écris deux additions égales à 10

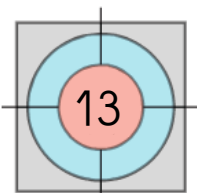


_____ = 10

_____ = 10

2 5 4 3 3 2

Écris deux additions égales à 13



_____ = 13

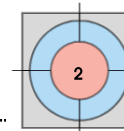
_____ = 13

6 5 1 6 2

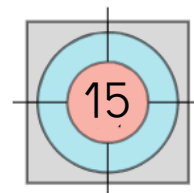
Prénom:

date

La Punta (2)



Écris deux additions égales à 15

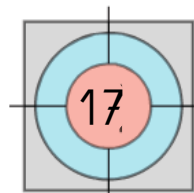


_____ = 15

_____ = 15

2 5 4 6 3 5

Écris deux additions égales à 17

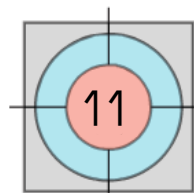


_____ = 17

_____ = 17

2 5 4 4 3 6

Écris deux additions égales à 11



_____ = 11

_____ = 11

4 5 1 6 2