

Date : _____


Prénom : _____

Mathématiques : La monnaie

Compétence : Connaître et utiliser l'euro : les pièces et billets


Colorie les billets et pièces nécessaires pour atteindre la somme donnée :

59 €




This block shows the components for 59 euros: six 10 Euro banknotes, three 5 Euro banknotes, three 2 Euro coins, and three 1 Euro coins.

35 €



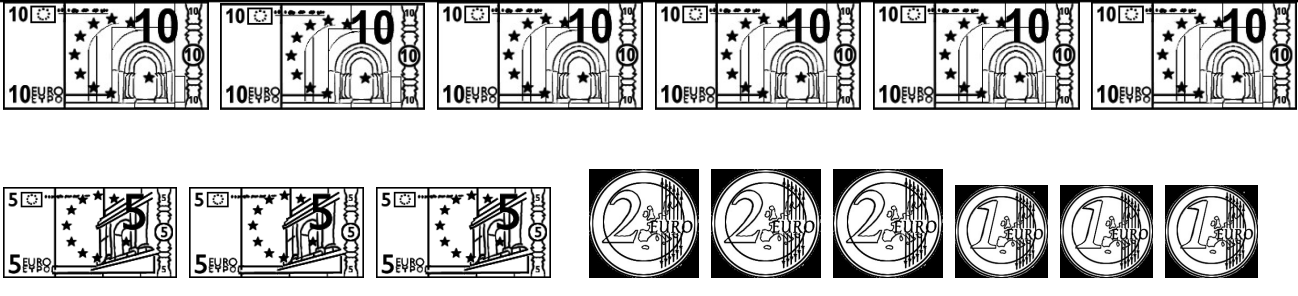
This block shows the components for 35 euros: five 10 Euro banknotes, three 5 Euro banknotes, three 2 Euro coins, and three 1 Euro coins.

43 €




This block shows the components for 43 euros: five 10 Euro banknotes, three 5 Euro banknotes, three 2 Euro coins, and three 1 Euro coins.

71 €



This block shows the components for 71 euros: six 10 Euro banknotes, three 5 Euro banknotes, three 2 Euro coins, and three 1 Euro coins.

62 €



Ecris la somme qui se trouve sans chacun des cadres :

