




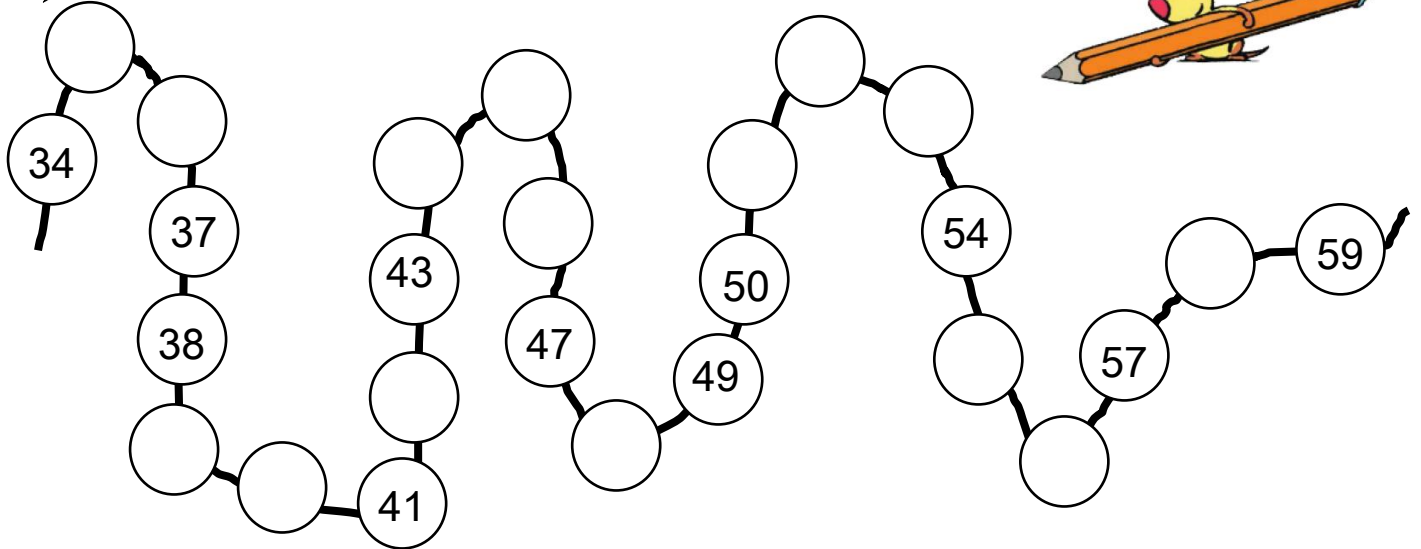
Je fais le point - 3

Mon prénom :

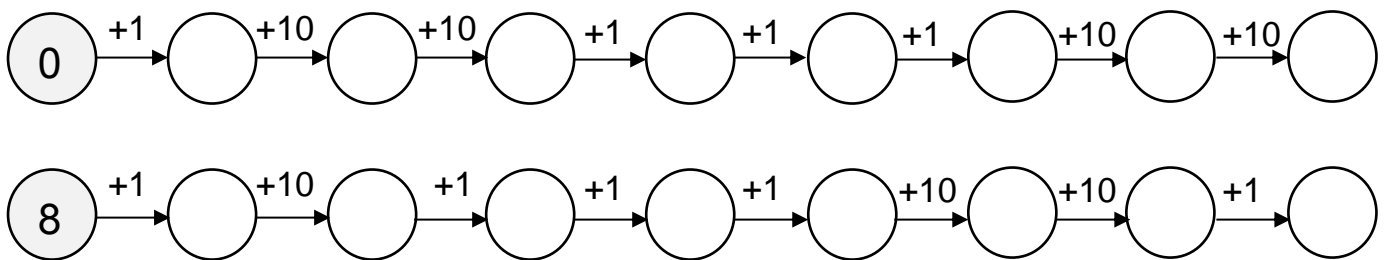
1. **Ecris les nombres dictés.** 😊 😐 😞 😢

a b c d e f g h i j

2. **Complète la file numérique.** 😊 😐 😞 😢



3. **Complète** 😊 😐 😞 😢






4. **Ecris le résultat des calculs dictés.** 😊 😐 😞 😢

a b c d e f g h


5. **Complète.** 😊 😐 😞 😢

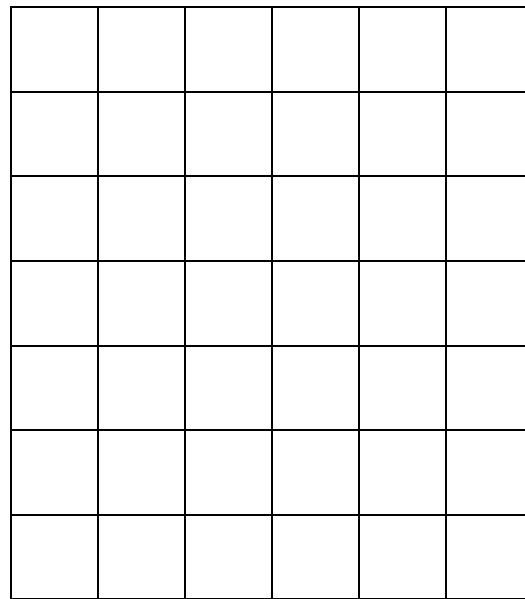
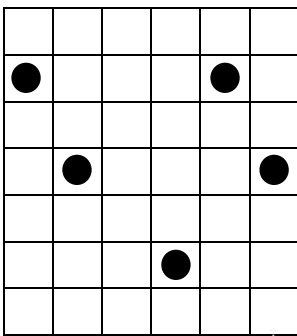
| | | | |
|-----------------|-----------------|------------------|------------------|
| $6 + 5 = \dots$ | $5 - 2 = \dots$ | $10 - \dots = 8$ | $10 - 2 = \dots$ |
| $7 - 4 = \dots$ | $8 - 3 = \dots$ | $3 + \dots = 10$ | $5 + \dots = 10$ |

6.  Ecris le nombre de timbres d'Arthur. 😊 😐 😢 😞





Arthur a timbres.

7.  Place les points comme sur le modèle. 😊 😐 😢 😞



8. Utilise l'unité violette.  Ecris la longueur des bandes. 😊 😐 😢 😞



La bande a mesure unités.

La bande b mesure unités.

La bande c mesure unités.

