

Comment calculer une addition ?

$$\begin{array}{r} \text{m} \quad \text{c} \quad \text{d} \quad \text{u} \\ 2 \quad 5 \quad 1 \quad 8 \\ + \quad \quad \quad 9 \quad 9 \\ \hline 2 \quad 6 \quad 1 \quad 7 \end{array}$$

$$\begin{array}{r} 2 \quad 5 \quad 1 \quad 8 \\ + \quad \quad \quad 9 \quad 9 \\ \hline \end{array}$$

$$\begin{array}{r} \text{m} \quad \text{c} \quad \text{d} \quad \text{u} \\ 2 \quad 5 \quad 1 \quad 8 \\ + \quad \quad \quad 9 \quad 9 \\ \hline \quad \quad 6 \quad 1 \quad 7 \end{array}$$

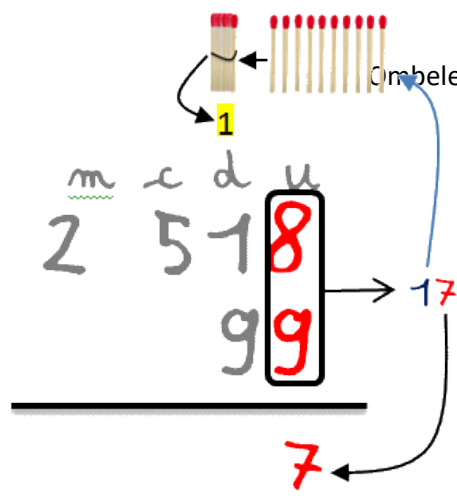
$$\begin{array}{r} \text{m} \quad \text{c} \quad \text{d} \quad \text{u} \\ 2 \quad 5 \quad 1 \quad 8 \\ + \quad \quad \quad 9 \quad 9 \\ \hline \end{array}$$

$$\begin{array}{r} \text{m} \quad \text{c} \quad \text{d} \quad \text{u} \\ 2 \quad 5 \quad 1 \quad 8 \\ + \quad \quad \quad 9 \quad 9 \\ \hline \quad \quad \quad \quad 1 \quad 1 \end{array}$$

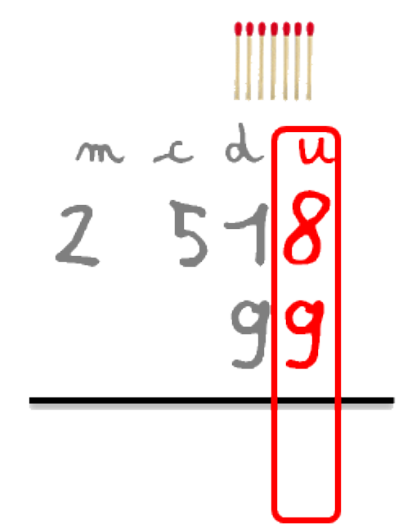
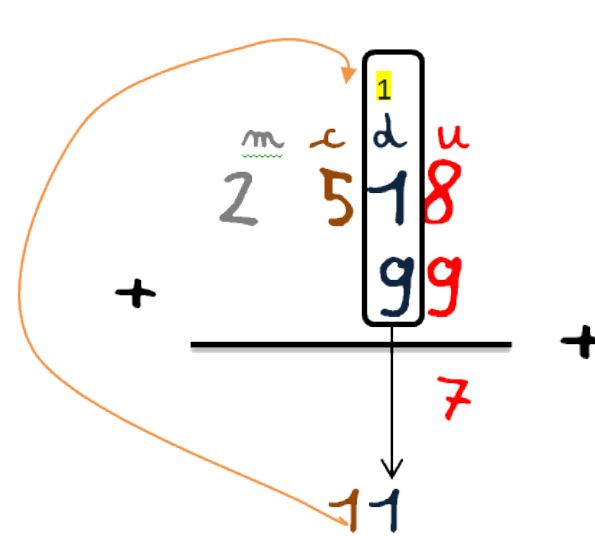
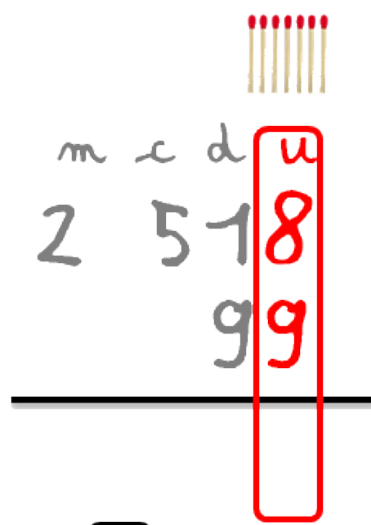
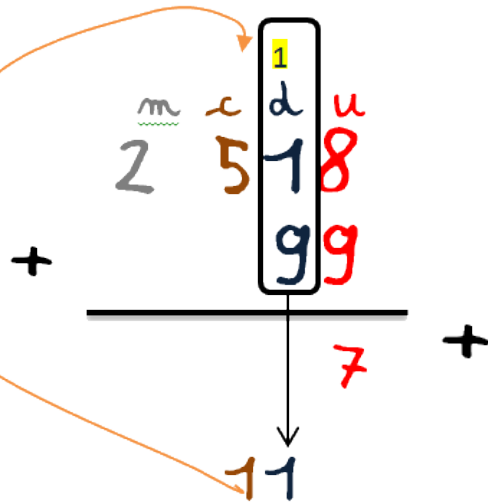
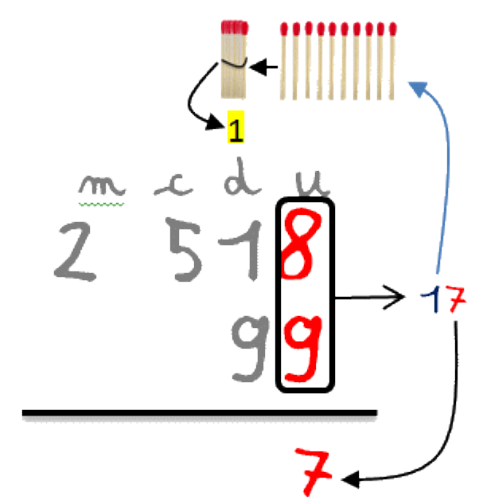
$$\begin{array}{r} \text{m} \quad \text{c} \quad \text{d} \quad \text{u} \\ 2 \quad 5 \quad 1 \quad 8 \\ + \quad \quad \quad 9 \quad 9 \\ \hline \quad \quad \quad \quad \quad 7 \end{array}$$

$$\begin{array}{r} \text{m} \quad \text{c} \quad \text{d} \quad \text{u} \\ 2 \quad 5 \quad 1 \quad 8 \\ + \quad \quad \quad 9 \quad 9 \\ \hline \quad \quad \quad \quad \quad 8 \end{array}$$

$$\begin{array}{r}
 2518 \\
 + 99 \\
 \hline
 2518 \\
 + 99 \\
 \hline
 \end{array}$$



$$\begin{array}{r}
 2518 \\
 + 99 \\
 \hline
 2518 \\
 + 99 \\
 \hline
 \end{array}$$



$$\begin{array}{r}
 2518 \\
 + 99 \\
 \hline
 2617
 \end{array}$$

$$\begin{array}{r}
 2518 \\
 + 99 \\
 \hline
 617
 \end{array}$$

$$\begin{array}{r}
 2518 \\
 + 99 \\
 \hline
 2617
 \end{array}$$

$$\begin{array}{r}
 2518 \\
 + 99 \\
 \hline
 617
 \end{array}$$