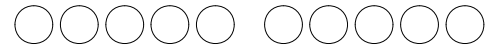


1 Représente avec des points, puis calcule:

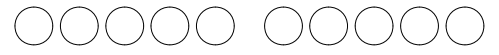
$6 + \dots = 10$

$10 - 6 = \dots$



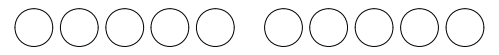
$7 + \dots = 10$

$10 - 7 = \dots$



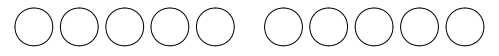
$8 + \dots = 10$

$10 - 8 = \dots$



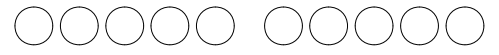
$5 + \dots = 10$

$10 - 5 = \dots$



$3 + \dots = 10$

$10 - 3 = \dots$



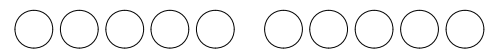
$9 + \dots = 10$

$10 - 9 = \dots$



$2 + \dots = 10$

$10 - 2 = \dots$



$4 + \dots = 10$

$10 - 4 = \dots$



2 Complète avec des euros.



=



=



=

