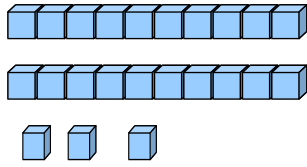
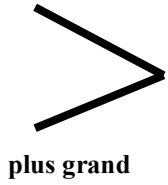
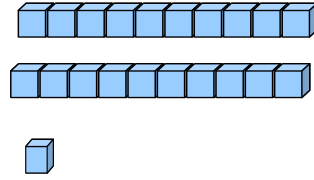


Les nombres dizaines et unités comparer

1) Compare les nombres suivants.



.....



.....

plus petit

.....

.....

.....

.....

.....

.....

.....

.....

.....

.....

.....

.....

.....

.....

.....

.....

.....

.....