









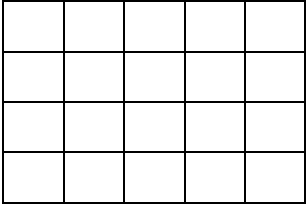

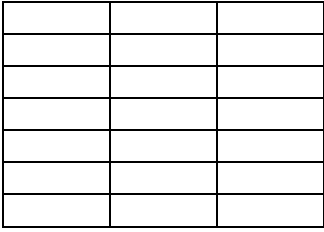


1- Combien y a-t-il de carrés dans ces rectangles.

	$\_\_ \times \_\_ = \_\_ \times \_\_ = \_\_$ <hr/>
	$\_\_ \times \_\_ = \_\_ \times \_\_ = \_\_$ <hr/>
	$\_\_ \times \_\_ = \_\_ \times \_\_ = \_\_$ <hr/>
	$\_\_ \times \_\_ = \_\_ \times \_\_ = \_\_$ <hr/>

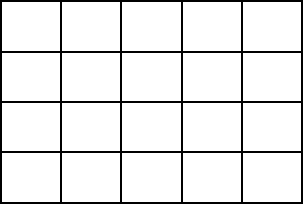

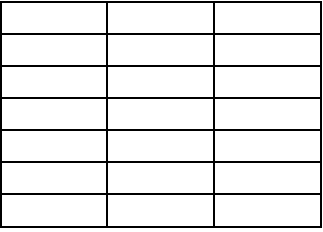


1- Combien y a-t-il de carrés dans ces rectangles.

	$\_\_ \times \_\_ = \_\_ \times \_\_ = \_\_$ <hr/>
	$\_\_ \times \_\_ = \_\_ \times \_\_ = \_\_$ <hr/>
	$\_\_ \times \_\_ = \_\_ \times \_\_ = \_\_$ <hr/>
	$\_\_ \times \_\_ = \_\_ \times \_\_ = \_\_$ <hr/>

1- Combien y a-t-il de carrés dans ces rectangles.

	$\_\_ \times \_\_ = \_\_ \times \_\_ =$ _____ _____ _____
	$\_\_ \times \_\_ = \_\_ \times \_\_ =$ _____ _____ _____
	$\_\_ \times \_\_ = \_\_ \times \_\_ =$ _____ _____ _____
	$\_\_ \times \_\_ = \_\_ \times \_\_ =$ _____ _____ _____
	$\_\_ \times \_\_ = \_\_ \times \_\_ =$ _____ _____ _____

1- Combien y a-t-il de carrés dans ces rectangles.

	$\_\_ \times \_\_ = \_\_ \times \_\_ =$ _____ _____ _____
	$\_\_ \times \_\_ = \_\_ \times \_\_ =$ _____ _____ _____
	$\_\_ \times \_\_ = \_\_ \times \_\_ =$ _____ _____ _____
	$\_\_ \times \_\_ = \_\_ \times \_\_ =$ _____ _____ _____
	$\_\_ \times \_\_ = \_\_ \times \_\_ =$ _____ _____ _____